

**GENERAL  
KNOWLEDGE  
&  
AWARENESS**

1. **WHAT IS THE CAPITAL OF TELANGANA?**
  - A) Lucknow
  - B) Hyderabad
  - C) Bhopal
  - D) Mumbai
  
2. **WHAT IS THE CAPITAL OF UTTAR PRADESH?**
  - A) Imphal
  - B) Sikkim
  - C) Lucknow
  - D) Dehradun
  
3. **WHAT IS THE CAPITAL OF MAHARASHTRA?**
  - A) Mumbai
  - B) Jaipur
  - C) Gangtok
  - D) Chennai
  
4. **WHAT IS THE CAPITAL OF ASSAM?**
  - A) Patna
  - B) Shimla
  - C) Dispur
  - D) Pannaji
  
5. **WHAT IS THE CAPITAL OF MEHGHALAYA?**
  - A) Buaneshwar
  - B) Aizwal
  - C) Shillong
  - D) Kohima
  
6. **WHAT IS THE CAPITAL OF WEST BENGAL?**
  - A) Kolkata
  - B) Bhopal
  - C) Jaipur
  - D) Bengaluru
  
7. **WHAT IS THE CAPITAL OF ODISHA?**
  - A) Chandigarh
  - B) Ranchi
  - C) Agartala
  - D) Buaneshwar
  
8. **WHAT IS THE CAPITAL OF ARUNACHAL PRADESH?**
  - A) Itanagar
  - B) Raipur
  - C) Srinagar
  - D) Shimla
  
9. **WHAT IS THE CAPITAL OF ANDAMAN AND NICOBAR ISLAND?**
  - A) Silvassa
  - B) Port blair
  - C) Delhi
  - D) Daman

- 10. WHAT IS THE CAPITAL OF AFGANISTAN?**  
A) Kabul  
B) Baku  
C) Saint Johns  
D) Algiers
- 11. THE LANGUAGE SPOKEN BY THE PEOPLE BY PAKISTAN IS?**  
A) Hindi  
B) Palauan  
C) Sindhi  
D) Nauruan
- 12. THE WORLD LARGEST DESSERT IS?**  
A) Thar  
B) Kalahari  
C) Sahara  
D) Sonoran
- 13. COUNTRY THAT HAS HIGHEST BARLEY PRODUCTION?**  
A) China  
B) Russia  
C) India  
D) France
- 14. MOUNT EVEREST IS LOCATED IN?**  
A) Nepal  
B) Tibbet  
C) China  
D) India
- 15. WHICH SOIL IS SUITABLE FOR AGRICULTURE?**  
A) Red Soil  
B) Sand  
C) Black Soil  
D) Peaty Soil
- 16. THE GATE WAY OF INDIA IS?**  
A) Chennai  
B) Mumbai  
C) New Delhi  
D) Kolkata
- 17. THE FIRST CHAIRMAN OF THE ATOMIC ENERGY COMMISION WAS?**  
A) Dr. C.V. Raman  
B) Dr. H.J. Bhabha  
C) Dr. A.P.J. Abdul Kalam  
D) Dr. Vikram Sarabhai
- 18. WHICH IS CONSIDERED AS THE BIGGEST PORT OF INDIA?**  
A) Kolkata  
B) Chennai  
C) Mumbai  
D) Cochin

- 19. THE GAS USED FOR MAKING VEGETABLES IS?**  
A) Oxygen  
B) Carbon dioxide  
C) Hydrogen  
D) Nitrogen
- 20. SARAVATI PROJECTS IS IN?**  
A) Orrisa  
B) Andra Pradesh  
C) Kerala  
D) Karnataka
- 21. COUNTRY THAT WAS CALLED AS LAND OF RISING SUN?**  
A) Russia  
B) Japan  
C) Korea  
D) Holland
- 22. PINK CITY IN INDIA IS?**  
A) Mysore  
B) Karnataka  
C) Hyderabad  
D) Jaipur
- 23. DEFICIENCY OF IRON LEADS TO?**  
A) Rickets  
B) Malaria  
C) Anaemia  
D) Dental Cavity
- 24. THE STATE WHICH HAS DESERT IN INDIA IS?**  
A) Rajasthan  
B) Punjab  
C) Uttar Pradesh  
D) Madhya Pradesh
- 25. THE HEADQUARTERS OF THE COFFEE BOARD OF INDIA IS?**  
A) Mysore  
B) Kolkata  
C) Bangalore  
D) Cochin
- 26. THE LARGEST FRESH WATER LAKE IN INDIA IS?**  
A) Pulicat Lake  
B) Veeranam Lake  
C) Chilka Lake  
D) Wular Lake
- 27. THE LARGEST RIVER IN INDIA IS?**  
A) Yamuna  
B) Kavery  
C) Ganga  
D) Bramaputra

- 28. THE HINDUSTAN SHIPYARD IS LOCATED IN?**  
A) Chennai  
B) Mumbai  
C) Vishakapatnam  
D) Manglore
- 29. WHICH CITY IS FAMOUS FOR COTTON INDUSTRY IN TAMILNADU?**  
A) Coimbatore  
B) Trichy  
C) Madurai  
D) Chennai
- 30. THE HOTTEST PLANET IN THE SOLAR SYSTEM?**  
A) Earth  
B) Venus  
C) Mars  
D) Jupiter
- 31. "ONE PEOPLE, ONE STATE, ONE LEADER" WAS THE POLICY OF?**  
A) STALIN  
B) Hitler  
C) Lenin  
D) Mussolin
- 32. WHO AMONG THE FOLLOWING APPOINTS THE PRIME MINISTER OF INDIA?**  
A) Lok Sabha  
B) Rajya Sabha  
C) President of India  
D) Chief justice of Supreme Court
- 33. WHICH GAS IS USED FOR THE PREPARATION OF SODA WATER?**  
A) Oxygen  
B) Carbon Dioxide  
C) Ammonia  
D) Hydrogen
- 34. HEADQUATERS OF UNO ARE SITUATED AT \_\_\_\_\_.**  
A) New York, USA  
B) Hague ( Netherlands)  
C) Geneva  
D) Paris
- 35. THE CROP IS SOWN ON THE LARGEST AREA IN INDIA?**  
A) Rice  
B) Wheat  
C) Sugarcane  
D) Maize
- 36. THE GIR NATIONAL PARK IS SITUATED IN \_\_\_\_\_.**  
A) Bihar  
B) Allahabad  
C) West Bengal  
D) Gujarat
- 37. MADHARASAS ARE THE SCHOOLS OF \_\_\_\_\_.**  
A) Jain

- B) Hindus
- C) Muslims
- D) Christians

**38. WHO AMONG THE FOLLOWING HAS WON THE NOBLE PRIZE 2019 IN LITERATURE?**

- A) Richard H Thaler
- B) Peter Handke
- C) Kip S. Thorne
- D) Kazuo Ishiguro

**39. OSCAR AWARDS GIVEN FOR EXCELLENT WORK IN THE FIELD OF \_\_\_\_\_.**

- A) Literature
- B) Sports
- C) Films
- D) Social Activities

**40. THE HIGHEST PEAK IN SOUTH INDIA IS \_\_\_\_\_.**

- A) Everest
- B) Doddabetta
- C) Nilgiri Hills
- D) Anaimudi

**41. WHICH FO THE FOLLOWING IS THE MOST POWERFUL TYPE OF COMPUTER?**

- A) Super- micro
- B) Super conductor
- C) Megaframe
- D) Super computer

**42. WHICH IS THE SINGLE INTEGRATED CIRCUIT?**

- A) Gate
- B) MotherBoard
- C) Chip
- D) CPU

**43. WEB PAGES ARE WRITTEN USING?**

- A) FTP
- B) HTTP
- C) HTML
- D) URL

**44. WHICH OF THE FOLLOWING IS AND EXAMPLE OF NON VOLATILE MEMORY?**

- A) VLSI
- B) LSI
- C) ROM
- D) RAM

**45. FIND THE ODD ONE OUT?**

- A) ORACLE
- B) SYBASE
- C) C
- D) INFORMIX

**46. FPI STANDS FOR?**

- A) Faults per inch
- B) Frames per inch

- C) Figure per inch
- D) Film per inch

**47. WHAT IS THE FULL FORM OF IP?**

- A) Interface Program
- B) Interface Protocol
- C) Internet program
- D) Internet Protocol

**48. ONE BYTE IS EQUIVALENT TO?**

- A) 4 bits
- B) 8 bits
- C) 12 bits
- D) 32 bits

**49. FIND THE ODD ONE OUT?**

- A) Mouse
- B) Keyboard
- C) Printer
- D) Touch Screen

**50. INDIA'S FIRST SUPER COMPUTER IS \_\_\_\_\_.**

- A) Agni
- B) Flow Solver
- C) Param
- D) Trisul

**51. DINAR IS THE CURRENCY OF WHICH OF THE FOLLOWING COUNTRY?**

- A) Bahrain
- B) Brazil
- C) Bhutan
- D) Georgia

**52. WHAT IS THE CAPITAL OF TAJIKISTAN?**

- A) Moscow
- B) Dodoma
- C) Damascus
- D) Dushanbe

**53. WHICH OF THE FOLLOWING IS CAPITAL OF GEORGIA?**

- A) Tbilisi
- B) Thimpu
- C) Riga
- D) Tehran

**54. WHICH COUNTRY HAS ANNOUNCED THE PLAN TO ADOPT CHINESE YUAN AS LEGAL TENDER?**

- A) Ethiopia
- B) Nigeria
- C) Liberia
- D) Zimbabwe

**55. THE CAPITAL OF RUSSIA IS \_\_\_\_\_.**

- A) St. Petersburg
- B) Moscow

- C) Abaza
- D) Kiev

**56. WHAT IS THE NATIONAL CURRENCY OF JORDAN?**

- A) Jordanian Down
- B) Jordanian Shekel
- C) Jordanian Dinar
- D) Jordanian Liire

**57. EURO IS THE CURRENCY OF WHICH OF THE FOLLOWING COUNTRY?**

- A) Colombia
- B) Cyprus
- C) Chile
- D) Canada

**58. INDONESIA'S CURRENCY IS \_\_\_\_\_.**

- A) Rial
- B) Rupee
- C) Dollar
- D) Yen

**59. THE CURRENCY OF JAPAN IS \_\_\_\_\_.**

- A) Yuan
- B) Ringgit
- C) Dollar
- D) Yen

**60. WHICH IS THE CAPITAL OF THAILAND?**

- A) Bangkok
- B) Berne
- C) Jakarta
- D) Rangoon

**61. WHAT IS THE CAPITAL OF PARAGUAY?**

- A) Asuncion
- B) Russia
- C) London
- D) Ankara

**62. WHAT IS THE WORLD AIDS DAY OBSERVED ALL OVER THE WORLD?**

- A) 1<sup>st</sup> October
- B) 1<sup>st</sup> December
- C) 12<sup>th</sup> November
- D) 12<sup>th</sup> December

**63. WHEN IS EARTH DAY CELEBRATED?**

- A) 1<sup>st</sup> January
- B) 30<sup>th</sup> April
- C) 22<sup>nd</sup> April
- D) None of these

**64. EASTER FALLS ON WHICH DAY?**

- A) Sunday
- B) Friday
- C) Monday
- D) Thursday



65. **VALENTINE'S DAY IS CELEBRATED ON \_\_\_\_\_.**  
A) October 21  
B) December 14  
C) February 14  
D) November 14
66. **NO TOBACCO DAY FALLS ON \_\_\_\_\_.**  
A) June 30  
B) May 31  
C) April 30  
D) September 31
67. **ON WHICH DAY OF THE FOLLOWING DATES WAS HIROSHIMA DAY OBSERVED?**  
A) August 15, 1999  
B) August 6, 1999  
C) August 7, 1999  
D) August 27, 1999
68. **WHICH OF THE FOLLOWING DAY IS OBSERVED AS THE ENVIRONMENT DAY?**  
A) 28<sup>th</sup> February  
B) 4<sup>th</sup> March  
C) 5<sup>th</sup> June  
D) 16<sup>th</sup> September
69. **WHEN WAS THE AIR MAIL SERVICE INTRODUCED?**  
A) 1879  
B) 1907  
C) 1935  
D) 1911
70. **SWAMI VIVEKANANDA'S BIRTHDAY IS OBSERVED IN INDIA WAS \_\_\_\_\_.**  
A) World Religious Day  
B) National Youth Day  
C) All Saints Day  
D) Hindu Renaissance Day
71. **WORLD POPULATION DAY IS OBSERVED?**  
A) June 11  
B) July 28  
C) July 7  
D) July 11
72. **HUMAN RIGHTS DAY IS OBSERVED ON \_\_\_\_\_.**  
A) December 10  
B) December 25  
C) December 14  
D) December 28
73. **FRIENDSHIP DAY IS CELEBRATED ON \_\_\_\_\_.**  
A) August 1  
B) August 3  
C) August 5  
D) August 8

- 74. WHEN WAS THE FIRST ONE DAY CRICKET MATCH PLAYED?**  
A) 1971  
B) 1974  
C) 1978  
D) 1976
- 75. WHO WROTE THE BOOK “THE GOD FATHER”?**  
A) Agatha Christie  
B) V.S. Naipaul  
C) Ian Fleming  
D) Mario Puzo
- 76. WHO HAS WON THE MEN’S SINGLES FRENCH OPEN TENNIS TOURNAMENT 2018?**  
A) Novak Djokovic  
B) Dominic Thiem  
C) Roger Federer  
D) Rafael Nadal
- 77. DEEPAK KUMAR, AN INDIAN PLAYER BELONGS TO WHICH SPORT?**  
A) Boxing  
B) Shooting  
C) Wrestling  
D) Cricket
- 78. WHICH OF THE FOLLOWING STATE HAS TOPPED IN PADDY PRODUCTION?**  
A) Telangana  
B) Punjab  
C) West Bengal  
D) Uttar Pradesh
- 79. WHO HAS BEEN NEWLY APPOINTED AS THE GOVERNOR OF MIZORAM?**  
A) P.K. Krishna Das  
B) P.S.Sreedharan Pillai  
C) Jagdish Mukhi  
D) Ch Chhanga
- 80. WHICH IS THE FOURTH STATION TO BECOME VISUALLY CHALLENGED-FRIENDLY?**  
A) Bengaluru Railway Station  
B) New Delhi Railway Station  
C) Panipat Railway Station  
D) Coimbatore Railway Station
- 81. WHO STARTED THE FIRST ENGLISH NEWSPAPER IN INDIA?**  
A) Bal Gangadhar Tilak  
B) Raja Rammohan Roy  
C) J.A. Hickey  
D) Lord William Bentinck
- 82. NAOXHALI IS SITUATED IN –**  
A) West Bengal  
B) Bangladesh  
C) Tripura  
D) Assam

- 83. THE SYSTEM OF JUDICIAL REVIEW IN INDIAN CONSTITUTION ADOPTED FROM-**  
A) Nepal  
B) Germany  
C) U.K.  
D) U.S.A
- 84. THE CONSTITUTION OF INDIA WAS ADOPTED BY THE CONSTITUENT ASSEMBLY ON-**  
A) 26 January , 1950  
B) 26 January, 1949  
C) 26 November, 1949  
D) None
- 85. ON WHICH DAY IS NATIONAL YOUTH DAY MADE?**  
A) 15 January  
B) 9 January  
C) 12 January  
D) 18 January
- 86. BALLOONS ARE FILLED WITH \_\_\_\_\_.**  
A) Helium  
B) Argon  
C) Nitrogen  
D) Oxygen
- 87. WHICH NON-TOXIC GAS HELPS IN FORMATION OF ENZYMES WHICH RIPEN FRUIT?**  
A) Acetylene  
B) Ethane  
C) Methane  
D) Carbon dioxide
- 88. WHICH TELECOMMUNICATIONS COMPANY HAS PARTNERED WITH GOOGLE FOR EXPANDING ITS WIFI FOOTPRINT?**  
A) Reliance jio  
B) Vodafone Group Plc  
C) Bharat Sanchar Nigam Limited (BSNL)  
D) Bharti Airtel
- 89. WHO HAS BEEN ELECTED AS THE PRESIDENT OF INDONESIA?**  
A) Joko Widodo  
B) Sandiaga Uno  
C) Prabowo Subianto  
D) Anies Baswedan
- 90. WHO HAS SWORN IN AS THE CHIEF MINISTER OF ANDHRA PRADESH?**  
A) E.S.L. Narasimhan  
B) Koramutla Sreenivasulu  
C) N. Chandrababu Naidu  
D) YS Jaganmohan Reddy
- 91. WHICH COUNTRY RELEASES A SPECIAL STAMP ON RAMAYANA THEME?**  
A) Indonesia  
B) Srilanka  
C) India  
D) Malaysia

92. **WHERE DID INDIA'S FIRST 'VOTER PARK' INAUGURATED?**  
A) Ghaziabad  
B) Mumbai  
C) Gurugram  
D) Noida
93. **RANGASWAMY CUP IS ASSOCIATED WITH \_\_\_\_\_.**  
A) Archery  
B) Cricket  
C) Football  
D) Hockey
94. **STUDY OF EARTHQUAKE IS KNOWN AS \_\_\_\_\_.**  
A) Ecology  
B) Seismology  
C) Numismatics  
D) None of the above
95. **THE 'RED TRIANGLE' SYMBOL DENOTES \_\_\_\_\_.**  
A) Air India  
B) Family Planning  
C) Culture and Civilization  
D) None of the above
96. **PRESSURE COOKER COOKS RICE FASTER BECAUSE \_\_\_\_\_.**  
A) It always lets the steam escape  
B) High pressure crushes the hard covering of rice grains  
C) It does not let the heat energy escape easily  
D) High pressure raises the boiling point of water
97. **TANSEN WAS \_\_\_\_\_.**  
A) A great exponent of Indian classical music  
B) One of the nine gems in the court of Akbar  
C) Both (a) and (b)  
D) None of the above
98. **RABINDRANATH TAGORE IS ALSO KNOWN AS \_\_\_\_\_.**  
A) Guruji  
B) Gurudev  
C) Mahamana  
D) Netaji
99. **OXYGEN WAS INDEPENDENTLY DISCOVERED BY-**  
A) Rutherford  
B) William Ramsay  
C) Joseph Priestley  
D) Neils Bohr
100. **SOUTH INDIAN TEMPLES HAVE \_\_\_\_\_.**  
A) Tall towers with curving sides that taper at the top  
B) Gateway towers shaped like trapezoidal pyramids  
C) Both are correct  
D) None of the above

**101. RABINDRANATH TAGORE RECEIVED NOBEL PRIZE IN 1913 IN THE FIELD OF**

- \_\_\_\_\_.
- A) Physics
  - B) Peace
  - C) Literature
  - D) Economy

**102. THOMAS CUP IS ASSOCIATED WITH \_\_\_\_\_.**

- A) Badminton
- B) Billiards
- C) Lawn Tennis
- D) Table Tennis

**103. THE MINIMUM AGE TO QUALIFY FOR ELECTION TO THE LOK SABHA IS \_\_\_\_\_.**

- A) 25 years
- B) 21 years
- C) 18 years
- D) 36 years

**104. THE MINIMUM AGE OF THE VOTER IN INDIA IS \_\_\_\_\_.**

- A) 25 years
- B) 18 years
- C) 21 years
- D) 15 years

**105. 'MY MUSIC, MY LIFE' IS THE AUTOBIOGRAPHY OF WHICH PERSON?**

- A) Pt. Ravi Shankar
- B) Ramanujcharya
- C) Pt. Ram Prasad
- D) Nazir Hussain

**106. WHICH WAS THE FIRST TALKIE FILM OF INDIA?**

- A) Alam Ara
- B) Harish Chandra
- C) Ram Lakhan
- D) Baiju Bawra

**107. WHEN DOES RELATIVE HUMIDITY DECREASES?**

- A) With decreased temperature
- B) With Increase temperature
- C) With hyper temperature
- D) With Down temperature

**108. WHAT TYPE OF PARTY SYSTEM HAS BEEN EVOLVED IN INDIA?**

- A) Multi-Party
- B) Single-Party
- C) Double-Party
- D) Central-Party

**109. WHICH BANK IS THE BANKER OF THE BANKS?**

- A) UBI
- B) PNB
- C) RBI
- D) SBI

- 110. FOLK PAINTING 'MADHU BANI' IS FAMOUS IN WHICH STATE?**  
A) Punjab  
B) Uttar Pradesh  
C) Bihar  
D) Madhya Pradesh
- 111. WHICH IS THE TREE REQUIRING MINIMUM WATER FOR ITS GROWTH?**  
A) Sandal  
B) Neem  
C) Babul  
D) Mango
- 112. FROM WHERE DID INDIA INTRODUCE CULTIVATION OF TOBACCO/TAPIOCA?**  
A) North America  
B) India  
C) South America  
D) Russia
- 113. WHO DECIDES THE NUMBER OF JUDGES IN A HIGH COURT?**  
A) Governor  
B) Prime Minister  
C) President  
D) Member of Parliament
- 114. IN WHICH ANIMAL IS RESPIRATION DONE BY SKIN?**  
A) Rabbit  
B) Tortoise  
C) Frog  
D) Fish
- 115. UNION BUDGET IS ALWAYS PRESENTED FIRST IN \_\_\_\_\_.**  
A) The Lok Sabha  
B) The Rajya Sabha  
C) Joint session of parliament  
D) Meeting of the Union Cabinet
- 116. WHICH WAS THE FIRST NEWSPAPER TO BE PUBLISHED IN INDIA?**  
A) The Hindustan Times  
B) The Punjab Kesari  
C) English News  
D) Bengal Gazettes
- 117. WHICH PLACES IS SAID TO BE THE CATHEDRAL CITY OF INDIA?**  
A) Beneras  
B) Kancheepuram  
C) Madurai  
D) Bhubaneshwar
- 118. THE FAMOUS ROCK GARDEN IS LOCATED IN WHICH CITY?**  
A) Jaipur  
B) Simla  
C) Lucknow  
D) Chandigarh

119. **THE LARGEST AND THE OLDEST MUSEUM OF INDIA IS LOCATED IN THE STATE/ UNION TERRITORY OF \_\_\_\_\_.**  
A) New Delhi  
B) West Bengal  
C) Uttar Pradesh  
D) Andra Pradesh
120. **VITAMIN B12 IS MOST USEFUL FOR COMBATING?**  
A) Anemia  
B) Goiter  
C) Night Blindness  
D) Rickets
121. **THE TELESCOPE IS USED FOR VIEWING?**  
A) Distant Objects  
B) Near Objects  
C) Small Objects  
D) Living Cells
122. **THE TERM BUTTERFLY IS ASSOCIATED WITH \_\_\_\_\_.**  
A) Kabaddi  
B) Swimming  
C) Boxing  
D) Wrestling
123. **UTTAR PRADESH IS SURROUNDED BY \_\_\_\_\_ IN NORTH.**  
A) Nepal  
B) Uttrakhand  
C) Haryana and Delhi  
D) Rajasthan
124. **VIR CHAKRA (A MEDAL) IS MADE UP OF \_\_\_\_\_.**  
A) Bronze  
B) Gold Gilt  
C) Standard Silver  
D) None of the above
125. **WALT DISNEY WAS \_\_\_\_\_.**  
A) The President of America during World War I  
B) The creator of cartoon films starring popular cartoon characters Mickey Mouse and Donald Duck  
C) The British physician is known for his discovery of Addison's disease  
D) None of the above
126. **WHICH INDIAN STATE HAS THE LARGEST NUMBER OF COTTON TEXTILE MILLS?**  
A) Madhya Pradesh  
B) Maharastra  
C) Gujarat  
D) West Bengal
127. **THE UNIT OF CURRENT IS \_\_\_\_\_.**  
A) Ohm  
B) Watt

- C) Ampere
- D) None of the above

**128. N. BIREN SINGH IS THE CHIEF MINISTER OF WHICH STATE?**

- A) Meghalaya
- B) Kerala
- C) Manipur
- D) Andhra Pradesh

**129. WHO IS THE PRIME MINISTER OF SRILANKA?**

- A) Mangala Samaraweera
- B) Ranil Wickremesinghe
- C) Maithripala Sirisena
- D) Mahinda Rajapaksa

**130. WHAT IS THE PRESIDENT OF FRANCE?**

- A) Emmanuel Macron
- B) Nicolas Sarkozy
- C) Marine Le Pen
- D) Francois Fillon

**131. WHAT IS THE G-7 SUMMIT 2019 HELD?**

- A) Spain
- B) France
- C) Italy
- D) India

**132. WHAT IS THE CURRENCY OF SERBIA?**

- A) Dinar
- B) Dollar
- C) Peso
- D) Rial

**133. IN WHICH CITY OF INDIA, THE ISLAMIC DEVELOPMENT BANK (IDB)?**

- A) Ahmedabad
- B) Lucknow
- C) Ajmer
- D) Raipur

**134. SATPURA NATIONAL PARK IS SITUATED IN WHICH STATE?**

- A) Himachal Pradesh
- B) Andhra Pradesh
- C) Kerala
- D) Madhya Pradesh

**135. WHICH OF THE FOLLOWING BOOK IS WRITTEN BY KAPIL DEV?**

- A) One day Wonders
- B) Cricket – My Style
- C) Twenty years at the top
- D) Cricket- Favourite Game

**136. WHICH OF THE FOLLOWING TIGER RESERVE IS LOCATED IN KARNATAKA?**

- A) Periyar Tiger Reserve
- B) Achanakmar Tiger Reserve
- C) Valmiki Tiger Reserve
- D) Nagarhole Tiger Reserve



- 137. DIEGO FORELAN RETIRED FROM FOOTBALL. HE BELONGS TO WHICH COUNTRY?**  
A) Russia  
B) Poland  
C) Uruguay  
D) Serbia
- 138. TO WHICH OF THE FOLLOWING STATE, ARTICLE 370 IS THE INDIAN CONSTITUTION RELATED?**  
A) Arunachal Pradesh  
B) Meghalaya  
C) Himachal Pradesh  
D) Jammu & Kashmir
- 139. ARTICLE 370 WHICH GIVES SPECIAL STATUS TO JAMMU & KASHMIR EXIST IN THE INDIAN CONSTITUTION BECAUSE OF THE AGREEMENT BETWEEN.....**  
A) Jawahar Lal Nehru and Farukh Abdullah  
B) Jawahar Lal Nehru and Maharaja Hari Singh  
C) Ballabh Bhai Patel and Maharaja Hari Singh  
D) Muhammad Ali Jinnah and J.L. Nehru
- 140. WHICH INDIAN STATE HAS ITS OWN CONSTITUTION?**  
A) Sikkim  
B) Arunachal Pradesh  
C) Meghalaya  
D) None of the above
- 141. UNDER WHICH MINISTRY, DIRECTORATE GENERAL OF FOREIGN TRADE (DGFT) ORGANISATION COMES:**  
A) Ministry of Finance  
B) Ministry of Commerce and Industry  
C) Ministry of Foreign Trade  
D) Home Ministry
- 142. ARTICLE 35A WAS ADDED TO THE CONSTITUTION BY WHICH PRESIDENTIAL ORDER?**  
A) Presidential Order 1954  
B) Presidential Order 1952  
C) Presidential Order 1950  
D) None of the above
- 143. IN WHICH OF INDIA THE FOREIGNERS DETECTION TRIBUNALS ARE ACTIVE?**  
A) Assam  
B) Meghalaya  
C) Tripura  
D) Mizoram
- 144. GARAMPANI SANCTUARY IS LOCATED AT \_\_\_\_\_.**  
A) Junagarh, Gujarat  
B) Diphu, Assam  
C) Kohima, Nagaland  
D) Gangtok , Sikkim
- 145. HITLER PARTY WHICH CAME INTO POWER IN 1933 IS KNOWN AS \_\_\_\_\_.**  
A) Labour Party

- B) Nazi Party
- C) Ku-Klux Party
- D) Democratic Party

**146. GOLF PLAYER VIJAY SINGH BELONGS TO WHICH COUNTRY?**

- A) USA
- B) Fiji
- C) India
- D) UK

**147. FAMOUS SCULPTURES DEPICTING ART OF LOVE BUILT SOME TIME IN 950 AD & 1050 AD ARE \_\_\_\_\_.**

- A) Khajuraho Temples
- B) Jama Masjid
- C) Sun Temple
- D) Mahabalipuram Temple

**148. GUWAHATI HIGH COURT IS THE JUDICATURE OF \_\_\_\_\_.**

- A) Nagaland
- B) Arunachal Pradesh
- C) Assam
- D) All of the above

**149. THE OZONE LAYER RESTRICTS \_\_\_\_\_.**

- A) Visible Light
- B) Infrared Radiation
- C) X-rays and gamma rays
- D) Ultraviolet radiation

**150. GOA SHIPYARD LIMITED WAS ESTABLISHED IN \_\_\_\_\_.**

- A) 1958
- B) 1957
- C) 1955
- D) 1959

**151. GOLDEN TEMPLE, AMRITSAR IS INDIA'S \_\_\_\_\_.**

- A) Largest Gurudwara
- B) Oldest Gurudwara
- C) Both the options are correct
- D) None of the above

**152. DURAND CUP IS ASSOCIATED WITH THE GAME OF \_\_\_\_\_.**

- A) Cricket
- B) Football
- C) Hockey
- D) Volleyball

**153. MILKHA SINGH STOOD \_\_\_\_\_ IN 1960 OLYMPICS, IN ATHLETICS.**

- A) Fourth in 400m final
- B) Second in 400m final
- C) Eighth in 50km walk
- D) Seventh in 800m final

- 154. MODERN INDO – ARYAN LANGUAGES ARE BASED ON AN ANCIENT LANGUAGE CALLED \_\_\_\_\_.**  
A) Hindi  
B) Sanskrit  
C) Kannada  
D) Tamil
- 155. KATHAK, NAUNTANKI, JHORA AND KAJRI ARE THE IMPORTANT DANCES OF \_\_\_\_\_.**   
A) Uttaranchal  
B) Uttar Pradesh  
C) Jaharkhand  
D) Chhatisgarh
- 156. LUDHIANA IS SITUATED ON \_\_\_\_\_ RIVER.**  
A) Gomti  
B) Yamuna  
C) Satluj  
D) Godavari
- 157. KIRAN BEDI IS -**  
A) First woman IAS officer  
B) First woman IPS officer  
C) First woman advocate  
D) First woman judge
- 158. K.S. RANJIT SINGHJI WAS-**  
A) First Bar-at-law  
B) First air marshal  
C) First Indian test cricketer  
D) First field marshal
- 159. NATIONAL DEFENCE ACADEMY IS SITUATED AT \_\_\_\_\_.**  
A) Khadakvasla  
B) New Delhi  
C) Wellington  
D) Dehradun
- 160. NUMBER OF COMMANDS OF AIR FORCE ARE \_\_\_\_\_.**  
A) Five  
B) Six  
C) Seven  
D) Eight
- 161. OF THE FOLLOWING FOODS, WHICH ONE OF THE BEST SOURCE OF PROTEIN?**  
A) Butter  
B) Milk  
C) Lettuce  
D) Fish
- 162. NORMALLY THE COMMONWEALTH GAMES ARE HELD AT INTERVALS OF \_\_\_\_\_.**  
A) 3 years  
B) 4 years  
C) 5 years  
D) There is no fixed interval

163. **MINA IS THE TRIBE OF \_\_\_\_\_.**  
A) Tripura  
B) Sikkim  
C) Rajasthan  
D) Nagaland, Assam
164. **MOST COMMONLY USED BLEACHING AGENT IS \_\_\_\_\_.**  
A) Alcohol  
B) Carbon dioxide  
C) Chlorine  
D) Sodium
165. **NEIL ARMSTRONG AND EDWIN ALDRIN WERE THE FIRST TO \_\_\_\_\_.**  
A) Step on the moon  
B) Circle the moon  
C) Walk in space  
D) Journey into space
166. **MAHABALESHWAR IS LOCATED IN \_\_\_\_\_.**  
A) Maharashtra  
B) Rajasthan  
C) Madhya Pradesh  
D) Himachal Pradesh
167. **NUMISMATICS IS THE STUDY OF \_\_\_\_\_.**  
A) Coins  
B) Numbers  
C) Stamps  
D) Space
168. **LHASA AIRPORT AT TIBET IS THE WORLD'S \_\_\_\_\_.**  
A) Largest airport  
B) Highest airport  
C) Lowest airport  
D) Busiest airport
169. **JEEVAN REKHA (LIFE LINE) EXPRESS IS \_\_\_\_\_.**  
A) First hospital on wheels in the world  
B) First railway express  
C) Oldest train  
D) None of the above
170. **JESUS CHRIST WAS CRUCIFIED IN \_\_\_\_\_.**  
A) 4 BC  
B) 4 AD  
C) 30 AD  
D) 1 AD
171. **NALANDA IS LOCATED IN \_\_\_\_\_.**  
A) Gujarat  
B) Varanasi, Uttar Pradesh  
C) Near Patna, Bihar  
D) Near Bhopal, Madhya Pradesh

172. THE CENTRE FOR CELLULAR AND MOLECULAR BIOLOGY IS SITUATED AT \_\_\_\_\_.
- A) Patna
  - B) Jaipur
  - C) Hyderabad
  - D) New Delhi
173. SIACHEN IS A \_\_\_\_\_.
- A) Desert frontier zone between India and Pakistan
  - B) Frontier zone between China and India
  - C) Frontier zone between India and Myanmar
  - D) Glacier frontier zone between India and Pakistan
174. THE CHAR MINAR IS IN \_\_\_\_\_.
- A) Ahmedabad
  - B) Hyderabad
  - C) Delhi
  - D) Sikri
175. NATIONAL INSTITUTE OF NUTRITION IS LOCATED IN WHICH OF THE FOLLOWING PLACE?
- A) Bangalore
  - B) Kerala
  - C) Gandhinagar
  - D) Hyderabad
176. NATIONAL POLICE ACADEMY IS LOCATED AT \_\_\_\_\_.
- A) Hyderabad
  - B) Bangalore
  - C) Abu Road
  - D) Dehradun
177. BADRINATH IS SITUATED ON THE BANK OF RIVER \_\_\_\_\_.
- A) Ganga
  - B) Yamuna
  - C) Alaknanda
  - D) Saraswathi
178. THE 'GOLCONDA FORT' IS IN WHICH STATE?
- A) Telangana
  - B) Uttar Pradesh
  - C) Bihar
  - D) Karnataka
179. THE NATIONAL INSTITUTE OF COMMUNITY DEVELOPMENT IS LOCATED AT \_\_\_\_\_.
- A) Chennai
  - B) Pant Nagar
  - C) Bangalore
  - D) Hyderabad
180. WHICH CITY IS CALLED "WHITE CITY" OF RAJASTHAN?
- A) Jodhpur
  - B) Udaipur

- C) Jaipur
- D) Bihar

- 181. THE PASS LOCATED AT THE SOUTHERN END OF THE NILGIRI HILLS IN SOUTH INDIA IS CALLED \_\_\_\_\_.**
- A) The Palghat gap
  - B) The Bhorghat pass
  - C) The Thalghat pass
  - D) The Bolan pass
- 182. WHICH OF THE FOLLOWING FOOD CROPS OCCUPIES THE LARGEST PART OF THE CROPPED AREA IN INDIA?**
- A) Barley
  - B) Jowar
  - C) Rice
  - D) Wheat
- 183. THE NUMBER OF MAJOR LANGUAGES, RECOGNIZED IN THE INDIAN UNION AS OFFICIAL LANGUAGE, ARE \_\_\_\_\_.**
- A) 15
  - B) 22
  - C) 9
  - D) 13
- 184. WHICH OF THE FOLLOWING UNION TERRITORIES OF INDIA HAS THE HIGHEST DENSITY OF POPULATION PER SQUARE KM?**
- A) Pondicherry
  - B) Lakshadweep
  - C) Delhi
  - D) Chandigarh
- 185. WHICH COUNTRY HAS THE LARGEST COAST LINE?**
- A) USA
  - B) Australia
  - C) Canada
  - D) India
- 186. THE INDIAN TO BEAT THE COMPUTER IN MATHEMATICAL WIZARDRY IS \_\_\_\_\_.**
- A) Ramanujam
  - B) Rina Panigrahi
  - C) Raja Ramanna
  - D) Shakunthala Devi
- 187. WHO IS APPOINTED AS NEW PRESIDENT OF NIGERIA?**
- A) William Cook
  - B) Muhammadu buhari
  - C) Tim Lee
  - D) Abdula Farook
- 188. WHICH OF THE FOLLOWING COUNTRY HAS LAUNCHED A PERMANENT RESIDENCY SCHEME "GOLDEN CARD"?**
- A) India
  - B) China
  - C) Japan
  - D) UAE

- 189. WHO IS CURRENT INDIAN RAILWAY MINISTER?**  
A) Piyush Goyal  
B) Amit Shah  
C) Nitin Gadkari  
D) Ramnath singh
- 190. WHAT IS THE NEW NAME OF FOOTBALL CLUB MINERVA PUNJAB?**  
A) Indian Football Club  
B) Minerva India  
C) Football Punjab  
D) Punjab Football Club
- 191. BEFORE DELHI, WHERE WERE THE CAPITAL OF INDIA DURING THE BRITISH INDIA?**  
A) Calcutta  
B) Patna  
C) Bombay  
D) Bhopal
- 192. THE CAPITAL OF UTTARAKHAND IS \_\_\_\_\_.**  
A) Masoorie  
B) Dehra dun  
C) Nanital  
D) None of these
- 193. MEIN KAMPF IS AUTHORED BY \_\_\_\_\_.**  
A) Napoleon Bonaparte  
B) Karl Marx  
C) Adolf Hitler  
D) Benito Mussolini
- 194. WHICH OF THE FOLLOWING IS THE LARGEST AND THE DEEPEST OCEAN OF THE WORLD?**  
A) Arctic  
B) Pacific  
C) Atlantic  
D) Indian
- 195. ASEAN IS HEADQUARTERED AT \_\_\_\_\_.**  
A) Jakarta  
B) Male  
C) Kathmandu  
D) Kuala Lumpur
- 196. CURRENTLY WHO IS THE CHIEF MINISTER OF GOA?**  
A) Manohar Parrikar  
B) Prashant Sawant  
C) Rajiv Gandhi  
D) Ashok Ghalot
- 197. WHERE IS 'DUDHSAGAR WATERFALL' IN INDIA?**  
A) At the border of Goa and Karnataka  
B) Goa  
C) Gujarat  
D) Karnataka

- 198. WHO IS THE CURRENT PRESIDENT OF BHARTIYA JANTA PARTY?**  
A) Amit Shah  
B) Nitin Gadgari  
C) Yashwant Sinha  
D) Narendra Modi
- 199. IN 2017 WHICH SPACE AGENCY SENDS 104 SATELLITES IN A SINGLE MISSION?**  
A) ISRO  
B) NASA  
C) Russian Agency  
D) China Space Agency
- 200. THE PERSONALITY IS KNOWN AS THE FATHER OF ECONOMICS?**  
A) J.M. Keynes  
B) Adam Smith  
C) Abraham Maslow  
D) J.K. Galbraith
- 201. THE PERSON WHO HAS CLIMBED MOUNT EVEREST THE 17 TIMES IS \_\_\_\_\_.**  
A) Babu Cheri  
B) Peter Hillary  
C) T.W. Tenzing  
D) Appa Sherpa
- 202. WHEN INDIAN CRICKET TEAM WON THE SECOND WORLD CUP?**  
A) 2011  
B) 2012  
C) 2013  
D) 2010
- 203. WHICH COUNTRY IS ALSO KNOWN AS THE SUGAR BOWL OF THE WORLD?**  
A) Brazil  
B) Mexico  
C) Algeria  
D) Cuba
- 204. NATIONAL SCIENCE DAY IS OBSERVED ON WHICH DATE?**  
A) January 4  
B) February 28  
C) March 11  
D) May 15
- 205. THE FIRST WOMEN CHIEF MINISTER OF AN INDIAN STATE IS \_\_\_\_\_.**  
A) Sarojni Naidu  
B) Indira Gandhi  
C) Sucheta Kripalani  
D) Rajkumari Amrita Kaur
- 206. WHICH SPACE AGENCY LAUNCHED MISSION CHANDRAYAAN 2?**  
A) NASA  
B) ESA  
C) ISRO  
D) None of these



- 207. CHANDRAYAAN 2 WAS LAUNCHED FROM WHICH PLACE?**  
A) Shri Harikota  
B) Pune  
C) Pokhran  
D) None of these
- 208. CHANDRYAAN 2 WILL BE LANDED AT \_\_\_\_\_.**  
A) Moon (South Pole)  
B) Moon ( North Pole)  
C) Sun  
D) Mars
- 209. INDIAN SPACE MINISTRY IS HEADED BY \_\_\_\_\_.**  
A) ISRO  
B) Prime Minister  
C) Defence Minister  
D) None of these
- 210. WHAT IS THE DISTANCE BETWEEN MOON AND EARTH?**  
A) 180000 km.  
B) 384400 km.  
C) 300000 km.  
D) None of these
- 211. TIME TAKEN BY RELFLECTED LIGHT OF MOON TO REACH EARTH IS \_\_\_\_\_.**  
A) 8 minutes.  
B) 2 second.  
C) 1.28 second.  
D) 1.70 Second.
- 212. NAME THE ONLY NATURAL SATELLITE OF EARTH?**  
A) Mars  
B) Moon  
C) Atlas  
D) None of these
- 213. WHICH FUEL IS USED IN MISSION CHANDRAYAAN 2 ROCKET?**  
A) Petrol  
B) UDMH  
C) Hydrogen  
D) None of them
- 214. VIJAY RUPANI IS CHIEF MINISTER OF WHICH STATE?**  
A) Goa  
B) Gujarat  
C) Jammu & Kashmir  
D) Haryana
- 215. WHO IS THE CHIEF MINISTER OF NAGALAND?**  
A) K Chandra Sekhar Rao  
B) Yogi Adityanath  
C) Trivendra Singh Rawat  
D) Shurhozelie Liezietsu
- 216. WHO IS THE GOVERNOR OF ANDHRA PRADESH?**  
A) Harichandan

- B) K Chandra Babu Naidu
- C) Krishna Kant Paul
- D) Manik Sarkar

**217. WHO IS THE GOVERNOR OF HIMACHAL PRADESH?**

- A) Mukul Sangma
- B) Trivendra Singh Rawat
- C) Virbhadra Singh
- D) Acharya Dev Virat

**218. ANIL BAIJAL IS THE GOVERNOR OF WHICH STATE?**

- A) Tamil Nadu
- B) Goa
- C) Meghalaya
- D) Delhi

**219. NAME THE CHIEF MINISTER OF RAJASTHAN?**

- A) Vasundra Rajee
- B) Trivendra Singh Rawat
- C) Manohar Lal Kattar
- D) None of these

**220. QUTAB MINAR IS LOCATED AT \_\_\_\_\_.**

- A) Lucknow
- B) Agra
- C) Delhi
- D) Mumbai

**221. TAJ MAHAL IS LOCATED IN WHICH COUNTRY?**

- A) Pakistan
- B) India
- C) Canada
- D) Nepal

**222. THE FIRST 'FINANCIAL SERVICE PARK' FOR INDUSTRY BEING SET UP AT \_\_\_\_\_.**

- A) Bangalore
- B) Surat
- C) Gurgaon
- D) Pune

**223. THE WORLD FAMOUS AJANTA CAVES ARE SITUATED IN \_\_\_\_\_.**

- A) Andra Pradesh
- B) Maharashtra
- C) Orissa
- D) Kerala

**224. MS. HARITA KAUR HAS THE DISTINCTION OF BEING THE FIRST INDIAN WOMEN \_\_\_\_.**

- A) Ambassador to a foreign country
- B) Pilot to fly an aircraft solo
- C) To be inducted into Indian Navy
- D) Doctor to create first test tube baby

**225. 'APSARA' IS THE NAME OF INDIA'S FIRST \_\_\_\_\_.**

- A) Nuclear Reactor
- B) Ground Battle Tank

- C) Railway Locomotive
- D) Helicopter

226. **VIKRAM SARABHAI SPACE CENTRE IS LOCATED AT \_\_\_\_\_.**

- A) Pune
- B) Ahmadabad
- C) Thiruvananthapuram
- D) Sriharikota

227. **THE NATIONAL MUSEUM IS LOCATED AT \_\_\_\_\_.**

- A) New Delhi
- B) Pune
- C) Lucknow
- D) Kerala

228. **TIRUPATI TEMPLE IS LOCATED IN \_\_\_\_\_.**

- A) Kerala
- B) Tamil Nadu
- C) Karnataka
- D) Andra Pradesh

229. **WHICH IS LONGEST RIVER OF INDIA?**

- A) Ganga
- B) Nile
- C) Yamuna
- D) Kaveri

230. **WHICH IS THE LONGEST RIVER IN SOUTH INDIA?**

- A) Godavari
- B) Kaveri
- C) Mahanadi
- D) Narmada

231. **WHICH IS THE HIGHEST MOUNTAIN PEAK IN INDIA?**

- A) Kamet
- B) Trisul
- C) Mount Everest
- D) Kangchenjunga

232. **WHICH IS THE LARGEST LAKE OF THE INDIA?**

- A) Dal Lake
- B) Wular Lake
- C) Chilika Lake
- D) Lohtak Lake

233. **WHICH IS THE HIGHEST DAM IN INDIA?**

- A) Bhakra Dam
- B) Tehri Dam
- C) Lakhwar Dam
- D) Idukki Dam

234. **WHICH IS THE LARGEST MOSQUE IN INDIA?**

- A) Jama Masjid
- B) Moth ki Masjid
- C) Moti Masjid
- D) None of these

- 235. WHICH IS THE LONGEST ROAD IN INDIA?**  
A) Cuttack to Chennai  
B) Hajira to Kolkata  
C) Pathankot to SamaKhiali  
D) Grand Trunk Road
- 236. WHICH IS THE LARGEST AUDITORIUM IN INDIA?**  
A) Tejpal auditorium  
B) Sudharshan Rangmanch  
C) Saint Andrew Auditorium  
D) Shri Shanmukhananda Hall
- 237. WHICH IS THE HIGHEST AWARD IN INDIA?**  
A) Padma Shri  
B) Padma Bhushan  
C) Bharat Ratna  
D) Padam Vubhushan
- 238. WHICH IS THE LONGEST BEACH IN INDIA?**  
A) Silver Beach  
B) Marina Beach  
C) Kovalam Beach  
D) Kanyakumari Beach
- 239. WHICH IS THE BUSIEST BRIDGE OF INDIA?**  
A) Jubilee Bridge  
B) Chenab Bridge  
C) Howrah Bridge  
D) Old Godavari bridge
- 240. WHICH IS THE OLDEST CHURCH IN EXISTENCE IN INDIA?**  
A) Parumala Church  
B) St. Thomas Church  
C) St. Francis Church  
D) Malayatoor Church
- 241. WHICH IS THE LARGEST DOME IN INDIA?**  
A) Gol Gumbaz  
B) Taj Mahal  
C) Global Pagoda  
D) Harminder Sahib
- 242. WHICH IS THE HIGHEST GATEWAY IN INDIA?**  
A) India Gate, New Delhi  
B) Gateway of India, Mumbai  
C) Gate of the Taj , Agra  
D) Buland Darwaza , Fatehpur Sikri
- 243. WHICH IS THE LARGEST CARDIAC HOSPITAL IN INDIA?**  
A) Escort Heart Institute  
B) Naryana Hrudayalaya  
C) B.M. Birla Heart Research  
D) Asian Heart Institute and Research Centre

- 244. WHICH IS THE LARGEST LIBRARY IN INDIA?**  
A) Sinha Library  
B) State Central Library  
C) National Library of India  
D) Kuda Bakhsh Oriental Library
- 245. WHICH IS THE LARGEST SELLING BABY FOOD IN INDIA?**  
A) Farex  
B) Nusobee  
C) Nestum  
D) Amul Spray
- 246. WHICH IS INDIA'S LARGEST STATE BY AREA?**  
A) Rajasthan  
B) Sikkim  
C) Bihar  
D) Uttar Pradesh
- 247. WHICH IS INDIA'S SMALLEST STATE BY AREA?**  
A) Goa  
B) Sikkim  
C) Bihar  
D) Rajasthan
- 248. THE LARGEST PRODUCER OF SAFFRON IN INDIA IS \_\_\_\_\_.**  
A) Jammu & Kashmir  
B) Uttar Pradesh  
C) Tamil Nadu  
D) Haryana
- 249. THE LARGEST TRIBE IN INDIA IS \_\_\_\_\_.**  
A) Garos  
B) Todas  
C) Bhils  
D) Chenchus
- 250. BIGGEST STADIUM IN INDIA?**  
A) Kalinga Stadium  
B) Salt Lake Stadium  
C) Sardar Patel Stadium  
D) Jawaharlal Stadium

# **REASONING**

**DIRECTION 1 TO 25: FIND THE MISSING ONE**

1. **DHL, PTX, BFJ,?**
  - A. CGK
  - B. KOS
  - C. NRV
  - D. RVZ
  - E. None of these
  
2. **MHZ, NIW, OKT, PNQ,?**
  - A. RRN
  - B. QRN
  - C. QRM
  - D. QQN
  - E. None of these
  
3. **AK, EO, IS, ?**
  - A. MW
  - B. MV
  - C. XW
  - D. NX
  - E. None of these
  
4. **A, CD, GHI, , UVWXY?**
  - A. LMNO
  - B. MNO
  - C. MNOP
  - D. NOPQ
  - E. None of these
  
5. **AYD, BVF, DRH, , KGL ?**
  - A. FMI
  - B. GMJ
  - C. HLK
  - D. GMJ
  - E. None of these
  
6. **ABA, EDE, IFI,?**
  - A. UGU
  - B. OIO
  - C. OHO
  - D. OMS
  - E. None of these
  
7. **U, B, I, P, W,?**
  - A. D
  - B. F
  - C. Z
  - D. Q
  - E. None of these
  
8. **AB, DEF, HIJK, STUVWX?**
  - A. MNOPQ
  - B. LMNOP
  - C. LMNO
  - D. QRSTU
  - E. None of these

9. **Z, X, V, T, R,?**  
A. O,K  
B. N,M  
C. K,S  
D. P,N  
E. None of these
10. **AI, BJ, CK,?**  
A. DL  
B. DM  
C. GH  
D. LM  
E. None of these
11. **A, I, P, V, A, E,?**  
A. E  
B. F  
C. G  
D. H  
E. None of these
12. **Z, W, S, P, L, I, E,?**  
A. B  
B. D  
C. F  
D. K  
E. None of these
13. **A, B, N, C, D, O, E, F, P,?**  
A. G,H,I  
B. G,H,J  
C. G,H,Q  
D. J,K,L  
E. None of these
14. **OTE, PUF, QVG, RWH,?**  
A. SYJ  
B. TCI  
C. SXJ  
D. SXI  
E. None of these
15. **BF, CH, , HO, LT?**  
A. DN  
B. EL  
C. EK  
D. EM  
E. None of these
16. **CE, GI, KM, OQ,?**  
A. TW  
B. TV  
C. SU  
D. RT  
E. None of these



17. **BD, GI, LN, QS,?**  
A. TV  
B. UW  
C. WX  
D. VX  
E. None of these
18. **Y, B, T, G, O,?**  
A. M  
B. L  
C. K  
D. None of these
19. **M, N, O, L, R, I, V,?**  
A. A  
B. E  
C. F  
D. H  
E. None of these
20. **B, E, D, F, ?, H, J, L?**  
A. I,M  
B. M,I  
C. I,N  
D. J,M  
E. None of these
21. **R, U, X, A, D,?**  
A. F  
B. G  
C. H  
D. I  
E. None of these
22. **T, R, P, N, L,?,**  
A. J,G  
B. J,H  
C. K,H  
D. K,I  
E. None of these
23. **AC, FH, KM, PR,?**  
A. UW  
B. VW  
C. UX  
D. TV  
E. None of these
24. **BMO, EOQ, HQS,?**  
A. KSU  
B. LMN  
C. SOV  
D. SUV  
E. None of these

25. **AD, EH, IL, , QT?**  
A. LM  
B. MN  
C. MP  
D. OM  
E. None of these

**A, B, C, D, E, AND F ARE SITTING AROUND A CIRCULAR TABLE FACING THE CENTER. D IS BETWEEN C AND F; B IS TO THE LEFT OF A; B IS DIAGONALLY OPPOSITE TO D; AND E IS BETWEEN C AND B.**

**REFER THE ABOVE FOR THE QUESTIONS 26 TO 46**

26. **HOW MANY PEOPLE SEATED BETWEEN C AND B IF COUNTED CLOCKWISE?**  
A. 3  
B. 1  
C. 4  
D. 2  
E. None of these
27. **HOW MANY PEOPLE ARE SEATED BETWEEN C AND A IF COUNTED CLOCKWISE?**  
A. 0  
B. 2  
C. 3  
D. 4  
E. None of these
28. **HOW MANY PEOPLE SEATED BETWEEN C AND F IF COUNTED CLOCKWISE?**  
A. 0  
B. 1  
C. 3  
D. 4  
E. None of these
29. **HOW MANY PEOPLE SEATED BETWEEN C AND D IF COUNTED CLOCKWISE?**  
A. 1  
B. 2  
C. 0  
D. 4  
E. None of these
30. **WHO SITS BETWEEN C AND F?**  
A. A  
B. Data Inadequate  
C. B  
D. E  
E. None of these
31. **WHO SITS DIAGONALLY OPPOSITE TO C?**  
A. D  
B. F  
C. A  
D. E  
E. None of these
32. **WHO SITS TO THE LEFT OF C?**  
A. F  
B. D

- C. B
- D. E
- E. None of these

**33. WHO SITS TO THE RIGHT OF C?**

- A. D
- B. F
- C. E
- D. B
- E. None of these

**34. HOW MANY PEOPLE ARE SEATED BETWEEN E AND B IF COUNTED ANTICLOCKWISE?**

- A. 2
- B. 4
- C. 3
- D. 0
- E. None of these

**35. HOW MANY PEOPLE SEATED BETWEEN E AND A IF COUNTED ANTICLOCKWISE?**

- A. 2
- B. 1
- C. 4
- D. 0
- E. None of these

**36. HOW MANY PEOPLE SEATED BETWEEN E AND F IF COUNTED ANTICLOCKWISE?**

- A. 0
- B. 1
- C. 2
- D. 4
- E. None of these

**37. HOW MANY PEOPLE SEATED BETWEEN E AND D IF COUNTED ANTICLOCKWISE?**

- A. 1
- B. 2
- C. 3
- D. 4
- E. None of these

**38. WHO IS SEATED BETWEEN E AND A?**

- A. C
- B. D
- C. B
- D. EITHER C OR F
- E. None of these

**39. HOW MANY PEOPLE SEATED BETWEEN E AND B IF COUNTED CLOCKWISE?**

- A. 2
- B. 0
- C. 3
- D. 4
- E. None of these

**40. HOW MANY PEOPLE ARE SEATED BETWEEN E AND A IF COUNTED CLOCKWISE?**

- A. 1

- B. 2
- C. 3
  
- D. 4
- E. None of these

**41. HOW MANY PEOPLE SEATED BETWEEN E AND F IF COUNTED CLOCKWISE?**

- A. 0
- B. 2
- C. 3
- D. 4
- E. None of these

**42. HOW MANY PEOPLE SEATED BETWEEN E AND D IF COUNTED CLOCKWISE?**

- A. 2
- B. 3
- C. 1
- D. 4
- E. None of these

**43. WHO SITS BETWEEN E AND D?**

- A. F
- B. C
- C. R
- D. Either F OR B
- E. None of these

**44. WHO SITS DIAGONALLY OPPOSITE TO E?**

- A. F
- B. D
- C. A
- D. B
- E. None of these

**45. WHO SITS TO THE LEFT OF E?**

- A. D
- B. F
- C. C
- D. B
- E. None of these

**46. WHO SITS TO THE RIGHT OF E?**

- A. C
- B. B
- C. F
- D. A
- E. None of these

**DIRECTION 47 TO 50: SIX PLAYERS K, M, G, D, L AND T ARE SITTING IN A CIRCULAR TABLE FACING THE CENTER. M IS TO THE LEFT OF K. D IS BETWEEN G AND T. L IS BETWEEN G AND M. AND M IS DIAGONALLY OPPOSITE TO D.**

**47. WHO IS SEATED BETWEEN D AND K?**

- A. G
- B. L
- C. T

- D. Data Inadequates
- E. None of these

**48. HOW MANY PEOPLE SEATED BETWEEN G AND M IF COUNTED CLOCKWISE?**  
A. 3  
B. 1  
C. 4  
D. 2  
E. None of these

**49. HOW MANY PEOPLE SEATED BETWEEN G AND K IF COUNTED CLOCKWISE?**  
A. 0  
B. 2  
C. 3  
D. 4  
E. None of these

**50. HOW MANY PEOPLE SEATED BETWEEN G AND T IF COUNTED CLOCKWISE?**  
A. 0  
B. 1  
C. 3  
D. 4  
E. None of these

**DIRECTION 51 TO 58: P, Q, R, S, T, V, W AND Z ARE SITTING AROUND A CIRCLE FACING AT THE CENTER. R IS FOURTH TO THE LEFT OF P WHO IS SECOND TO THE RIGHT OF S. V IS FOURTH TO THE RIGHT OF S. Q IS FOURTH TO THE LEFT OF W WHO IS NOT AN IMMEDIATE NEIGHBOR OF P OR S. Z IS NOT AN IMMEDIATE NEIGHBOR OF R.**

**51. PICK THE ODD ONE:**  
A. RZP  
B. RWV  
C. WVZ  
D. ZPQ

**52. WHO IS THE IMMEDIATE NEIGHBOR OF S?**  
A. V  
B. W  
C. T  
D. P

**53. WHO IS THE IMMEDIATE NEIGHBOR OF W?**  
A. Q  
B. P  
C. R  
D. S

**54. WHO IS SITTING IMMEDIATE LEFT OF Z?**  
A. R  
B. S  
C. V  
D. P

**55. WHO IS SITTING IMMEDIATE RIGHT TO Q?**  
A. R

- B. S
- C. T
- D. P

56. WHO IS SITTING EXACTLY OPPOSITE TO T?

- A. Z
- B. P
- C. Q
- D. R

57. WHO IS TO THE IMMEDIATE RIGHT OF R?

- A. P
- B. Q
- C. Z
- D. T

58. WHO IS TO THE IMMEDIATE RIGHT OF V?

- A. R
- B. W
- C. Z
- D. P

**DIRECTION 59 TO 62: NINE FRIENDS L, M, N, O, P, Q, R, S AND T ARE SITTING AROUND A CIRCLE FACING THE CENTRE. T SITS 5TH TO THE RIGHT OF R. N IS NOT AN IMMEDIATE NEIGHBOR OF EITHER R OF T. M SITS BETWEEN S AND P. N SITS 4TH TO THE LEFT OF P. O SITS 2ND TO THE RIGHT OF Q. S IS NOT AN IMMEDIATE NEIGHBOR OF T.**

59. WHO IS TO THE IMMEDIATE LEFT OF L?

- A. T
- B. P
- C. S
- D. M

60. WHICH OF THE FOLLOWING IS O'S POSITION WITH RESPECT TO M IN THE ANTI-CLOCK WISE DIRECTION STARTING FROM M?

- A. 5th to the right
- B. 4th to the left
- C. 7th to the right
- D. 3rd to the left

61. THREE OF THE FOLLOWING ARE ALIKE IN A CERTAIN WAY BASED ON THEIR SEATING POSITIONS IN THE ABOVE ARRANGEMENT AND SO FORM A GROUP. FIND THE ODD MAN OUT?

- A. LP
- B. LN
- C. QO
- D. TS

62. IF ALL THE NINE FRIENDS ARE MADE TO SIT ALPHABETICALLY IN THE CLOCK WISE DIRECTION STARTING FROM L, POSITIONS OF HOW MANY WILL REMAIN UNCHANGED (EXCLUDING L)?

- A. Zero
- B. One
- C. Two
- D. Three

**DIRECTION 63: SIX PLAYS A, B, C, D, E AND F ARE STAGED ON SIX DAYS OF THE WEEK STARTING FROM MONDAY TO SATURDAY. PLAY C IS STAGED ON TUESDAY. PLAYS A, F AND B ARE STAGED ONE AFTER OTHER IN THE SAME ORDER. PLAY D IS NOT STAGED ON MONDAY OR WEDNESDAY.**

**63. WHICH PLAY IS STAGED ON THURSDAY?**

- A. E
- B. F
- C. B
- D. D

**64. IN A ROW OF BOYS, JEEVAN IS SEVENTH FROM THE START AND ELEVENTH FROM THE END. IN ANOTHER ROW OF BOYS, VIKAS IS TENTH FROM THE START AND TWELFTH FROM THE END. HOW MANY BOYS ARE THERE IN BOTH THE ROWS TOGETHER?**

- A. 36
- B. 37
- C. 38
- D. 39

**DIRECTIONS 65 TO 68: REFER TO THE DATA BELOW AND ANSWER THE QUESTIONS THAT FOLLOW.**

**SEVEN COMPETITIVE EATERS PARTICIPATED IN EATING AND DRINKING COMPETITION. THE PERSONS WHO PARTICIPATED IN BOTH EVENTS WERE P, Q, R, S, T, U AND V. THE WINNER WAS TO BE SELECTED BASED UPON THE TIME TAKEN TO COMPLETE THE FOOD/DRINKS. EACH PERSON COMPLETED THEIR FOOD/DRINKS IN DIFFERENT TIME PERIODS, I.E. NO TWO PERSONS COMPLETED THEIR FOOD/DRINKS AT THE SAME TIME. EACH PERSON OBTAINED A PARTICULAR POSITION ACCORDING TO HIS PERFORMANCE. THE ONE WHO GOT THE TOP POSITION PERFORMED BETTER THAN OTHERS WHILE ONE WHO GOT THE LOWEST POSITION PERFORMED WORSE. P'S POSITION IN EATING COMPETITION WAS JUST ABOVE U BUT IN DRINKING COMPETITION HE WAS JUST BELOW R. S'S POSITION IN DRINKING COMPETITION WAS JUST ABOVE V BUT IN EATING COMPETITION, HE WAS JUST BELOW T. NO PERSONS WERE ASSIGNED POSITIONS BETWEEN P AND S IN BOTH COMPETITIONS. AT LEAST FOUR PERSONS GOT POSITIONS ABOVE P IN EATING COMPETITION AND AT LEAST FOUR PERSONS ARE BELOW HIM IN DRINKING COMPETITION. R DID NOT GET THE HIGHEST OR THE LOWEST POSITION IN ANY COMPETITION. U'S PERFORMANCE WAS BETTER THAN V'S IN BOTH THE COMPETITIONS.**

**65. WHO AMONG THE FOLLOWING GOT THE SAME POSITION BOTH IN EATING AND DRINKING COMPETITIONS?**

- A. Only R
- B. Only S
- C. Both R and S
- D. Can't be determined
- E. None of these.

**66. IN DRINKING COMPETITION, HOW MANY PERSONS PERFORMED BETTER THAN Q?**

- A. Six
- B. Five
- C. Four
- D. Can't be determined
- E. None of these.

67. WHICH OF THE FOLLOWING COMBINATION DENOTES THE TOP THREE RANKED PERSONS IN EATING COMPETITION RESPECTIVELY?
- A. Q, R and T
  - B. U, R and P
  - C. R, T and S
  - D. P, U and V
  - E. None of these
68. IN A ROW OF 45 BOYS FACING SOUTH. T IS EIGHTH TO THE RIGHT OF H, WHO IS TENTH FROM THE RIGHT END. H IS FOURTEENTH TO THE RIGHT OF R. WHAT IS R POSITION FROM THE LEFT END?
- A. 21st
  - B. 23rd
  - C. 24th
  - D. 13th
  - E. None of these.
69. FOUR KIDS P, Q, R AND S ARE UP ON THE LADDER. P IS FURTHER UP THE LADDER THAN Q, Q IS BETWEEN P AND R. IF S IS FURTHER UP THAN P, WHO IS THE THIRD FROM THE BOTTOM?
- A. Q
  - B. R
  - C. P
  - D. S
  - E. None of these
70. AKHILESH IS TALLER THAN SHEEBU. AMAN IS NOT AS TALL AS AKHILESH BUT IS TALLER THAN TEJINDER. SHEEBU IS ALSO NOT AS TALL AS AMAN BUT IS TALLER THAN TEJINDER. WHO IS THE TALLEST?
- A. Akhilesh
  - B. Sheebu
  - C. Aman
  - D. Tejinder
  - E. None of these.

**DIRECTIONS 71 TO 75: STUDY THE FOLLOWING INFORMATION CAREFULLY AND ANSWER THE QUESTIONS GIVEN BELOW:**

**SEVEN PEOPLE – KANNAN, BALU, MANI, KISHORE, RAJAN, PRAVEEN, AND SONU HAVE DIFFERENT HEIGHT AND WEIGHT SUCH THAT THE TALLEST ONE IS NOT THE HEAVIEST ONE. KISHORE IS TALLER THAN KANNAN BUT NOT HEAVIER THAN SONU. BALU IS HEAVIER THAN RAJAN BUT NOT AS MUCH TALL AS MANI. PRAVEEN IS HEAVIER THAN BALU AND RAJAN BUT SHORTER THAN MANI AND BALU. KISHORE IS NOT TALLER THAN PRAVEEN. SONU IS NOT TALLER THAN KANNAN AND ALSO NOT HEAVIER THAN RAJAN. KANNAN IS NOT LIGHTER THAN MANI WHO IS HEAVIER THAN BALU. MANI IS SHORTER THAN ONLY ONE PERSON. PRAVEEN IS NOT THE SECOND HEAVIEST AND IS LIGHTER THAN MANI.**

71. WHICH OF THE FOLLOWING PERSONS IS THE TALLEST?
- A. Kishore
  - B. Kannan
  - C. Rajan
  - D. Sonu
  - E. None of these.



72. **WHICH OF THE FOLLOWING STATEMENTS IS/ARE TRUE?**
- A. Kishore is heaviest
  - B. Sonu is shortest
  - C. Balu is third heaviest
  - D. All are true
  - E. None is true
73. **WHO AMONG THE FOLLOWING IS THE HEAVIEST?**
- A. Sonu
  - B. Mani
  - C. Kannan
  - D. Praveen
  - E. None of these
74. **HOW MANY PEOPLE(S) ARE HEAVIER THAN THE ONE WHO IS SECOND SHORTEST?**
- A. One
  - B. Two
  - C. Three
  - D. Four
  - E. None
75. **WHO AMONG THE FOLLOWING IS THE SECOND LIGHTEST?**
- A. Praveen
  - B. Rajan
  - C. Kannan
  - D. Sonu
  - E. None of these

**DIRECTIONS 76 TO 77: STUDY THE FOLLOWING INFORMATION AND ANSWER THE GIVEN QUESTIONS.**

SIX BOXES P, Q, R, S, T, U OF DIFFERENT COLOURS ARE PLACED ONE ABOVE ANOTHER. ALSO, EACH BOX HAS DIFFERENT NUMBER OF CANDIES. NO TWO BOXES HAS SAME NUMBER OF CANDIES. ONLY TWO BOXES ARE PLACED IN BETWEEN Q AND GREEN BOX. NO BOX IS PLACED ABOVE Q. BOX S IS PLACED IMMEDIATELY ABOVE BLUE BOX. ONLY RED BOX IS PLACED IN BETWEEN GREEN BOX AND P. ONLY ONE BOX IS PLACED BETWEEN RED AND BLUE BOX. ONLY ONE BOX IS PLACED IN BETWEEN S AND T. ONLY ONE BOX IS PLACED BETWEEN ORANGE BOX AND R. BOX R IS NOT OF RED COLOUR. BOX T HAS MORE NUMBER OF CANDIES THAN 8 WHILE BOX R HAS MORE NUMBER OF CANDIES THAN 20. BOX S HAS 21 CANDIES. THE BOX WHICH HAS LOWEST AND 2ND LOWEST NUMBER OF CANDIES HAS 10 AND 12 CANDIES RESPECTIVELY. BOX P, R, S AND F HAS ODD NUMBER OF CANDIES. P HAS MORE NUMBER OF CANDIES THAN Q BUT NOT MORE THAN S. THE DIFFERENCE IN THE NUMBER OF CANDIES IN BOX U AND T IS 7. THE BOX WHICH HAS HIGHEST NUMBER OF CANDIES HAS 8 MORE CANDIES THAN BOX U. TOTAL NUMBER OF CANDIES IN BOX Q AND P IS 31.

76. **WHAT IS THE COLOR OF BOX S?**
- A. Red
  - B. Orange
  - C. Green
  - D. Blue
  - E. None of these

77. WHICH BOX HAS LEAST NUMBER OF CANDIES?  
 A. P  
 B. Q  
 C. R  
 D. S  
 E. T
78. HOW MANY NUMBERS OF CANDIES DOES BLUE BOX HAVE?  
 A. 42  
 B. 20  
 C. 25  
 D. 19  
 E. 32

**DIRECTION 79 TO 81: STUDY THE FOLLOWING INFORMATION AND ANSWER THE QUESTIONS THAT FOLLOW.**

SIX PERSONS ARE GOING TO PARTICIPATE IN A SPORTS DAY. EACH OF THEM HAS DIFFERENT WEIGHT. ALL OF THEM PLAY DIFFERENT GAMES. THE ONE WHO PLAYS VOLLEY BALL IS HEAVIER THAN R. S IS LIGHTER THE ONE WHO PLAYS BASKET BALL BUT HEAVIER THAN U. WEIGHT OF THE ONE WHO IS LIGHTEST IS 60 KG. U NEITHER PLAYS HIGH JUMP NOR VOLLEY BALL. P IS HEAVIER THAN BOTH T AND Q. R PLAYS FOOTBALL. P DOES NOT PLAY VOLLEY BALL. Q DOES NOT PLAY KHO-KHO AND HEAVIER THAN R. T IS LIGHTER THAN Q. S IS THE SECOND HEAVIEST PERSON. THE ONE WHO PLAYS KABADI IS THE LIGHTEST PERSON. T NEITHER PLAYS KABADI NOR KHO-KHO. THE ONE WHO PLAYS HIGH JUMP IS 10 KG HEAVIER THAN THE ONE WHO PLAYS KABADI. T IS NOT SECOND LIGHTEST PERSON. WEIGHT OF Q IS AN ODD NUMBER. WEIGHT OF THE HEAVIEST PERSON IS 83 KG.

79. WHO AMONG THE FOLLOWING IS THIRD HEAVIEST PERSON?  
 A. Q  
 B. S  
 C. The one who plays High jump  
 D. The one who plays Kho-Kho  
 E. None of these
80. WHAT IS THE POSSIBLE WEIGHT OF THE ONE WHO PLAYS VOLLEY BALL?  
 A. 80 kg  
 B. 78 kg  
 C. 75 kg  
 D. 45 kg  
 E. None of these
81. WHO AMONG THE FOLLOWING PLAYS HIGH JUMP?  
 A. S  
 B. T  
 C. U  
 D. P  
 E. None of these
82. DURING A PRIZE DISTRIBUTION CEREMONY, RAM WAS NINTH FROM THE LEFT WHILE JOHN WAS EIGHTH FROM THE RIGHT IN THE FRONT ROW. IF HARI WAS THIRTEENTH FROM THE LEFT AND WAS EXACTLY IN THE MIDDLE OF RAM AND JOHN IN THE SAME ROW THEN WHAT WAS TOTAL NUMBER OF PEOPLE IN THE FRONT ROW?  
 A. 23

- B. 24
- C. 25
- D. 26
- E. None of the above

83. IN A QUEUE OF STUDENTS FACING NORTH, AYESHA AND ANISHA ARE STANDING AT 10TH AND 8TH POSITION FROM THE LEFT AND RIGHT END RESPECTIVELY. IF ANOTHER STUDENT ARIVA WHO IS 12<sup>TH</sup> FROM THE LEFT END IS EXACTLY IN BETWEEN AYESHA AND ANISHA THEN FIND THE POSITION OF AYESHA FROM RIGHT END?
- A. 10th
  - B. 11th
  - C. 12th
  - D. 13th
  - E. None of the above

**DIRECTION 84 TO 86: STUDY THE INFORMATION GIVEN BELOW AND ANSWER THE QUESTIONS BASED ON IT.**

SIX STUDENTS M, N, O, P, Q AND R OBTAINED DIFFERENT MARKS IN AN EXAMINATION. M OBTAINED MORE MARKS THAN ONLY TWO STUDENTS. N OBTAINED MORE MARKS THAN P BUT NOT THE HIGHEST. R OBTAINED MORE MARKS THAN ONLY O. THE ONE WHO OBTAINED THE SECOND-HIGHEST MARKS OBTAINED 220 MARKS. THE ONE WHO OBTAINED THE SECOND-LOWEST MARKS OBTAINED 160 MARKS.

84. WHO AMONG THE FOLLOWING OBTAINED THE LOWEST MARKS?
- A. R
  - B. Q
  - C. O
  - D. N
  - E. None of these
85. IF M OBTAINED 190 MARKS, THEN WHO AMONG THE FOLLOWING POSSIBLY OBTAINED 205 MARKS?
- A. P
  - B. O
  - C. R
  - D. Q
  - E. None of these
86. IF THE TOTAL MARKS OF THE EXAMINATION IS 600, THEN WHO AMONG THE FOLLOWING POSSIBLY OBTAINED 40% MARKS?
- A. M
  - B. Q
  - C. Either M or O
  - D. Either M or Q
  - E. None of these

**DIRECTION 87 TO 88: STUDY THE INFORMATION GIVEN BELOW AND ANSWER THE QUESTIONS BASED ON IT.**

SEVEN PERSONS A, B,C, D, E, F AND G PARTICIPATE IN A SERIES OF SWIMMING RACES IN WHICH THE FOLLOWING ARE ALWAYS TRUE ABOUT THE RESULTS : B FINISHES AHEAD OF C. E FINISHES DIRECTLY BEHIND D. EITHER A FINISHES FIRST AND F LAST, OR F FOLLOWING FIRST AND A LAST. THERE ARE NO TIES IN ANY RACE EVERYONE FINISHES EACH RACE.

87. IF A FINISHES FIRST, AND IF C FINISHES AHEAD OF E, THEN IN HOW MANY DIFFERENT ORDERS IS IT POSSIBLE FOR THE OTHER SWIMMERS TO FINISH?
- A. 2
  - B. 3
  - C. 4
  - D. 5
  - E. None of these
88. IF F AND B FINISH SO THAT ONE IS DIRECTLY BEHIND THE OTHER, THEN WHICH OF THE FOLLOWING MUST BE TRUE?
- A. B finishes sixth
  - B. F finishes seventh
  - C. A finishes first
  - D. C finishes third, A finishes seventh
  - E. None of the above
89. IN A ROW OF THIRTY FIVE CHILDREN, PREM IS FIFTEENTH FROM THE RIGHT END AND THERE ARE TEN CHILDREN BETWEEN PREM AND UDAYA. WHAT IS UDAYA'S POSITION FROM THE LEFT END OF THE ROW?
- A. 15th
  - B. 5th
  - C. 30th
  - D. Data inadequate
  - E. None of these.
90. IN A ROW OF 36 PERSONS, ALL ARE FACING NORTH. SAM SITS TWELFTH FROM THE RIGHT END AND THERE ARE ONLY ELEVEN PERSONS ARE SITTING BETWEEN SAM AND RAM. THEN HOW MANY PERSONS ARE SITTING TO THE LEFT OF RAM?
- A. 13
  - B. 16
  - C. 15
  - D. 12
  - E. 14
91. IN A CLASS OF 30 STUDENTS, ANKIT RANKED EIGHTH FROM THE TOP. THERE ARE EIGHT PERSONS BETWEEN RAM AND ANKIT. THEN WHAT WILL BE THE RANK OF RAM FROM BOTTOM?
- A. 13th
  - B. 14th
  - C. 17th
  - D. 16th
  - E. 12th
92. IN A CLASS OF 56 STUDENTS A'S RANK FROM THE TOP IS TWELVE AND B RANKS FIVE PLACES BELOW 'A'. WHAT IS THE RANK OF 'B' FROM THE BOTTOM?
- A. 38
  - B. 39
  - C. 40
  - D. 41
  - E. None of these
93. THE POSITIONS OF THE FIRST AND THE FOURTH LETTERS OF THE WORD PLANET ARE INTERCHANGED, SIMILARLY, THE POSITIONS OF THE SECOND AND FIFTH LETTERS AND THIRD AND SIXTH LETTERS ARE INTERCHANGED. IN THE NEW

**ARRANGEMENT THUS FORMED, HOW MANY LETTERS ARE THERE BETWEEN THE LETTER WHICH IS SECOND FROM THE RIGHT AND THE LETTER WHICH IS FOURTH FROM THE LEFT ACCORDING TO THE ENGLISH ALPHABETICAL ORDER?**

- A. NONE
- B. ONE
- C. TWO
- D. THREE
- E. FOUR

**94. IF IT IS POSSIBLE TO MAKE ONLY ONE MEANINGFUL WORD WITH THE THIRD, FIFTH, EIGHTH AND NINTH LETTERS OF THE WORD STETHOSCOPE THEN WHICH OF THE FOLLOWING WILL BE THE SECOND LETTER OF THE WORD? IF NO SUCH WORD CAN BE MADE GIVE T AS YOUR ANSWER AND IF MORE THAN ONE SUCH WORD CAN BE MADE GIVE M AS YOUR ANSWER.**

- A. C
- B. T
- C. M
- D. H
- E. E

**95. HOW MANY SUCH PAIR OF LETTERS ARE THERE IN THE WORD 'HISTORICAL' WHICH HAVE AS MANY LETTERS BETWEEN THEM IN THE WORD AS THEY HAVE BETWEEN THEM IN THE ENGLISH ALPHABET?**

- A. Seven
- B. Four
- C. Six
- D. Five
- E. Eight.

**96. IF IT IS POSSIBLE TO MAKE A MEANINGFUL WORD, USING THE 3RD, 4TH, 7TH AND 8TH LETTERS OF THE WORD 'BACKGROUND', THEN WHAT IS THE LAST LETTER OF THE WORD FORMED? IF NO SUCH WORD BE FORMED, MARK THE ANSWER AS Y. IF MORE THAN ONE WORD CAN BE FORMED MARK THE ANSWER AS X.**

- A. C
- B. K
- C. U
- D. X
- E. Y

**97. ONLY ONE MEANINGFUL WORD CAN BE FORMED BY REARRANGING THE LETTERS OF THE GIVEN JUMBLED WORD. FIND OUT THAT WORD. MUSPOPAPOTIH**

- A. METAMORPHIC
- B. PHILANTHROPIST
- C. HIPPOCAMPUS
- D. HIPPOPOTAMUS
- E. None of these

**98. IF IT IS POSSIBLE TO MAKE A MEANINGFUL WORD, USING THE 3RD, 5TH, 8TH AND 9TH LETTERS OF THE WORD 'PARLIAMENT', THEN WHAT IS THE THIRD LETTER OF THE WORD FORMED? IF NO SUCH WORD BE FORMED, MARK THE ANSWER AS 'Y'. IF MORE THAN ONE WORD CAN BE FORMED MARK THE ANSWER AS 'X'.**

- A. I
- B. N
- C. E

- D. X
- E. Y

99. IF FIRST FOUR LETTERS OF THE ENGLISH ALPHABET ARE WRITTEN IN REVERSE ORDER; AGAIN NEXT 5 LETTERS ARE WRITTEN IN REVERSE ORDER; AGAIN NEXT 6 LETTERS ARE WRITTEN IN REVERSE ORDER; NEXT 7 LETTERS ARE WRITTEN IN REVERSE ORDER AND FINALLY, THE REMAINING LETTERS ARE ALSO WRITTEN IN REVERSE ORDER, THEN WHAT WILL BE THE 7TH LETTER TO THE LEFT OF THE 8TH LETTER FROM RIGHT?
- A. M
  - B. N
  - C. O
  - D. L
  - E. None of these
100. HOW MANY PAIRS OF LETTERS ARE THERE IN THE WORD 'SEQUENTIAL' WHICH HAVE AS MANY LETTERS BETWEEN THEM AS ARE IN THE ALPHABET?
- A. 1
  - B. 2
  - C. 3
  - D. 4
  - E. Nil
101. HOW MANY PAIRS OF LETTERS ARE THERE IN THE WORD UNDERSUBSCRIBED WHICH HAVE NUMBER OF LETTERS BETWEEN THEM IN THE WORD TWO LESS THAN THE NUMBER OF LETTERS BETWEEN THEM IN ENGLISH ALPHABET?
- A. One
  - B. Two
  - C. Three
  - D. Four
  - E. More than Four
102. R IS DENOTED BY N, C IS DENOTED BY T, I BY U, O BY I, E BY R, T BY O AND V BY P THEN HOW WILL THE WORD VERIFICATION BE WRITTEN?
- A. PRNUEUTHOUIR
  - B. VRNUEUTAOUIN
  - C. PRNUFUTAOUIN
  - D. PRNUFVOAOUIN
103. HOW MANY MEANINGFUL ENGLISH WORDS CAN BE FORMED, STARTING WITH S, WITH THE SECOND, THE FOURTH, THE FIFTH AND THE EIGHTH LETTERS OF THE PERISHED, USING EACH LETTER ONLY ONCE IN EACH WORD? (TO BE COUNTED FROM LEFT)
- A. None
  - B. One
  - C. Two
  - D. Three
  - E. More than three.
104. IF ALL THE VOWELS OF THE WORD 'FRAGMENT' ARE CHANGED TO THE LETTER IMMEDIATELY SUCCEEDING THEM IN THE ENGLISH ALPHABET SERIES AND ALL THE CONSONANTS ARE CHANGED TO THE LETTER IMMEDIATELY PRECEDING THEM IN THE ENGLISH ALPHABET SERIES, THEN HOW MANY LETTERS OF THE NEW WORD ARE SIMILAR TO THE LETTERS OF THE OLD WORD?
- A. Two

- B. Three
- C. Four
- D. More than four
- E. None of these

- 105. HOW MANY SUCH PAIRS OF LETTERS ARE THERE IN THE WORD CULTIVATION, EACH OF WHICH HAS AS MANY LETTERS BETWEEN THEM IN THE WORD AS THEY HAVE BETWEEN THEM IN ENGLISH ALPHABET?**
- A. One
  - B. Two
  - C. Three
  - D. More than three
  - E. None
- 106. AN INFORMAL GATHERING OCCURS WHEN A GROUP OF PEOPLE GET TOGETHER IN A CASUAL, RELAXED MANNER. WHICH SITUATION BELOW IS THE BEST EXAMPLE OF AN INFORMAL GATHERING?**
- A. Debating club meets on the first Sunday morning of every month.
  - B. After finding out about his salary raise , jay and a few colleagues go out for a quick diner after work.
  - C. Meena sends out 10 invitations for a bachelorette party she is giving for her elder sister.
  - D. Where she eats at a Chinese restaurant, Roop seems to run into Dibya.
- 107. A TIE BREAKER IS AN ADDITIONAL CONTEST CARRIED OUT TO ESTABLISH A WINNER AMONG TIED CONTESTANTS. CHOOSE ONE SITUATION FROM THE OPTIONS BELOW THAT BEST REPRESENTS A TIE BREAKER.**
- A. At halftime, the score is tied at 2-2 in a football match.
  - B. Serena and Maria have each secured 1 set in the game.
  - C. The umpire tosses a coin to decide which team will have have bat first.
  - D. RCB and KKR each finished at 140 all out.
- 108. THE SHARKS AND THE BEARS EACH FINISHED WITH 34 POINTS, AND THEY ARE NOW BATTLING IT OUT IN A FIVE-MINUTE OVERTIME.**
- A. When he is offered a better paying position, Jacob leaves the restaurant he manages to manage a new restaurant of the other side of town.
  - B. Catherine is spending her junior year of college studying abroad in France.
  - C. Malcolm is readjusting to civilian life after two year of overseas military service.\
  - D. After several miserable months, Sharon decides that she can no longer share an apartment with her roommate Hilary
- 109. REENTRY OCCURS WHEN A PERSON LEAVES HIS OR HER SOCIAL SYSTEM FOR A PERIOD OF TIME AND THEN RETURNS. WHICH SITUATION BELOW BEST DESCRIBES REENTRY?**
- A. When he is offered a better paying position, Javed leaves the hotel he manages to manage another one in a neighboring city.
  - B. Charan is spending her final year of college studying abroad in China.
  - C. Manan is readjusting to civilian life after 2 years of overseas merchant navy service.
  - D. After 5 miserable months, Sneha decides that she can no longer share her room with roommate Hital.
- 110. POSTHUMOUS AWARD OCCURS WHEN AN AWARD IS GIVEN TO SOMEONE, AFTER THEIR DEATH. CHOOSE ONE SITUATION BELOW AS THE BEST EXAMPLE OF POSTHUMOUS AWARD.**
- A. Late yester year actress Sridevi was awarded with a Lifetime Achievement Award posthumously in Filmfare 2019.
  - B. Chitra never thought she'd live to receive a third booker prize for her novel.

- C. Emanuel has been honored with a prestigious literary award for his writing career and his daughter accepted the award on behalf of her deceased father.
- D. Meenal's publisher canceled her book contract after she failed to deliver the manuscript on time.
- 111. THE 'A' STATE GOVERNMENT HAS CHALKED OUT A PLAN FOR THE UNDERDEVELOPED 'B' DISTRICT WHERE 66% OF THE FUNDS WILL BE PLACED IN THE HANDS OF A COMMITTEE OF LOCAL REPRESENTATIVES. COURSES OF ACTION:**
- I. THE 'A' STATE GOVERNMENT SHOULD DECIDE GUIDELINES AND NORMS FOR THE FUNCTIONING OF THE COMMITTEE.**
- II. OTHER STATE GOVERNMENT MAY FOLLOW SIMILAR PLAN IF DIRECTED BY THE CENTRAL GOVERNMENT.**
- A. If only I follows  
B. If only II follows  
C. If either I or II follows  
D. If neither I nor II follows  
E. If both I and II follow
- 112. THE CAR DEALER FOUND THAT THERE WAS A TREMENDOUS RESPONSE FOR THE NEW XYZ'S CAR BOOKING WITH LONG QUEUES OF PEOPLE COMPLAINING ABOUT THE DURATION OF BUSINESS HOURS AND ARRANGEMENTS. COURSES OF ACTION:**
- I. PEOPLE SHOULD MAKE THEIR ARRANGEMENT OF LUNCH AND SNACKS WHILE GOING FOR CAR XYZ'S BOOKING AND BE READY TO SPEND SEVERAL HOURS.**
- II. ARRANGEMENT SHOULD BE MADE FOR MORE BOOKING DESKS AND INCREASE BUSINESS HOURS TO SERVE MORE PEOPLE IN LESS TIME.**
- A. If only I follows  
B. If only II follows  
C. If either I or II follows  
D. If neither I nor II follows  
E. If both I and II follow
- 113. THE 'M' STATE GOVERNMENT HAS DECIDED HENCE FORTH TO AWARD THE ROAD CONSTRUCTION CONTRACTS THROUGH OPEN TENDERS ONLY. COURSES OF ACTION:**
- I. THE 'M' STATE WILL NOT BE ABLE TO GET THE WORK DONE SWIFTLY AS IT WILL HAVE TO GO THROUGH TENDER AND OTHER PROCEDURES.**
- II. HENCE FORTH THE QUALITY OF ROADS CONSTRUCTED MAY BE FAR BETTER.**
- A. If only I follows  
B. If only II follows  
C. If either I or II follows  
D. If neither I nor II follows  
E. If both I and II follow
- 114. ALERT VILLAGERS NABBED A GROUP OF BANDITS ARMED WITH MURDEROUS WEAPONS. COURSES OF ACTION:**
- I. THE VILLAGERS SHOULD BE PROVIDED SOPHISTICATED WEAPONS.**
- II. THE VILLAGERS SHOULD BE REWARDED FOR THEIR COURAGE AND UNITY.**
- A. If only I follows  
B. If only II follows  
C. If either I or II follows  
D. If neither I nor II follows  
E. If both I and II follow



115. **10 COACHES OF A PASSENGER TRAIN HAVE GOT DERAILED AND HAVE BLOCKED THE RAILWAY TRACK FROM BOTH ENDS. COURSES OF ACTION:**  
**I. THE RAILWAY AUTHORITIES SHOULD IMMEDIATELY SEND MEN AND EQUIPMENT AND CLEAR THE SPOT.**  
**II. ALL THE TRAINS RUNNING IN BOTH DIRECTIONS SHOULD BE DIVERTED IMMEDIATELY VIA OTHER ROUTES.**
- A. If only I follows
  - B. If only II follows
  - C. If either I or II follows
  - D. If neither I nor II follows
  - E. If both I and II follow
116. **IF A LEGISLATURE DECIDES TO FUND AGRICULTURAL SUBSIDY PROGRAMS, NATIONAL RADIO, AND A SMALL BUSINESS LOAN PROGRAM, WHAT 2 OTHER PROGRAMS CAN THEY FUND?**
- A. Harbor improvements and school music program
  - B. Harbor improvements and international airport
  - C. Hurricane preparedness and international airport
  - D. Hurricane preparedness and school music program
  - E. Harbor improvements and hurricane preparedness
117. **ACCORDING TO A SCHEDULE, THE RESTAURANT'S FLOORS ARE POLISHED ON EITHER...**
- A. Tuesday or Wednesday
  - B. Tuesday or Thursday
  - C. Wednesday or Thursday
  - D. Thursday or Friday
  - E. Thursday or Saturday
118. **IF DINNER IS SERVED ON THE SAME DAY AS PLANTS ARE WATERED, WHICH OF THE FOLLOWING IS CORRECT?**
- A. Plants are watered on Tuesday.
  - B. Floors are polished on Thursday.
  - C. Plants are watered on Wednesday.
  - D. Floors are polished on Wednesday.
  - E. Plants are watered on Saturday.
119. **ASSUME THAT FLOORS ARE POLISHED ON CONSECUTIVE DAYS BUT ALL OTHER SCHEDULING POLICIES ARE UNTAMPERED. FOR HOW MANY OF THE DAYS CAN IT BE DETERMINED WHETHER PLANTS ARE WATERED AND FLOORS ARE POLISHED?**
- A. Two
  - B. Three
  - C. Four
  - D. Five
  - E. SIX
120. **STATEMENT: ANGER IS ENERGY, IN A MORE PROACTIVE WAY AND HOW TO CHANNELIZE IT IS IN ITSELF A SKILL.**  
**ASSUMPTIONS: I. ANGER NEEDS TO BE CHANNELIZED.**  
**II. ONLY SKILLFUL PEOPLE CAN CHANNELIZE ANGER TO ENERGY.**
- A. If only assumption I is implicit.
  - B. If only assumption II is implicit.
  - C. If either I or II is implicit.

- D. If neither I nor II is implicit.
- E. If both I and II are implicit.

**121. STATEMENT: MEDICINE 'P' IS A DRUG WHICH IS CAUSING RIPPLES IN THE MEDICAL FIELD.**

**ASSUMPTIONS: I. NO OTHER DRUG IS CAUSING RIPPLES IN THE MEDICAL FIELD.  
II. MEDICINE 'P' IS A GREAT DRUG.**

- A. If only assumption I is implicit.
- B. If only assumption II is implicit.
- C. If either I or II is implicit.
- D. If neither I nor II is implicit.
- E. If both I and II are implicit.

**122. WHICH WORD DOES NOT BELONG WITH THE OTHERS?**

- A. Index
- B. Glossary
- C. Chapter
- D. Book

**123. WHICH WORD IS THE ODD MAN OUT?**

- A. Trivial
- B. Unimportant
- C. Important
- D. Insignificant

**124. WHICH WORD DOES NOT BELONG WITH THE OTHERS?**

- A. Wing
- B. Fin
- C. Beak
- D. Rudder

**125. WHICH WORD IS THE ODD MAN OUT?**

- A. Hate
- B. Fondness
- C. Liking
- D. Attachment

**126. PICK THE ODD MAN OUT?**

- A. Just
- B. Fair
- C. Equitable
- D. Biased

**127. CUP: LIP:: BIRD:?**

- A. GRASS
- B. FOREST
- C. BEAK
- D. BUSH

**128. PAW: CAT:: HOOF:?**

- A. Lamb
- B. Horse
- C. Elephant
- D. Tiger

**129. SAFE : SECURE :: PROTECT :**

- A. Lock
- B. Guard
- C. Sure
- D. Conserve

**130. MELT : LIQUID :: FREEZE :**

- A. Ice
- B. Solid
- C. Condense
- D. Push

**131. PARTS : STRAP :: WOLF :**

- A. Flow
- B. Animal
- C. Wood
- D. Fox

**132. PETAL : FLOWER**

- A. Salt: pepper
- B. Tire: bicycle
- C. Base: ball
- D. Sandals: shoes
- E. Puppy: dog

**133. BRISTLE: BRUSH**

- A. Arm: leg
- B. Stage: curtain
- C. Recline: chair
- D. Key: piano
- E. Art: sculpture

**134. FISH: SCHOOL**

- A. Wolf: pack
- B. Elephant: jungle
- C. Beagle: clan
- D. Herd: peacock
- E. Cow: farm

**135. ODOMETER: DISTANCE**

- A. Scale: weight
- B. Length: width
- C. Lunch: foot
- D. Mileage: speed
- E. Area: size

**136. SIAMESE: CAT**

- A. Type: breed
- B. Dog: puppy
- C. Mark: spot
- D. Romaine: lettuce
- E. Collar: leash

**137. ELEPHANT: PACHYDERM**

- A. Mantis: rodent
- B. Poodle: feline

- C. Kangaroo: marsupial
- D. Zebra: horse
- E. Tuna: mollusk

**138. PSYCHOLOGIST: NEUROSIS**

- A. Ophthalmologist: cataract
- B. Dermatologist: fracture
- C. Infant: pediatrician
- D. Rash: orthopedist
- E. Oncologist: measles

**139. WHICH LETTER IS SEVENTH FROM LEFT OF 16<sup>TH</sup> FROM RIGHT IN ENGLISH ALPHABET?**

- A. D
- B. W
- C. R
- D. E

**140. IF IN A CERTAIN CODE MANGO IS WRITTEN AS LBLIL THEN IN THE SAME CODE HOW MONKS IS WRITTEN?**

- A. LPLMP
- B. PLLMP
- C. LPMPL
- D. MLPAL

**141. IF IN A CERTAIN LANGUAGE, MADRAS IS CODED AS NBESBT, HOW IS BOMBAY CODED IN THAT CODE?**

- A. CPNCBX
- B. CPNCBZ
- C. CPOCBZ
- D. CQOCBZ

**142. IF ROSE IS CODED AS 6821, CHAIR IS CODED AS 73456 AND PREACH IS CODED AS 961473, WHAT WILL BE THE CODE FOR SEARCH?**

- A. 246173
- B. 214673
- C. 214763
- D. 216473

**143. IF Z = 52 AND ACT = 48, THEN BAT WILL BE EQUAL TO**

- A. 39
- B. 41
- C. 44
- D. 46

**144. IF A TRAIN IS CALLED THE BUS, A BUS IS CALLED TRACTOR, THE TRACTOR IS CALLED CAR, THE CAR IS CALLED SCOOTER, A SCOOTER IS CALLED BICYCLE, A BICYCLE IS CALLED MOPED, WHICH IS USED TO PLOW A FIELD?**

- A. Train
- B. Bus
- C. Car
- D. Tractor

**145. IF E = 5 AND READ IS CODED AS 7, THEN WHAT IS THE CODE OF 'DEAR'?**

- A. 6
- B. 7

- C. 8
- D. 9

- 146. IF WALL IS CALLED WINDOW, WINDOW IS CALLED DOOR, DOOR IS CALLED FLOOR, FLOOR IS CALLED ROOF AND ROOF IS CALLED VENTILATOR, WHAT WILL A PERSON STAND ON?**
- A. Roof
  - B. Window
  - C. Wall
  - D. Floor
- 147. IF MONDAY FALLS ON 5TH OF A MONTH, THEN WHICH DAY WILL FALL THREE DAYS AFTER THE 26TH?**
- A. Monday
  - B. Tuesday
  - C. Wednesday
  - D. Thursday
- 148. IF 1ST OCTOBER IS SUNDAY, THEN 1ST NOVEMBER WILL BE**
- A. Monday
  - B. Wednesday
  - C. Thursday
  - D. Tuesday
- 149. IF EVERY SECOND SATURDAY AND ALL SUNDAYS ARE HOLIDAYS IN A 30 DAYS MONTH BEGINNING ON SATURDAY, THEN HOW MANY WORKING DAYS ARE THERE IN THAT MONTH? (MONTH STARTS FROM SATURDAY)**
- A. 20
  - B. 21
  - C. 22
  - D. 23
- 150. IN A ROW OF STUDENTS, RAVI IS 9TH FROM THE LEFT AND SURESH IS 6TH FROM THE RIGHT. WHEN THEY BOTH INTERCHANGE THEIR POSITIONS THEN RAVI WILL BE 15TH FROM THE LEFT. WHAT WILL BE THE POSITION OF SURESH FROM THE RIGHT?**
- A. 6<sup>th</sup>
  - B. 12<sup>th</sup>
  - C. 13<sup>th</sup>
  - D. 15<sup>th</sup>
- 151. IN A LINE OF STUDENTS, MAHESH IS ON 15TH POSITION FROM RIGHT AND DHEERAJ IS ON 18TH POSITION FROM LEFT. WHEN THEY BOTH INTERCHANGE THEIR POSITIONS THEN MAHESH IS ON 20TH POSITION FROM THE RIGHT. WHAT WILL BE THE POSITION OF DHEERAJ FROM LEFT?**
- A. 18<sup>th</sup>
  - B. 24<sup>th</sup>
  - C. 23<sup>rd</sup>
  - D. 20<sup>th</sup>
- 152. IF 9TH OF THE MONTH FALLS ON THE DAY PROCEEDING SUNDAY, ON WHAT DAY WILL 1ST OF THE MONTH FALL?**
- A. Friday
  - B. Saturday

- C. Sunday
- D. Monday

- 153. IF THREE DAYS BEFORE YESTERDAY WAS FRIDAY, WHAT DAY WILL BE A DAY AFTER TOMORROW?**
- A. Monday
  - B. Sunday
  - C. Saturday
  - D. Wednesday
- 154. IF DAY AFTER TOMORROW IS SATURDAY WHAT DAY WAS 3 DAYS BEFORE YESTERDAY?**
- A. Sunday
  - B. Monday
  - C. Tuesday
  - D. Wednesday
- 155. CHOOSE THE WORD WHICH IS LEAST LIKE THE OTHER WORD IN A GROUP?**
- A. Parrot
  - B. Vulture
  - C. Swan
  - D. Sparrow
- 156. CHOOSE THE PAIR IN WHICH THE WORDS ARE DIFFERENTLY RELATED?**
- A. Man: Mob
  - B. Cow: Herd
  - C. Sheep: Flock
  - D. Fish: Shoal
- 157. CHOOSE THE NUMBER WHICH IS DIFFERENT FROM OTHERS IN THE GROUP?**
- A. 137
  - B. 177
  - C. 121
  - D. 183
- 158. CHOOSE THE NUMBER WHICH IS DIFFERENT FROM OTHERS IN THE GROUP?**
- A. 17
  - B. 27
  - C. 29
  - D. 37
- 159. CHOOSE THE NUMBER PAIR WHICH IS DIFFERENT FROM OTHERS?**
- A. 45, 27
  - B. 30, 18
  - C. 20, 10
  - D. 15, 18505
- 160. CHOOSE THE NUMBER PAIR/GROUP WHICH IS DIFFERENT FROM OTHERS?**
- A. 12: 96
  - B. 13: 117
  - C. 15: 120
  - D. 16: 128
- 161. STATEMENT: SHOULD ALL THE UNAUTHORIZED STRUCTURES IN THE CITY BE DEMOLISHED?**

**ARGUMENTS:**

- I. No, Where will the people residing in such houses live?
- II. Yes, This will give a clear message to the general public and they will refrain from constructing unauthorized buildings.

- A. The only argument I is strong
- B. Only argument II is strong
- C. Either I or II is strong
- D. Neither I nor II is strong

**162. STATEMENT: SHOULD INDIAN SCIENTISTS WORKING ABROAD BE CALLED BACK TO INDIA?**

**ARGUMENTS:**

- I. Yes, They must serve the motherland first and forget about discoveries, honors, facilities and all.
- II. No, We have enough talent; let them stay where they want.

- A. The only argument I is strong
- B. Only argument II is strong
- C. Either I or II is strong
- D. Neither I nor II is strong

**163. MATCH: VICTORY:: EXAMINATION:?**

- A. Write
- B. Appear
- C. Success
- D. Attempt

**164. ERROR: MISTAKE:: DOUBT:?**

- A. Retaliation
- B. Poetry
- C. Art
- D. Suspicion

**165. HOUR: SECOND:: TERTIARY:?**

- A. Ordinary
- B. Secondary
- C. Primary
- D. Intermediary

**166. BANK: MONEY:: TRANSPORT:?**

- A. Goods
- B. Road
- C. Movement
- D. Traffic

**167. STATEMENT: THE PEOPLE WITH RELIGION THOUGHTS & AFRAID OF THE GOD WILL NOT BETRAY.**

**CONCLUSION:**

- 1. BETRAYING PEOPLE ARE ATHEISTS**
- 2. THE RELIGION DEVELOPS THE VIRTUES**

- A. Only 1 is followed
- B. Only 2 is followed
- C. 1 & 2 – both are followed
- D. Neither 1 nor 2 is followed

- 168. STATEMENT: INDIA IS MULTILINGUAL COUNTRY. HINDI IS THE NATIONAL LANGUAGE OF INDIA.  
CONCLUSION:  
1. ALL INDIANS SHOULD LEARN MULTIPLE LANGUAGES.  
2. HINDI SHOULD BE LEARNT TO BE AN INDIAN.**
- A. Only 1 is followed  
B. Only 2 is followed  
C. Neither 1 nor 2 is followed  
D. 1 & 2 – both are followed
- 169. SQUARE: CUBE.**
- A. Triangle: Prism  
B. Line: Cylinder  
C. Circle: Sphere  
D. Sphere: Earth
- 170. LIQUOR: DRINK.**
- A. Water: Sip  
B. Bread: Butter  
C. Tea: Beverage  
D. Snuff: Inhale
- 171. IF  $72 \times 96 = 6927$ ,  $58 \times 87 = 7885$ , THEN  $79 \times 86 = ?$**
- A. 7689  
B. 8976  
C. 6897  
D. 6978
- 172. 3, 5, 9, 17, 33**
- A. 44  
B. 65  
C. 64  
D. 49
- 173. LOOK AT THIS SERIES: 36, 34, 30, 28, and 24, WHAT NUMBER SHOULD COME NEXT?**
- A. 20  
B. 22  
C. 23  
D. 26
- 174. IF 11 (170)16, 11(203)19, THEN VALUE OF 17(?)18 WILL BE –**
- A. 200  
B. 300  
C. 400  
D. None of these
- 175. 6, 5, 24, 25, 144, (?)**
- A. 155  
B. 160  
C. 170  
D. 175
- 176. LOOK AT THIS SERIES: 22, 21, 23, 22, 24, 23, WHAT NUMBER SHOULD COME NEXT?**
- A. 22  
B. 24



- C. 25
- D. 26

177. **A = 12 (390) 8, B = 7 (134) 5, C = 5 (?) 12**
- A. 299
  - B. 289
  - C. 279
  - D. 280
178. **LOOK AT THIS SERIES: 7, 10, 8, 11, 9, 12, .. WHAT NUMBER SHOULD COME NEXT?**
- A. 7
  - B. 10
  - C. 12
  - D. 13
179. **IF  $13 \times 12 = 651$  &  $41 \times 23 = 448$ , THEN,  $24 \times 22 = ?$**
- A. 504
  - B. 46
  - C. 524
  - D. 924
180. **LOOK AT THIS SERIES: 53, 53, 40, 40, 27, 27, ... WHAT NUMBER SHOULD COME NEXT?**
- A. 12
  - B. 14
  - C. 27
  - D. 53
181. **RAVI RANKS 12TH FROM THE TOP AND FORTY FROM THE BOTTOM IN A CLASS. HOW MANY STUDENTS ARE THERE IN THE CLASS?**
- A. 48
  - B. 51
  - C. 52
  - D. 55
182. **IN A ROW OF TEN GIRLS, WHEN HARINI WAS SHIFTED BY TWO PLACES TOWARDS THE LEFT, HE BECAME FOURTH FROM THE LEFT END. WHAT WAS HIS EARLIER POSITION FROM THE LEFT END OF THE ROW?**
- A. 2<sup>nd</sup>
  - B. 4<sup>th</sup>
  - C. 5<sup>th</sup>
  - D. 7<sup>th</sup>
183. **THREE OF THE FOLLOWING FOUR ARE ALIKE IN A CERTAIN WAY AND SO FORM A GROUP. WHICH IS THE ONE THAT DOES NOT BELONG TO THAT GROUP?**
- A. Needle
  - B. Hammer
  - C. Pin
  - D. Nail
184. **THREE OF THE FOLLOWING FOUR ARE ALIKE IN A CERTAIN WAY AND SO FORM A GROUP. WHICH IS THE ONE THAT DOES NOT BELONG TO THAT GROUP?**
- A. Joy
  - B. Anger
  - C. Sorrow
  - D. Feeling

- 185. THREE OF THE FOLLOWING FOUR ARE ALIKE IN A CERTAIN WAY AND SO FORM A GROUP. WHICH IS THE ONE THAT DOES NOT BELONG TO THAT GROUP?**
- Mustard
  - Rice
  - Wheat
  - Bazra
- 186. THREE OF THE FOLLOWING FOUR ARE ALIKE IN A CERTAIN WAY AND SO FORM A GROUP. WHICH IS THE ONE THAT DOES NOT BELONG TO THAT GROUP?**
- Kerala
  - Maharashtra
  - West Bengal
  - Uttar Pradesh
- 187. THREE OF THE FOLLOWING FOUR ARE ALIKE IN A CERTAIN WAY AND SO FORM A GROUP. WHICH IS THE ONE THAT DOES NOT BELONG TO THAT GROUP?**
- Dolphin
  - Crocodile
  - Lion
  - Tiger
- 188. STATEMENTS:**
- I. THE RISE IN FOREIGN INVESTMENTS IS INCREASING THE VALUE OF RUPEE.**
- II. FOREIGN BANKS ARE ESTABLISHING BRANCHES AND AMELIORATING INVESTMENT PLANS IN SOUTH ASIA, ESPECIALLY IN INDIA.**
- Both the statement I and II are independent causes.
  - Both the statement I and II are effects of independent causes.
  - The statement I is the cause and statement II is its effect.
  - Statement II is the cause and statement I is its effect.
- 189. STATEMENTS:**
- I. THE BANK DECIDED TO GIVE ADVANCES TO THE PRIORITY SECTOR AT THE RATE OF INTEREST AT PAR WITH THE CORPORATE SECTOR.**
- II. THE PERCENTAGE OF BAD LOANS GIVEN BY THE BANKS TO THE PRIORITY SECTOR IS VERY LOW COMPARED TO THE CORPORATE SECTOR.**
- Both the statement I and II are effects of independent causes.
  - The statement I is the cause and statement II is its effect.
  - Statement II is the cause and statement I is its effect.
  - Both the statement I and II are independent causes.
- 190. STATEMENTS:**
- I. THE GANGES RIVER IS FLOODED DUE TO LARGE SHEETS OF ICE COMING DOWN FROM THE HIMALAYAS.**
- II. MANY PEOPLE IN THE HIMALAYAN RANGES LOST THEIR HOUSES UNDER HUGE SHEETS OF ICE.**
- The Statement I is the cause and statement II is its effect.
  - Both the statement I and II are effects of some common causes.
  - Statement II is the cause and statement I is its effect.
  - Both the statement I and II are independent causes.
- 191. ENERGY: JOULE:: FORCE:?**
- Second
  - Kilogram
  - Newton
  - Pascal

192. **WAVES: AIR:: RIPPLES:?**  
A. Light  
B. Wind  
C. Sound  
D. Water
193. **FOOTWEAR: LEATHER:: APPAREL:?**  
A. Pant  
B. Cloth  
C. Jeans  
D. Shirt
194. **SOFTWARE: AUTO-CAD::? : KEYBOARD**  
A. Graphics  
B. Windows  
C. Driver  
D. Hardware
195. **COMPUTER: CPU:: HUMAN:?**  
A. Lung  
B. Stomach  
C. Heart  
D. Intestine
196. **32 31 32 29 32 27 32**  
A. 25 32  
B. 31 32  
C. 29 32  
D. 25 30  
E. 29 30
197. **10 34 12 31 14 28 16**  
A. 25 18  
B. 30 13  
C. 19 26  
D. 18 20  
E. 25 22
198. **17 32 19 29 21 26 23**  
A. 25 25  
B. 20 22  
C. 23 25  
D. 25 22  
E. 27 32
199. **THE WINDOW IS TO PANE AS A BOOK IS TO:**  
A. Novel  
B. Glass  
C. Cover  
D. Page
200. **STATEMENTS: A TRAIN JOURNEY CAN GIVE A BETTER VIEW IF THERE ARE PLACES ON THE WAY.  
CONCLUSIONS:  
I. AIR JOURNEY CAN'T GIVE ENJOYABLE MOVEMENTS.**

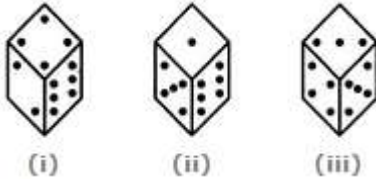
**II. A TRAIN JOURNEY CAN GIVE ENJOYABLE MOVEMENTS.**

- A. Only conclusion I follows
- B. Only conclusion II follows
- C. Either I or II follows
- D. Neither I nor II follows
- E. Both I and II follow

**201. STATEMENT: SHOULD CELL PHONES BE ALLOWED TO BE USED IN THE CLASSROOM? ARGUMENTS: I. YES. CELL PHONES GIVE STUDENTS ACCESS TO TOOLS AND APPS THAT CAN HELP THEM COMPLETE AND STAY ON TOP OF THEIR CLASS WORK. II. NO. CELL PHONES CAN BE USED BY STUDENTS TO ACCESS INFORMATION WHILE TAKING A TEST, LEADING TO CHEATING.**

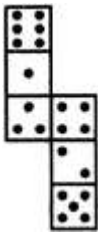
- A. Only argument I is strong
- B. Only argument II is strong
- C. Either I or II is strong
- D. Neither I nor II is strong
- E. Both I and II are strong

**202. THREE DIFFERENT POSITIONS OF A DICE ARE SHOWN BELOW. HOW MANY DOTS LIE OPPOSITE 2 DOTS?**



- A. 1
- B. 3
- C. 5
- D. 6

**203. HOW MANY DOTS LIE OPPOSITE TO THE FACE HAVING THREE DOTS, WHEN THE GIVEN FIGURE IS FOLDED TO FORM A CUBE?**



- A. 2
- B. 6
- C. 5
- D. 4

**DIRECTION 204 TO 223: LETTERS IN WORD PUZZLE QUESTIONS:**

**204. IN THE WORD 'DOORSTEP' IF ALL THE VOWELS ARE REPLACED WITH THE LETTER IMMEDIATE NEXT TO IT IN THE ENGLISH ALPHABET SERIES AND ALL THE CONSONANTS ARE REPLACED WITH THE LETTER IMMEDIATE BEFORE IT IN THE ENGLISH ALPHABET SERIES, THEN HOW MANY VOWELS ARE THERE IN THE NEW WORD SO FORMED?**

- A. None
- B. One
- C. Two
- D. More than two

205. IF IT IS POSSIBLE TO MAKE ONLY ONE MEANINGFUL ENGLISH WORD FROM THE SECOND, THE FIFTH, THE SEVENTH AND THE EIGHTH LETTERS OF THE WORD BRILLIANT, USING EACH LETTER ONLY ONCE, SECOND LETTER OF THAT WORD IS YOUR ANSWER. IF MORE THAN ONE SUCH WORD CAN BE FORMED, YOUR ANSWER IS X. IF NO SUCH WORD CAN BE FORMED, YOUR ANSWER IS Y?
- A. L
  - B. X
  - C. Y
  - D. D
206. IN THE WORD 'EVERYTHING' ALL CONSONANTS ARE WRITTEN AS THEIR PRECEDING LETTER AND ALL VOWELS ARE WRITTEN AS THEIR SUCCEEDING LETTERS. NOW ALL LETTERS ARE ARRANGED IN ALPHABETICAL ORDER FROM LEFT TO RIGHT AND ALL THE REPEATED LETTERS ARE ELIMINATED. HOW MANY LETTERS ARE BETWEEN U AND G?
- A. One
  - B. Two
  - C. Four
  - D. Five
207. IF IT IS POSSIBLE TO MAKE A MEANINGFUL WORD WITH THE 2ND, THE 6TH, THE 9<sup>TH</sup> AND THE 12TH LETTERS OF THE WORD 'CONTRIBUTION', WHICH OF THE FOLLOWING WILL BE THE LAST LETTER OF THAT WORD? IF MORE THAN ONE SUCH WORD CAN BE FORMED, GIVE 'M' AS THE ANSWER AND IF NO SUCH WORD IS THERE, GIVE 'X' AS THE ANSWER.
- A. T
  - B. O
  - C. M
  - D. X
208. THE POSITIONS OF THE FIRST AND THE FOURTH LETTERS OF THE WORD PLANET ARE INTERCHANGED, SIMILARLY, THE POSITIONS OF THE SECOND AND FIFTH LETTERS AND THIRD AND SIXTH LETTERS ARE INTERCHANGED. IN THE NEW ARRANGEMENT THUS FORMED, HOW MANY LETTERS ARE THERE BETWEEN THE LETTER WHICH IS SECOND FROM THE RIGHT AND THE LETTER WHICH IS FOURTH FROM THE LEFT ACCORDING TO THE ENGLISH ALPHABETICAL ORDER?
- A. Three
  - B. One
  - C. Two
  - D. Four
209. HOW MANY SUCH PAIR OF LETTERS ARE THERE IN THE WORD 'HISTORICAL' WHICH HAVE AS MANY LETTERS BETWEEN THEM IN THE WORD AS THEY HAVE BETWEEN THEM IN THE ENGLISH ALPHABET?
- A. Seven
  - B. Six
  - C. Four
  - D. Eight
210. ONLY ONE MEANINGFUL WORD CAN BE FORMED BY REARRANGING THE LETTERS OF THE GIVEN JUMBLED WORD. FIND OUT THAT WORD.  
**MUSPOPAPOTIH**
- A. Metamorphic
  - B. Philanthropist

- C. Hippocampus
- D. Hippopotamus

211. IF IT IS POSSIBLE TO MAKE A MEANINGFUL WORD, USING THE 3RD, 5TH, 8TH AND 9TH LETTERS OF THE WORD 'PARLIAMENT', THEN WHAT IS THE THIRD LETTER OF THE WORD FORMED? IF NO SUCH WORD BE FORMED, MARK THE ANSWER AS 'Y'. IF 8 MORE THAN ONE WORD CAN BE FORMED MARK THE ANSWER AS 'X'.
- A. I
  - B. E
  - C. N
  - D. X
212. HOW MANY PAIRS OF LETTERS ARE THERE IN THE WORD 'SEQUENTIAL' WHICH HAVE AS MANY LETTERS BETWEEN THEM AS ARE IN THE ALPHABET?
- A. 1
  - B. 2
  - C. 3
  - D. 4
213. R IS DENOTED BY N, C IS DENOTED BY T, I BY U, O BY I, E BY R, T BY O AND V BY P THEN HOW WILL THE WORD VERIFICATION BE WRITTEN?
- A. PRNUEUTHOUIR
  - B. VRNUEUTAOUIN
  - C. PRNUFUTAOUIN
  - D. PRNUFVOAOUIN
214. IF ALL THE LETTERS OF THE WORD 'SKILLFULNESS' ARE ARRANGED IN ALPHABETICAL ORDER THEN THE POSITION OF HOW MANY LETTERS WILL REMAIN UNCHANGED?
- A. One
  - B. Two
  - C. Three
  - D. None
215. HOW MANY MEANINGFUL ENGLISH WORDS CAN BE FORMED USING THE SECOND, THIRD, FIFTH AND SEVENTH LETTERS OF THE WORD 'KASHMIR' USING EACH LETTER ONCE IN EACH WORD?
- A. Only
  - B. One
  - C. Two
  - D. Three
216. HOW MANY SUCH PAIRS OF LETTERS ARE THERE IN THE WORD 'MISCONDUCT' EACH OF WHICH HAS AS MANY LETTERS BETWEEN THEM IN THE WORD AS IN THE ENGLISH ALPHABET?
- A. One
  - B. None
  - C. Two
  - D. Three
217. A WORD IS GIVEN IN CAPITAL LETTERS. IT IS FOLLOWED BY FOUR WORDS. OUT OF THESE FOUR WORDS, ONLY ONE WORD CAN BE FORMED FROM THE LETTERS OF THE GIVEN WORD IN CAPITAL LETTER. POINT OUT THAT WORD.
- NEWSPAPER**
- A. Sweat

- B. Sour
- C. Repeat
- D. Wasp

**218. FROM THE GIVEN WORDS, SELECT THE WORD WHICH CANNOT BE FORMED USING THE LETTERS OF THE GIVEN WORD.**

**TRANSPORT**

- A. Port
- B. Sports
- C. Trap
- D. Part

**219. FROM THE GIVEN WORDS, SELECT THE WORD WHICH CANNOT BE FORMED USING THE LETTERS OF THE GIVEN WORD.**

**INTELLIGENCE**

- A. Neglect
- B. Gentle
- C. Tillage
- D. Incite

**220. HOW MANY PAIRS OF LETTERS ARE THERE IN THE WORD 'MATHEMATICIAN' EACH OF WHICH HAS AS MANY LETTERS BETWEEN THEM IN THE WORD AS IN THE ENGLISH ALPHABET?**

- A. Two
- B. Three
- C. Four
- D. One

**221. ARRANGE THE FOLLOWING WORDS AS PER ORDER IN THE DICTIONARY.**

- 1. Command
  - 2. Commit
  - 3. Connect
  - 4. Conceive
  - 5. Conduct
  - 6. Commerce
- A. 6, 2, 1, 5, 4, 3
  - B. 1,6,2,4,5,3
  - C. 1,6,2,5,3,4
  - D. 1,2,6,5,3,4

**222. IF 1ST AND 26TH, 2ND AND 25TH, 3RD AND 24TH AND SO ON, LETTERS OF ENGLISH ALPHABET ARE PAIRED, THEN WHICH OF THE FOLLOWING PAIR IS CORRECT?**

- A. TH
- B. NL
- C. JQ
- D. HR

**223. IF A IS SUBSTITUTED BY 4, B BY 3, C BY 2, D BY 4, E BY 3, F BY 2 AND SO ON THEN WHAT WILL BE THE TOTAL OF NUMERICAL VALUES OF THE LETTERS OF THE WORD -**

**SICK?**

- A. 11
- B. 12
- C. 10
- D. 09

**DIRECTION: DECISION MAKING QUESTION**

224. **RC BHARGAV IS A SON OF AN INDUSTRIALIST AND FROM OTHER STATE WHO HAS SET HIS FACTORY IN 1990 AND HAS A DOMICILE CERTIFICATE OF THE STATE. HE IS READY TO PAY THE ENTIRE AMOUNT IN 4 YEARS IF REQUIRED. HE DOES NOT OWN A HOUSE IN GURGAON CITY LIMITS BUT HIS WIFE OWNS A FLAT IN GURGAON. HIS DATE OF BIRTH IS 11TH NOV 1960.**
- A. Do not allot flat
  - B. Refer to the president
  - C. Data inadequate
  - D. Allot Flat
225. **WHILE TRAVELLING IN A HARYANA REGISTERED COMMERCIAL TAXI FROM HARYANA TO AN ADJACENT CITY (ANOTHER STATE), YOUR TAXI DRIVER INFORMS YOU THAT HE HAS NO PERMIT FOR RUNNING THE TAXI IN THAT CITY, HE WILL STOP AT ITS TRANSPORT OFFICE AND PAY THE PRESCRIBED FEE OF RS. 50 FOR A DAY. WHILE PAYING THE FEE AT THE COUNTER YOU FIND THAT THE TRANSPORT CLERK IS TAKING AN EXTRA RS. 50 FOR WHICH NO RECEIPT IS GIVEN, YOU ARE IN A HURRY FOR AN OFFICE MEETING. UNDER SUCH CIRCUMSTANCES, WHAT WOULD YOU DO?**
- A. Do not interfere at all as this is a matter between the taxi driver and tax authorities.
  - B. Take note of the incident and subsequently report the matter to the concerned authorities.
  - C. Go up to the counter and ask the clerk to give back the money which he has illegally taken.
  - D. Treat it as a normal affair and simply forget about it.

**THE SELECTION COMMITTEE OF A COMPANY LAID DOWN THE FOLLOWING CRITERIA OF SELECTION FOR THE POST OF MANAGER – ACCOUNTS:**

**THE CANDIDATE MUST BE A POSTGRADUATE IN COMMERCE. THE CANDIDATE MUST HAVE COMPLETED 21 YEARS AND SHOULD NOT BE MORE THAN 35 YEARS AS ON 31.7.1996.**

**IF THE CANDIDATE DOES NOT SATISFY THE CRITERION IN (1) ABOVE BUT HAS COMPLETED HIS CA EXAMINATION HE WILL REFERRED TO DIRECTOR- FINANCE, WHO CAN ALLOW THE CANDIDATE TO APPEAR IN THE INTERVIEW IF OTHERWISE ELIGIBLE.**

**IF THE CANDIDATE FULFILLS ALL THE CRITERIA MENTIONED IN (1) AND (2) ABOVE, HE/SHE WILL BE CALLED FOR GROUP DISCUSSION.**

**THE CANDIDATE MUST GET 50% MARKS TO QUALIFY IN THE GROUP DISCUSSION. IF THE CANDIDATE QUALIFIES IN THE GROUP DISCUSSION HE/SHE WILL BE CALLED FOR INTERVIEW.**

**THE CANDIDATE MUST GET 30% MARKS IN THE INTERVIEW (OUT OF 50) TO GET FINALLY SELECTED.**

**BASED ON THE ABOVE CRITERIA, DECIDE WHICH OF THE FOLLOWING COURSES OF ACTION SHOULD BE TAKEN IN CASE OF CANDIDATES DESCRIBED IN EACH OF THE FOLLOWING QUESTIONS.**

**REFER THE ABOVE FOR THE QUESTIONS 226 TO 234**

226. **MR. D'SOUZA WHO WAS BORN ON 4.5.1965 DID M.COM ONE YEAR BACK, HE WAS THE TOP CANDIDATE IN THE GROUP DISCUSSION.**
- A. If the candidate can be selected
  - B. If the candidate is to referred to director- finance
  - C. If the candidate can be called for group discussion
  - D. If the candidate can be called for interview



- 227. MR. SUBRAMANIAM WHOSE DATE OF BIRTH IS 4.5.1965 IS A POST GRADUATE WITH COMMERCE AND HAS OBTAINED 60% MARKS IN THE INTERVIEW.**
- A. If the candidate can be selected
  - B. If the candidate is to referred to director- finance
  - C. If the candidate can be called for group discussion
  - D. If the candidate can be called for interview
- 228. MR. ROY IS A COMMERCE GRADUATE, HAS PASSED HIS CA EXAMINATION AND WAS BORN ON 18.4.1974.**
- A. If the candidate can be selected
  - B. If the candidate is to referred to director- finance
  - C. If the candidate can be called for group discussion
  - D. If the candidate can be called for interview
- 229. MR. MATHUR IS A PH.D. IN COMMERCE AND WAS 34 YEARS OLD ON 1.3.1996. HE OBTAINED 14 MARKS IN INTERVIEW.**
- A. If the candidate can be selected
  - B. If the candidate is to referred to director- finance
  - C. If the candidate can be called for group discussion
  - D. If the candidate can not be selected
- 230. MR. PATEL, A POST-GRADUATE WAS PERMITTED BY DIRECTOR- FINANCE. HE WAS BORN ON 30.05.1963. HE OBTAINED 12 MARKS IN INTERVIEW.**
- A. If the candidate can be selected
  - B. If the candidate is to referred to director- finance
  - C. If the candidate can be called for group discussion
  - D. If the candidate cannot be selected
- 231. MRS. DESAI IS A POST-GRADUATE IN ECONOMICS AND HER DATE OF BIRTH IS 3.4.1965.**
- A. If the candidate can be selected
  - B. If the candidate is to referred to director- finance
  - C. If the candidate can be called for group discussion
  - D. If the candidate cannot be selected
- 232. MR. KANT A POST-GRADUATE WITH COMMERCE OBTAINED 70% MARKS IN-GROUP DISCUSSIONS AND SECURED 20 MARKS IN INTERVIEW. HE WAS 35 YEARS AS ON 31.07.1996.**
- A. If the candidate can be selected
  - B. If the candidate is to referred to director- finance
  - C. If the candidate can be called for group discussion
  - D. If the candidate cannot be selected
- 233. MRS. KRISHNAMURTHY IS A QUALIFIED CA AND WAS 25 YEARS OLD ON 31.07.1987.**
- A. If the candidate can be selected
  - B. If the candidate is to referred to director- finance
  - C. If the candidate can be called for group discussion
  - D. If the candidate cannot be selected
- 234. MR. DAS IS M.COM AND HIS DATE OF BIRTH IS 30.06.1960.**
- A. If the candidate can be selected
  - B. If the candidate is to referred to director- finance
  - C. If the candidate can be called for group discussion
  - D. If the candidate can not be selected
- 235. ZACHARY HAS INVITED HIS THREE BUDDIES OVER TO WATCH THE BASKETBALL GAME ON HIS WIDE-SCREEN TELEVISION. THEY ARE ALL HUNGRY, BUT NO ONE**

**WANTS TO LEAVE TO GET FOOD. JUST AS THEY ARE ARGUING ABOUT WHO SHOULD MAKE THE FOOD RUN, A COMMERCIAL COMES ON FOR A LOCAL PIZZERIA THAT DELIVERS. THE PHONE NUMBER FLASHES ON THE SCREEN BRIEFLY AND THEY ALL TRY TO REMEMBER IT. BY THE TIME ZACHARY GRABS A PEN AND PAPER, EACH OF THEM RECOLLECTS A DIFFERENT NUMBER.**

- 1: All of the men agree that the first three numbers are 995.
- 2: Three of them agree that the fourth number is 9.
- 3: Three agree that the fifth number is 2.
- 4: Three agree that the sixth number is 6; three others agree that the seventh number is also 6.

**WHICH OF THE NUMBERS IS MOST LIKELY THE TELEPHONE NUMBER OF THE PIZZERIA?**

- A. 995-9266
- B. 995-9366
- C. 995-9256
- D. 995-9356

**236. THE SCHOOL PRINCIPAL HAS RECEIVED COMPLAINTS FROM PARENTS ABOUT BULLYING IN THE SCHOOL YARD DURING RECESS. HE WANTS TO INVESTIGATE AND END THIS SITUATION AS SOON AS POSSIBLE, SO HE HAS ASKED THE RECESS AIDES TO WATCH CLOSELY. WHICH SITUATION SHOULD THE RECESS AIDES REPORT TO THE PRINCIPAL?**

- A. A girl is sitting glumly on a bench reading a book and not interacting with her peers
- B. Four girls are surrounding another girl and seem to have possession of her backpack.
- C. Two boys are playing a one on one game of basketball and are arguing over the last basket scored.
- D. None of these

**237. A DATABASE SOFTWARE MANUFACTURING COMPANY FOUND OUT THAT A PRODUCT IT HAS LAUNCHED RECENTLY HAD A FEW BUGS. THE PRODUCT HAS ALREADY BEEN BOUGHT BY MORE THAN A MILLION CUSTOMERS. THE COMPANY REALIZED THAT BUGS COULD COST ITS CUSTOMERS SIGNIFICANTLY. HOWEVER, IF IT INFORMS THE CUSTOMERS ABOUT THE BUG, IT FEARED LOSING CREDIBILITY. WHAT WOULD BE THE MOST ETHICAL OPTION FOR THE COMPANY?**

- A. Apologize and fix up the bug for all customers even if it has to incur losses
- B. Do not tell customers about bugs and remove only when customers face problems, even if it means losses for the customers.
- C. Keep silent and do nothing.
- D. None of these

**238. EILEEN IS PLANNING A SPECIAL BIRTHDAY DINNER FOR HER HUSBAND'S 35TH BIRTHDAY. SHE WANTS THE EVENING TO BE MEMORABLE, BUT HER HUSBAND IS A SIMPLE MAN WHO WOULD RATHER BE IN JEANS AT A BASEBALL GAME THAN IN A SUIT AT A FANCY RESTAURANT. WHICH RESTAURANT BELOW SHOULD EILEEN CHOOSE?**

- A. Alfredo's offers fine Italian cuisine and an elegant Tuscan decor. Patrons will feel as though they've spent the evening in a luxurious Italian villa
- B. Pancho's Mexican Buffet is an all-you-can-eat family style smorgasbord with the best tacos in town
- C. Marty's serves delicious, hearty meals in a charming setting reminiscent of a baseball clubhouse in honor of the owner, Marty Lester, a former major league baseball all-star.
- D. None of these.

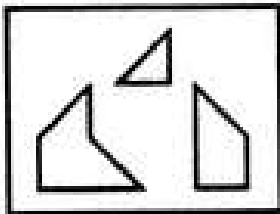
**DIRECTION 239 TO 240: THE DISTANCE BETWEEN B AND K IS 50M AND THAT BETWEEN G AND T IS 40M. G IS TO THE WEST OF T, WHICH IS TO THE EAST OF B AT A DISTANCE OF 70M. K IS TO THE WEST OR NORTHWEST OR NORTH OF G.**

- 239. IF G IS TO THE SOUTH OF K, WHAT IS THE DISTANCE BETWEEN K AND G?**  
A. 40 m  
B. 35 m  
C. 20 m  
D. 80 m
- 240. IN WHICH DIRECTION IS T WITH RESPECT TO K?**  
A. North  
B. Southeast  
C. East  
D. Either 2 or 3
- 241. POINTING TO BHUVAN, MEENA SAID. "HE IS THE SON OF MY FATHER'S ONLY SON." HOW IS BHUVAN'S MOTHER RELATED TO MEENA?**  
A. Mother  
B. Aunt  
C. Sister-in-law  
D. None of these
- 242. POINTING TO A LADY, A MAN SAID, "THE SON HER ONLY BROTHER IS THE BROTHER OF MY WIFE." HOW IS THE LADY RELATED TO THE MAN?**  
A. Mother's sister  
B. Mother in law  
C. Grandmother  
D. Sister of father-in-law
- 243. POINTING TO A PERSON, A MAN SAID TO A WOMAN, "HIS MOTHER IS THE ONLY DAUGHTER OF YOUR FATHER." HOW WAS THE WOMAN RELATED TO THE PERSON?**  
A. Aunt  
B. Mother  
C. Wife  
D. Daughter
- 244. ARUN SAID, "THIS GIRL IS THE WIFE OF THE GRANDSON OF MY MOTHER." WHO IS?**  
A. Father  
B. Grandfather  
C. Husband  
D. Father-in-law
- 245. DEEPAK SAID TO NITIN, "THAT BOY PLAYING WITH THE FOOTBALL IS THE YOUNGER OF THE TWO BROTHERS OF THE DAUGHTER OF MY FATHER'S WIFE." HOW IS THE BOY PLAYING FOOTBALL RELATED TO DEEPAK?**  
A. Son  
B. Brother  
C. Cousin  
D. None of these
- 246. INTRODUCING A MAN, A WOMAN SAID, "HE IS THE ONLY SON OF MOTHER'S MOTHER." HOW IS THE WOMAN RELATED TO THE MAN?**  
A. Mother  
B. Sister

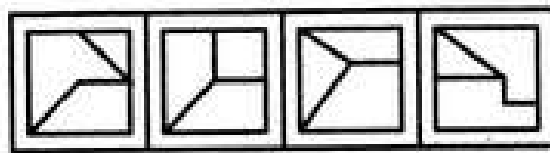
- C. Aunt
- D. Niece

247. **P IS THE MOTHER OF K; K IS THE SISTER OF D WHO IS THE FATHER OF J. HOW IS P RELATED TO J?**
- A. Mother
  - B. Grandmother
  - C. Aunt
  - D. Count
248. **IF A IS THE BROTHER OF B, B IS THE SISTER OF C AND C IS THE FATHER OF D, HOW D IS RELATED TO A?**
- A. Brother
  - B. Sister
  - C. Niece
  - D. Data Inadequate
249. **P'S FATHER IS Q'S SON. M IS THE PATERNAL UNCLE OF P AND N IS THE BROTHER OF Q. HOW IS N RELATED TO M?**
- A. Brother
  - B. Uncle
  - C. Cousin
  - D. None of these
250. **A'S SON B IS MARRIED WITH C WHOSE SISTER D IS MARRIED TO E, THE BROTHER OF B. HOW D IS RELATED TO A?**
- A. Sister
  - B. Daughter in law
  - C. Sister in law
  - D. Cousin

251. **FIND OUT WHICH OF THE FIGURES (1), (2), (3) AND (4) CAN BE FORMED FROM THE PIECES GIVEN IN FIGURE (X).**



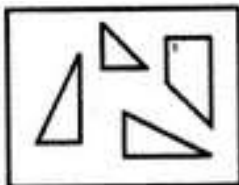
(X)



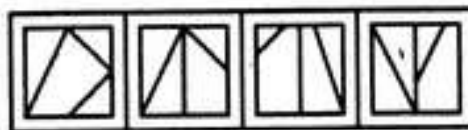
(1) (2) (3) (4)

- A. 1
- B. 2
- C. 3
- D. 4

252. **FIND OUT WHICH OF THE FIGURES (1), (2), (3) AND (4) CAN BE FORMED FROM THE PIECES GIVEN IN FIGURE (X).**



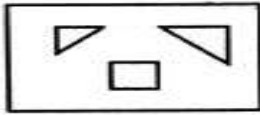
(X)



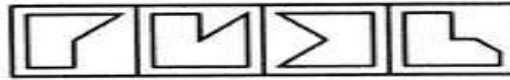
(1) (2) (3) (4)

- A. 1
- B. 2
- C. 3
- D. 4

253. FIND OUT WHICH OF THE FIGURES (1), (2), (3) AND (4) CAN BE FORMED FROM THE PIECES GIVEN IN FIGURE (X)



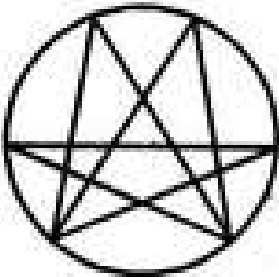
(X)



(1) (2) (3) (4)

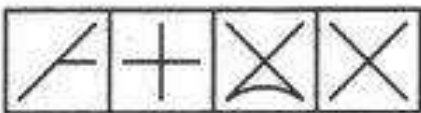
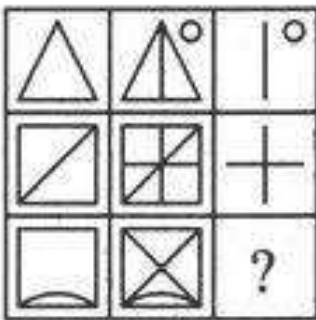
- A. 1
- B. 2
- C. 3
- D. 4

254. FIND THE NUMBER OF TRIANGLES IN THE GIVEN FIGURE.



- A. 22
- B. 24
- C. 26
- D. 28

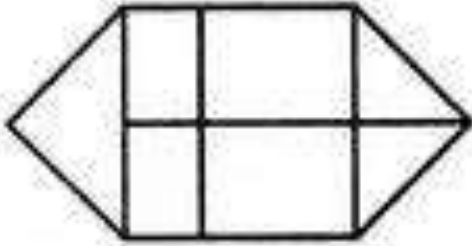
255. SELECT A SUITABLE FIGURE FROM THE FOUR ALTERNATIVES THAT WOULD COMPLETE THE FIGURE MATRIX.



(1) (2) (3) (4)


- A. 1
- B. 2
- C. 3
- D. 4

256. HOW MANY RECTANGLES ARE THERE IN THE GIVEN FIGURE?



- A. 10
- B. 09
- C. 08
- D. 07

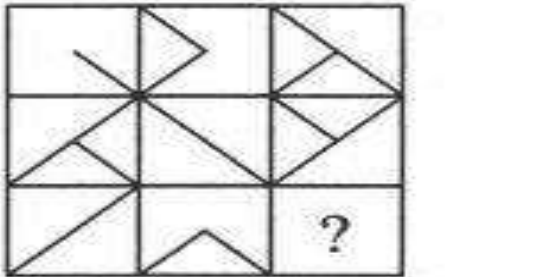
257. FIND OUT FROM AMONGST THE FOUR ALTERNATIVES AS TO HOW THE PATTERN WOULD APPEAR WHEN THE TRANSPARENT SHEET IS FOLDED AT THE DOTTED LINE.



(X) (1) (2) (3) (4)

- A. 1
- B. 3
- C. 2
- D. 4

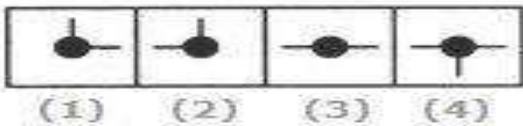

258. SELECT A SUITABLE FIGURE FROM THE FOUR ALTERNATIVES THAT WOULD COMPLETE THE FIGURE MATRIX.



(1) (2) (3) (4)

- A. 1
- B. 2
- C. 3
- D. 4

259. SELECT A SUITABLE FIGURE FROM THE FOUR ALTERNATIVES THAT WOULD COMPLETE THE FIGURE MATRIX.

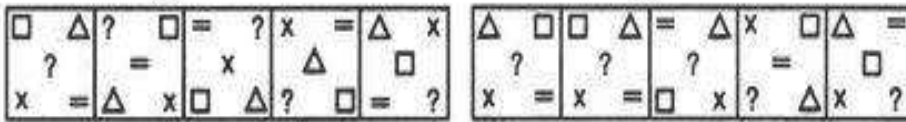


- A. 1
- B. 2
- C. 3
- D. 4

260. SELECT A FIGURE FROM AMONGST THE ANSWER FIGURES WHICH WILL CONTINUE THE SAME SERIES AS ESTABLISHED BY THE FIVE PROBLEM FIGURES.

Problem Figures:

Answer Figures:



- |     |     |     |     |     |     |     |     |     |     |
|-----|-----|-----|-----|-----|-----|-----|-----|-----|-----|
| (A) | (B) | (C) | (D) | (E) | (1) | (2) | (3) | (4) | (5) |
|-----|-----|-----|-----|-----|-----|-----|-----|-----|-----|

- A. 1
- B. 2
- C. 3
- D. 4

# ENGLISH



## Q1 TO 25. IDENTIFY THE IDIOMS

### 1. DON'T CRY OVER THE SPILT MILK?

- A. Don't worry about minor things
- B. Don't worry
- C. Avoid the problem
- D. Don't make an issue

### 2. HIT THE SACK?

- A. Take rest
- B. Always tired
- C. To go to bed
- D. Sober

### 3. TAKE IT EASY?

- A. Relax
- B. Rest
- C. Easy/Simple
- D. Relax, Rest

### 4. WHOLE NINE YARDS?

- A. Everything
- B. Everywhere
- C. No where
- D. Nothing

### 5. ONCE IN A BLUE MOON?

- A. Once upon a time
- B. Once a while
- C. Somewhere
- D. Somewhat ill or gloomy

### 6. UP IN THE AIR?

- A. To finish
- B. Not decided about something
- C. to accomplish
- D. to complete

### 7. ON THE BALL?

- A. Focus
- B. Concentrate
- C. Relax
- D. Be alert, active

### 8. IN HIGH SPIRITS?

- A. Conscious
- B. Worried
- C. Very happy
- D. Excited

### 9. BREAK A LEG?

- A. Good luck

- B. Bad luck
- C. Destiny
- D. Best wishes

**10. ALL EYES AND EARS?**

- A. To pay attention
- B. Be attentive
- C. Focus
- D. Concentrate

**11. CATCH SOMEONE'S EYE?**

- A. Attentive
- B. Attract
- C. Attract someone's attention
- D. A sight that makes you happy

**12. LAST STRAW?**

- A. Final destination
- B. Final conclusion
- C. The final problem in series of problems
- D. Final problem

**13. LEND AN EAR?**

- A. Listen
- B. Speak
- C. Allow to listen
- D. Allow to speak

**14. BAD EGG?**

- A. Someone who is not to be trusted
- B. Bad person
- C. Trust worthy
- D. Bad choice

**15. OLD HAT?**

- A. Old things
- B. Odd choice
- C. Very old
- D. Old fashioned, predictable

**16. WET BEHIND THE EARS?**

- A. In-experienced
- B. Immature
- C. New to something
- D. All the above

**17. CHANGE OF HEART?**

- A. A change in once opinion
- B. Judging someone
- C. Predicting
- D. A change in once outlook

**18. STIFF NECKED?**

- A. Highly qualified
- B. Up to the mark

- C. Stubborn, Excessively formal
- D. None of the above

**19. TO BE A PEACH?**

- A. Extremely good
- B. Impressive
- C. Attractive
- D. All the above

**20. TO GO BANANAS?**

- A. Act smart
- B. To get angry / mad
- C. The leader
- D. Aggressive

**21. TO CLEAN UP NICELY?**

- A. Look good
- B. Act good
- C. Look good when dressed up
- D. Behave nicely

**22. HOLD YOUR HORSES?**

- A. Be calm
- B. Be cool
- C. Be patient/ wait a minute
- D. To judge

**23. IN THE DARK?**

- A. Un aware
- B. Not responsible
- C. Ignore
- D. Half knowledge

**24. SEE EYE TO EYE?**

- A. Agree
- B. Listen
- C. Understand
- D. Question

**25. LET YOUR HAIR DOWN?**

- A. Chill
- B. No worries
- C. To relax and enjoy
- D. Enjoy

**26. ROLL YOUR EYES?**

- A. Interesting
- B. Not interesting
- C. Little interest
- D. None of these

**27. TO KEEP ONE'S TEMPER**

- A. To be hungry
- B. To be in good mood
- C. To preserve one's energy
- D. To be aloof from

**28. TO CATCH A TARTAR**

- A. To trap wanted criminal with great difficulty
- B. To catch a dangerous person
- C. To meet with disaster
- D. To deal with a person who is more than ones match

**29. TO DRIVE HOME**

- A. To find one's root
- B. To return to the place of rest
- C. Back to original position
- D. None of these

**30. TO HAVE AN AXE TO GRIND**

- A. A private end to serve
- B. To fail to arouse interest
- C. To have no result
- D. To work for both the sides

**31. TO CRY WOLF**

- A. To listen eagerly
- B. To give false alarm
- C. To turn pale
- D. None of these

**32. TO END IN SMOKE**

- A. To make completely understand
- B. Come to nothing
- C. To excite great applause
- D. To overcome someone

**33. TO BE ABOVE BOARD**

- A. To be honest in any business deal
- B. To have a good height
- C. To try to be beautiful
- D. To have no debts

**34. TO PUT ONES HAND TO PLOUGH**

- A. To take up agricultural farming
- B. To get entangled into unnecessary things
- C. To take a difficult task
- D. Take interest in technical work

**35. TO PICK HOLES**

- A. To find some reason to quarrel
- B. To destroy something
- C. To cut some part of an item
- D. To criticize someone

**36. TO LEAVE SOMEONE IN THE LURCH**

- A. To come to compromise with someone
- B. To put someone at ease
- C. To desert someone in his difficulties
- D. None of these

**37. TO PLAY SECOND FIDDLE**

- A. To be happy, cheerful and healthy
- B. To reduce once importance of the senior
- C. To have a subordinate, lesser, or smaller role, position, or part (in something).
- D. To do back seat driving

**38. TO BEG THE QUESTION**

- A. To refer to
- B. To take for granted
- C. To raise objections
- D. To take decisions

**39. A BLACK SHEEP**

- A. An unlucky person
- B. A lucky person
- C. An ugly person
- D. None of these

**40. A MAN OF STRAW**

- A. A man with no substance
- B. A very active person
- C. A worthy fellow
- D. An irresponsible person

**41. TO SMELL A RAT**

- A. To see signs of plague epidemic
- B. To get a bad smell of a dead rat
- C. To suspect bad dealings
- D. To be in a bad mood

**42. TO HIT THE NAIL RIGHT ON THE HEAD**

- A. To do the right thing
- B. To destroy the reputation
- C. To teach someone a lesson
- D. None of these

**43. TO SET ONE'S FACE AGAINST**

- A. To judge by appearance
- B. To oppose with determination
- C. To get out of difficulty
- D. None of these

**44. SELECT THE MOST APPROPRIATE MEANING OF THE GIVEN IDIOM BUTTERFLIES IN THE STOMACH.**

- A. Angry
- B. Hungry
- C. Excited
- D. Nervous

**45. SHOBRAJ COULD BE EASILY ARRESTED BECAUSE THE POLICE WERE TIPPED OFF IN A ADVANCE**

- A. Toppled over
- B. Birded
- C. Given an advance information
- D. Threatened

46. I MET HIM AFTER A LONG TIME, BUT HE GAVE ME THE COLD SHOULDER

- A. Scolded me
- B. Insulted me
- C. Abused me
- D. Ignored me

47. HE PASSED HIMSELF OFF AS A NOBLE MAN

- A. Was regarded as
- B. Was thought to be
- C. Pretended to be
- D. Was looked upon

48. SELECT THE MOST APPROPRIATE MEANING GIVEN IN THE IDIOM.

**Out of the woods**

- A. No longer in trouble
- B. No longer famous
- C. No longer in sight
- D. No longer young

**Q-(49-81) SYNONYMS**

**FIND OUT THE CORRECT SYNONYM**

49. **OCCUR?**

- A. Exactly
- B. Nearly
- C. Happen
- D. Silent

50. **OLD?**

- A. Ancient
- B. Chance
- C. Sheet
- D. Shy

51. **OPPORTUNITY?**

- A. Chance
- B. Ill
- C. Thin
- D. Cab

52. **PAGE**

- A. Shy
- B. Mix
- C. Sheet
- D. Believe

53. **BEAUTIFUL?**

- A. Rough
- B. Pretty
- C. Afraid
- D. Worth

54. **PEACEFUL?**

- A. Silent
- B. Honest

- C. Quiet
- D. Record

**55. QUIET?**

- A. Silent
- B. Clever
- C. Thin
- D. Enquire

**56. REITERATE**

- A. Deny
- B. Repeat
- C. Frustrate
- D. Illustrate

**57. EMULATE**

- A. Discuss
- B. Deny
- C. Question
- D. Imitate

**58. CONSEQUENCE**

- A. Indifference
- B. Serial
- C. Affect
- D. Outcome

**59. INHIBIT**

- A. Surrender
- B. Discard
- C. Restrain
- D. Activate

**60. LIBERAL**

- A. Unreliable
- B. Tolerant
- C. Strong
- D. Responsible

**61. VEHEMENTLY**

- A. Openly
- B. Abruptly
- C. Widely
- D. Forcefully

**62. AMALGAMATE**

- A. Frustrate
- B. Gather
- C. Astonish
- D. Unite

**63. OBSCENE**

- A. Unwanted
- B. Unhealthy
- C. Dirty
- D. Indecent

**64. STRIDENT**

- A. Melodious
- B. Musical
- C. Stable
- D. Loud

**65. EXPURGATE**

- A. Admit
- B. Stain
- C. Edit
- D. Entertain

**66. TACIT**

- A. Trivial
- B. Lengthy
- C. Unspoken
- D. Neutral

**67. PROWESS**

- A. Genius
- B. Keenness
- C. Eagerness
- D. Understanding

**68. BENIGN**

- A. Gentle
- B. Peaceful
- C. Favorable
- D. Wavering

**69. CAJOLE**

- A. Persuade
- B. Threaten
- C. Scold
- D. Intimidate

**70. ABUNDANT**

- A. Unreliable
- B. Ample
- C. Strong
- D. Responsible

**71. PROGNOSIS**

- A. Identification
- B. Scheme
- C. Preface
- D. Forecast

**72. FURTIVE**

- A. Secretive
- B. Unambiguous
- C. Obvious
- D. Open



**73. BUCOLIC**

- A. Healthy
- B. Intoxicated
- C. Rusty
- D. Sick

**74. PROFANE**

- A. Respectful
- B. Secular
- C. Arrogant
- D. Intelligent

**75. STING**

- A. Cheerful
- B. Rich
- C. Extravagant
- D. Cheat

**76. ABATE**

- A. Tighten
- B. Abandon
- C. Increase
- D. Diminish

**77. DEVIATE**

- A. Locate
- B. Contradict
- C. Obliviate
- D. Concentrate

**78. UNRULY**

- A. Indifferent
- B. Intelligent
- C. Disobedient
- D. Curious

**79. PEREMPTORY**

- A. Dictatorial
- B. Military
- C. Unexpected
- D. Unreasonable

**80. COMPENDIUM**

- A. Glossary
- B. Index
- C. Reference
- D. Summery

**81. SELECT THE SYNONYM FOR THE GIVEN WORD.**

**DRAG**

- A. Rest
- B. Rush
- C. Pull
- D. Push

**Q (82-89) ANTONYMS**

**82. THEY HAD AN INSIPID CONVERSATION**

- A. Loud
- B. Argumentative
- C. Lively
- D. Curious

**83. HE HARVESTED A RICH CROP FROM THAT FECUND LAND**

- A. Fertile
- B. Fruitless
- C. Obsolete
- D. Barren

**84. I WILL 'CALL ON' THE PRINCIPAL TOMORROW**

- A. Leave the principal
- B. Help the principal
- C. Suggest the principal
- D. Visit the principal

**85. TO CHEW THE CUD**

- A. To contrive against someone
- B. To die on duty
- C. To meditate
- D. To inculcate on virtues

**86. SELECT THE ANTONYM FOR THE WORD 'ADVERSE'**

- A. Hostile
- B. Friendly
- C. Inimical
- D. Unwilling

**87. MR. JAIN IS AN AFFLUENT TRADER**

- A. Wealthy
- B. Healthy
- C. Rich
- D. Poor

**88. CHILDREN ARE QUITE OPTIMISTIC ABOUT THEIR LEARNING ACHIEVEMENTS.**

- A. Realistic
- B. Pessimistic
- C. Pragmatic
- D. Negative

**89. SHOWCASED**

- A. Advertised
- B. Published
- C. Abridged
- D. Withheld

**Q (90-116) ARTICLES**

**90. I WANT TO BUY..... LAPTOP COMPUTER NEXT WEEK**

- A. A
- B. An

- C. The
- D. None of the above

**91. CAN YOU PLEASE GO TO ..... GROCERY STORE ON FIFTH STREET AND BUY ME 2 CARTONS OF MILK**

- A. A
- B. An
- C. The
- D. None of the above

**92. PLEASE MEET ME IN THE TRAIN STATION IN ..... HOUR FROM NOW**

- A. A
- B. An
- C. The
- D. None of the above

**93. I LIKE TO WATCH TENNIS IN TELEVISION. IT IS ..... VERY GOOD GAME.**

- A. A
- B. An
- C. The
- D. None of the above

**94. MY BROTHER WON AN AWARD FOR BEING .....BEST SPELLER IN OUR SCHOOL**

- A. A
- B. An
- C. The
- D. None of the above

**95. I COULDN'T BELIEVE MY EYES WHEN I SAW .....ELEPHANT CROSSING THE ROAD IN FRONT OF MY SCHOOL YESTERDAY.**

- A. A
- B. An
- C. The
- D. None of the above

**96. HOW MUCH WILL IT COST TO GO ON ...HOLIDAY TO BALI?**

- A. A
- B. An
- C. The
- D. None of the above

**97. CAN YOU PLEASE HELP ME PICK OUT .....? BIRTHDAY PRESENT FOR MY FATHER?**

- A. A
- B. An
- C. The
- D. None

**98. .... PRESIDENT OF UNITED STATES WILL BE VISITING AUSTRALIA NEXT WEEK.**

- A. A
- B. An
- C. The
- D. None

**99. LET US PLAY ..... CHESS.**

- A.A
- B.An

- C. The
- D. None

- 100. SHE WANTS TO BECOME ..... ENGINEER.**  
A. None  
B. A  
C. An  
D. The
- 101. HE HOPES TO JOIN ..... UNIVERSITY SOON.**  
A. A  
B. An  
C. The  
D. None
- 102. .... ORANGES ARE GROWN IN NAGPUR.**  
A. A  
B. An  
C. The  
D. None
- 103. THIS IS ..... CAR I BOUGHT YESTERDAY.**  
A. A  
B. An  
C. The  
D. None
- 104. I WANT TO EAT .....APPLES.**  
A. A  
B. An  
C. The  
D. None
- 105. .... LOIN IS A FEROCIOUS ANIMAL.**  
A. A  
B. An  
C. The  
D. None
- 106. THE THIEF WAS SENT TO ..... PRISON.**  
A. A  
B. An  
C. The  
D. None
- 107. .... ELEPHANT IS A VEGETARIAN.**  
A. A  
B. An  
C. The  
D. None
- 108. RAM WAS ..... BEST STUDENT IN THE CLASS.**  
A. A  
B. An  
C. The  
D. None

- 109. PLEASE GIVE ME ..... USEFUL GIFT.**  
A. A  
B. An  
C. The  
D. None
- 110. OUR CITY WILL HAVE .... UNIVERSITY SOON.**  
A. A  
B. An  
C. The  
D. None
- 111. INDIA WILL BECOME ..... SUPER POWER SHORTLY.**  
A. A  
B. An  
C. The  
D. None
- 112. ARE YOU ATTENDING ..... RECEPTION TOMORROW.**  
A. A  
B. An  
C. The  
D. None
- 113. .... MEAT YOU COOKED TASTED GOOD.**  
A. A  
B. An  
C. The  
D. None
- 114. HE IS ..... HONEST OFFICIAL.**  
A. A  
B. An  
C. The  
D. None
- 115. .... APPLES I BOUGHT ARE SOUR.**  
A. A  
B. An  
C. The  
D. None
- 116. SELECT THE SENTENCE WHERE THE ARTICLES ARE WRONGLY USED-**  
A. He is MA  
B. Twelve inches make a foot  
C. A pupil should obey his teacher  
D. He is a European

**Q (117-124) VOCABULARY**

- 117. THEY HAD AN INSIPID CONVERSATION**  
A. Loud  
B. Argumentative

- C. Lively
- D. Curious

- 118. HE IS .... TO..... ANY KIND OF WORK WITH DUE SINCEYARITY.**
- A. Fond, perform
  - B. Reluctant, entrust
  - C. Determined, undertaken
  - D. Eager, void
- 119. THE WAR ..... IMMEDIATELY AFTER THE CEASEFIRE PROPOSAL WAS ..... BILATERALLY.**
- A. Receded, exchanged
  - B. Started, prepared
  - C. Extended, mitigated
  - D. Ended, accepted
- 120. THE MANAGER IS USUALLY ..... BUT TODAY HE APPEARS RATHER .....**
- A. Calm, disturbed
  - B. Strict, unwell
  - C. Tense, restless
  - D. Happy humorous
- 121. BEES ARE KEPT IN**
- A. A pantry
  - B. A nursery
  - C. An apiary
  - D. An aquarium
- 122. INDIAN RAILWAYS STARTED ..... TRAIN TO ALLAHABAD DURING KUMBHA.**
- A. Special
  - B. Especial
  - C. Spatial
  - D. None
- 123. TEACHERS ARE DOING ..... WORK.**
- A. Innovative
  - B. Innovative
  - C. Inventive
  - D. innoevative
- 124. SELECT THE MOST APPROPRIATE TO FILL IN THE BLANK.  
THE NATIONAL WAR MEMORIAL IS \_\_\_\_\_ TO OUR ARMED FORCES.**
- A. Dedicated
  - B. Devoted
  - C. Honoured
  - D. Inscribed
- 125. DIRECTION: USE THE VERBS GIVEN IN BRACKETS EITHER IN ACTIVE OR PASSIVE ACCORDING TO SENSE OF THE GIVEN SENTENCE.  
MY BROTHER.....A LETTER NOW.**
- A. Was writing
  - B. Has been written
  - C. Is written
  - D. Is writing

**126. DIRECTION: USE THE VERBS GIVEN IN BRACKETS EITHER IN ACTIVE OR PASSIVE ACCORDING TO SENSE OF THE GIVEN SENTENCE.**

**RITU .....BY NEXT WEEK WHEN I REACH INDIA. (MARRY)**

- A. Will have/will have been married
- B. Should be / will have been married
- C. Have been / would have been married
- D. Can have / will be married

**127. DIRECTION: USE THE VERBS GIVEN IN BRACKETS EITHER IN ACTIVE OR PASSIVE ACCORDING TO SENSE OF THE GIVEN SENTENCE.**

**SMOKING HAS TO.....IN PUBLIC PLACES. (BAN)**

- A. be banning
- B. be banned
- C. is banned
- D. is banning

**128. DIRECTION: CHOOSE THE CORRECT ALTERNATIVE OF THE FOLLOWING SENTENCES.**

**PINKI SAID TO GAURAV, "WILL YOU HELP ME IN MY WORK JUST NOW?"**

- A. Pinki asked Gaurav if he would help her in her work just then
- B. Pinki questioned to Gaurav that will you help me in my work just now
- C. Pinki told Gaurav whether he will help in her work just now.
- D. Pinki asked to Gaurav that will he help her in her work just now.

**DIRECTION: 129 – 165 GIVE ONE WORD SUBSTITUTE –**

**129. A PERSON WHO RENOUNCES THE WORLD AND PRACTICES SELF-DISCIPLINE IN ORDER TO ATTAIN SALVATION :**

- A. Sceptic
- B. Asceptic
- C. Devotee
- D. Antiquarian

**130. A PERSON WHO DOES NOT BELIEVE IN ANY RELIGION-**

- A. Philatelist
- B. Atheist
- C. Rationalist
- D. Pagan

**131. THE ART OF MAKING POT, BRICKS ETC. WITH CLAY**

- A. Potting
- B. Ceramic
- C. Crockery
- D. Dynamic

**132. TO REMOVE ALL OBJECTIONABLE MATTER**

- A. Expurgate
- B. Censure
- C. Edit
- D. Photoshop

**133. SHOWING STRONG FEELING**

- A. Love
- B. Vehement
- C. Apathetic
- D. Impotent

- 134. A SPEECH DELIVERED WITHOUT ANY PRIOR PREPARATION**
- A. Narration
  - B. Extempore
  - C. Argument
  - D. Dialectic
- 135. MURDER OF KING**
- A. Infanticide
  - B. Matricide
  - C. Genocide
  - D. Ricide
- 136. A POEM WRITTEN ON THE DEATH OF SOMEONE LOVED AND LOST**
- A. Ode
  - B. Sonnet
  - C. Epic
  - D. Elegy
- 137. INSCRIPTION ON A GRAVE**
- A. Epigram
  - B. Oration
  - C. Epitaph
  - D. Obituary
- 138. A PERSON TO AGREE TO WORK FOR SOMEBODY IN ORDER TO LEARN A SKILL**
- A. Assistant
  - B. Pupil
  - C. Lackey
  - D. Apprentice
- 139. A GOVERNMENT BY THE RICH**
- A. Aristocracy
  - B. Monarchy
  - C. Plutocracy
  - D. Oligarchy
- 140. GOVERNMENT BY A SMALL GROUP OF ALL POWERFUL PERSONS**
- A. Oligarchy
  - B. Monarchy
  - C. Democracy
  - D. Anarchy
- 141. CUSTOM OF HAVING MANY WIVES**
- A. Misogamy
  - B. Bigamy
  - C. Polygamy
  - D. Monogamy
- 142. ONE WHO BELIEVES IN THE POWER OF FATE**
- A. Fatalist
  - B. Optimist
  - C. Pessimist
  - D. Parsimonious



- 143. THE GOVERNMENT WING RESPONSIBLE FOR MAKING RULE**  
A. Judiciary  
B. Legislature  
C. Court  
D. Executive
- 144. LIFE HISTORY OF A PERSON WRITTEN BY THAT PERSON**  
A. Topography  
B. Biography  
C. Flexography  
D. Autobiography
- 145. A PLACE WHERE DEAD BODIES ARE KEPT FOR IDENTIFICATION**  
A. Hospital  
B. Morgue  
C. Dispensary  
D. Clinic
- 146. A HOME FOR CHILDREN WITHOUT PARENTS**  
A. Homage  
B. Orphanage  
C. Residence  
D. Nursery
- 147. A PLACE WHERE ONCE LIVES PERMANENTLY**  
A. Homicide  
B. Domicile  
C. Docide  
D. Reconcile
- 148. ONE WHO JOURNEY TO A HOLY PLACE**  
A. Pilgrim  
B. Begrime  
C. Grim  
D. Megrim
- 149. SLEEPING ROOMS WITH SEVERAL BEDS ESPECIALLY IN A COLLEGE OR INSTITUTION**  
A. Dormitory  
B. Monitory  
C. Fumitory  
D. Citatory
- 150. AN INSTRUMENT TO MEASURE TEMPERATURE**  
A. Thermometer  
B. Barometer  
C. Manometer  
D. Microscope
- 151. FEAR OF CONFINED PLACE**  
A. Packophobia  
B. Altophobia  
C. Claustrophobia  
D. Acrophobia

- 152. A GOVERNMENT BY THE NOBLES**  
A. Democracy  
B. Bureaucracy  
C. Autocracy  
D. Aristocracy
- 153. ONE WHO BELIEVE THAT ALL THINGS AND EVENTS IN LIFE ARE PREDETERMINED IS .....**  
A. Fatalist  
B. Puritan  
C. Egoist  
D. Tyrant
- 154. MEDICAL STUDY OF SKIN AND ITS DISEASES**  
A. Endocrinology  
B. Dermatology  
C. Gynealogy  
D. Orthopaedics
- 155. A PERSON READING BOOKS AND NOTHING ELSE**  
A. Book-keeper  
B. Scholar  
C. Student  
D. Book-warm
- 156. A TAKE SECRETLY IN A SMALL QUANTITIES**  
A. Robbery  
B. Pilferage  
C. Theft  
D. Defalcation
- 157. A REMEDY FOR ALL DISEASES**  
A. Stoic  
B. Panacea  
C. Recompense  
D. Marvel
- 158. A PERSON WHO KNOWS MANY FOREIGN LANGUAGES**  
A. a)Linguist  
B. b) Grammarian  
C. c) Polyglot  
D. d) Bilingual
- 159. GAYATRI DOESN'T KNOW HOW TO READ AND WRITE. HER FRIENDS CALL HER**  
A. Illiterate  
B. Invulnerable  
C. Headstrong  
D. d)Blindfolded
- 160. ONE WHO IS PRETENDS TO BE WHAT HE IS NOT**  
A. Optimist  
B. Pessimist  
C. Infallible  
D. Hypocrite

- 161. A PERSON WHO ENTER WITHOUT INVITATION**  
A. Thief  
B. Burglar  
C. Intruder  
D. Vandal
- 162. GIVE AND RECEIVE MUTUALLY**  
A. Present  
B. Approve  
C. Compromise  
D. Reciprocate
- 163. A PERSON WHO PRETENDS TO HAVE MORE KNOWLEDGE OR SKILL THAN HE RALLY HAS**  
A. Apotheosis  
B. Charlatan  
C. Crook  
D. Renegade
- 164. SELECT THE WORD WHICH MATCH SAME AS THE GROUP OF WORDS GIVEN. A FAMILY OF YOUNG ANIMALS-**  
A. Nest  
B. Brood  
C. Offspring  
D. Clutch
- 165. A FORMAL RESIGNATION AND RENUNCIATION OF WORDS.**  
A. Regalia  
B. Axiom  
C. Abdication  
D. Fauna
- 166 TO 190 FILL IN THE BLANK**
- 166. .... DOG DO NOT BITE.**  
A. To bark  
B. Bark  
C. Is bark  
D. Barking
- 167. HIS MANNERS ..... HIM.**  
A. Speak out  
B. Speak up  
C. Speak for  
D. Speak of
- 168. SHE IS ..... FOR HER ACTIONS ON MORAL GROUNDS**  
A. Justiced  
B. Justify  
C. Justified  
D. Justiveifed
- 169. I CAN'T UNDERSTAND WHY HE ..... SO SELFISH.**  
A. Being  
B. B) Is Being  
C. C) Will  
D. Was Being

170. **TO ERR IS ..... TO FORGIVE IS DIVINE**  
A. Humanity  
B. Mankind  
C. Human  
D. Inhumanity
171. **THE PRISONER WAS ..... TO DEATH**  
A. Hung  
B. Hanging  
C. Hanged  
D. Hunged
172. **BOOK WERE LYING ..... THE CURTAIN.**  
A. After  
B. Under  
C. beyond  
D. behind
173. **HE TRAVELED ALL ..... THE WORLD WHEN HE WAS EIGHTY YEAR OLD.**  
A. In  
B. Over  
C. With  
D. Of
174. **SHE ..... NOTHING FROM ME.**  
A. Keep away  
B. Keeps for  
C. Keeps over  
D. Keep back
175. **IT IS EASY TO ..... BUT DIFFICULT TO PRACTICE.**  
A. Sermonize  
B. Sermonized  
C. Sermoned  
D. Sermonizing
176. **DO NOT ..... OTHER'S PRIVACY.**  
A. Invading  
B. Invade  
C. Invaded  
D. Invasions
177. **177. CAN WE STOP WALKING SOON? I ..... TO FEEL TIRED**  
A. Start  
B. Starting  
C. Am starting  
D. Am started
178. **178. THERE AREN'T ..... MOUNTAINS IN THAT PART OF THE COUNTRY**  
A. Much  
B. Many  
C. More  
D. Less

- 179. MOHAN'S MOTHER WAS ANNOYED WITH HIM AS HE COULD NOT ..... HIS EXAMINATION**
- A. Get off
  - B. Get on
  - C. Get through
  - D. Get upon
- 180. A NUMBER OF QUESTIONS ..... ASKED.**
- A. Was
  - B. Were
  - C. Has been
  - D. Is
- 181. YOU WON'T GET THERE IN TIME ..... YOU HURRY**
- A. Whether
  - B. If
  - C. Whatever
  - D. Unless
- 182. THE HANDWRITING IS LEGIBLE. ANYONE ..... EASILY READ IT.**
- A. Can
  - B. Shall
  - C. Must
  - D. Need
- 183. WE STAYED IN DELHI ..... FIVE DAYS.**
- A. In '
  - B. With
  - C. It
  - D. For
- 184. THE TRAIN LEAVES EXACTLY ..... SIX IN THE EVENING.**
- A. On
  - B. In
  - C. At
  - D. From
- 185. ABSTAIN ..... EVIL AND DO GOOD.**
- A. For
  - B. From
  - C. Off
  - D. Of
- 186. THERE IS NOTHING THAT ..... OF US CAN DO TO HELP.**
- A. Every
  - B. Any
  - C. Half
  - D. None
- 187. RAJESH IS ..... BETTER OF THE TWO FOR THIS JOB.**
- A. A
  - B. Most
  - C. The
  - D. More
- 188. HE IS BLIND ..... TO HIS DEFECTS.**
- A. To

- B. Of
- C. From
- D. About

**189. NITHER OF THE ANSWERS ..... CORRECT.**

- A. be
- B. is
- C. were
- D. are

**190. IN THE FOLLOWING QUESTIONS, GROUPS OF FOUR WORDS ARE GIVEN. IN EACH GROUP ONE WORD IS WRONGLY SPELT. FIND THE WRONGLY SPELT WORD.**

- A. Dameanour
- B. Deodorize
- C. Demonstretor
- D. Demoralize

**191. FIND THE WRONGLY SPELT WORD.**

- A. Peruse
- B. Pursue
- C. Pursuit
- D. Persuade

**192. SELECT CORRECT WORD :**

- A. Agressive
- B. Agrressive
- C. Aggressive
- D. Aggressiv

**193. FIND THE CORRECTLY SPELT WORD**

- A. Enterprenuer
- B. Entrepraneur
- C. Entrapreneur
- D. Entrepreneur

**194. FIND OUT THAT WORD, THE SPELLING OF WHICH IS WRONG.**

- A. Period
- B. Suggest
- C. Famous
- D. Reference

**195. CHOOSE THE CORRECTLY SPELT WORD.**

- A. Foreigner
- B. Foriegnor
- C. Forienor
- D. Foreiner

**196. CHOOSE THE MIS-SPELT WORD.**

- A. Rapport
- B. Gravyard
- C. Substance
- D. Resistible

**197. FIND THE CORRECTLY SPELT WORD.**

- A. Gaurantee
- B. Guarantee

- C. Garuntee
- D. Guaruntee

**198. FIND THE INCORRECT WORD**

- A. Kiln
- B. Masculine
- C. Muslim
- D. Disciplin

**199. FIND OUT THAT WORD, SPELLING WHICH WRONG.**

- A. Tentaitive
- B. Tentative
- C. Tentitive
- D. Tantitive

**200. CHOOSE THE CORRECTLY SPELLED WORD OUT OF THE GIVEN ALTERNATIVES.**

- A. Coruppt
- B. Curropt
- C. Corrupt
- D. Currrupt

**201. FIND THE CORRECTLY SPELT WORD-**

- A. Occasion
- B. Occesion
- C. Occasion
- D. Occation

**202. FIND THE CORRECTLY SPELT WORD-**

- A. Immediate
- B. Imiediate
- C. Immedieta
- D. Immediate

**203. FIND THE CORRECTLY SPELT WORD-**

- A. Knack
- B. Kneed
- C. Knee
- D. Kneel

**204. FIND THE CORRECTLY SPELT WORD.**

- A. Mustach
- B. Mustache
- C. Moustach
- D. Moustache

**205. CHOOSE THE CORRECT SPELT WORD OUT OF THE GIVEN ALTERNATIVES.**

- A. Forcaust
- B. Forcast
- C. Forecaste
- D. Forecast

**206. SPELLING TEST – FIND INCORRECT SPELLING.**

- A. Deep
- B. Heap
- C. Sleep
- D. Weap

**207. FIND THE CORRECTLY SPELT WORDS.**

- A. Commission
- B. Commisson
- C. Commision
- D. Comission

**208. FIND THE CORRECTLY SPELT WORDS**

- A. Acmodattion
- B. Accomodation
- C. Accommodation
- D. Accomdation

**209. FIND THE CORRECTLY SPELT WORDS**

- A. Bouquete
- B. Bouquette
- C. Bouquet
- D. Boqquet

**210. IN THE FOLLOWING QUESTION CHOOSE THE CORRECTLY SPELT WORDS.**

- A. Argumant
- B. Argumant
- C. Argument
- D. Argument

Direction (211-225): In these questions some of the sentences have errors and some have none. Find out which part of a sentence has an error and indicate it corresponding to the appropriate letter. If there is no error, indicate corresponding to the last option.

**211. VIMAL / WAS / MURDERED / BY A KNIFE.**

- A. Vimal
- B. was
- C. murdered
- D. by a knife

**212. MANY A PERSON / HAVE LOST / THEIR LIFE / AND ALL PROPERTY IN THE RIOTS.**

- A. Many a person
- B. have lost
- C. their life
- D. and all property in the riots

**213. SHE CAN / SPEAK THE HINDI, / SANSKRIT AND / ENGLISH FLUENTLY**

- A. She can
- B. speak the Hindi,
- C. Sanskrit and
- D. English fluently

**214. EITHER RAM / OR BHUVAN FORGOT / TO TAKE / THEIR PEN**

- A. Either Ram
- B. or Bhuvan forgot
- C. to take
- D. their pen

**215. KANMANI / IS LOOKING / BEAUTIFUL / NOWADAYS**

- A. Kanmani
- B. is looking



- C. beautiful
- D. nowadays

**216. RAM WAS / SENIOR TO / SAM IN COLLEGE.**

- A. Ram was
- B. senior to
- C. Sam in college
- D. No error

**217. GIRLS USUALLY / ARE TAKING / MORE TIME / FOR DRESSING**

- A. girls usually
- B. are taking
- C. more time
- D. for dressings

**218. EITHER SUNIL / OR I / ARE WRONG. / NO ERROR**

- A. Either Sunil
- B. or I
- C. are wrong
- D. No error

**219. YOU WILL COME / TO MY BIRTHDAY PARTY TOMORROW, / ISN'T IT? / NO ERROR.**

- A. You will come
- B. to my birthday party tomorrow,
- C. isn't it
- D. No error

**220. IT IS COMMON / KNOWLEDGE THAT EACH / OF US / LOVES OUR HOME.**

- A. It is common
- B. knowledge that each
- C. of us
- D. loves our home

**221. MY GRANDFATHER OWNS/ FIFTY ACRE / OF WET LAND. / NO ERROR**

- A. My grandfather owns
- B. fifty acre
- C. of wet land
- D. No error

**222. I DON'T HAVE A CAR / AND I DON'T WANT / ONE AS WELL. / NO ERROR**

- A. I don't have a car
- B. and I don't want
- C. one as well
- D. No error

**223. SHE TREATED / ME AS THOUGH / AN OLD FRIEND./ NO ERROR**

- A. She treated
- B. me as though
- C. an old friend
- D. No error

**224. MANY A MAN / HAVE / BEEN WORKING / UNDER ME.**

- A. Many a man
- B. have
- C. been working
- D. under me

**225. HE JUMPED /ON THE /LAKE. / NO ERROR**

- A. he jumped
- B. on the
- C. lake
- D. No error

**DIRECTION 226 TO 240 ARRANGE THE SENTENCE IN PROPER SEQUENCE**

**226. WHEN HE**

- P: did not know
- Q: he was nervous and
- R: heard the hue and cry at midnight
- S: What to do

**THE PROPER SEQUENCE SHOULD BE:**

- A. RQPS
- B. QSPR
- C. SQPR
- D. PQRS

**227. THEN**

- P: it struck me
- Q: of course
- R: Suitable it was
- S: how eminently

**THE PROPER SEQUENCE SHOULD BE:**

- A. SPQR
- B. QSRP
- C. PSRQ9
- D. QPSR

**228. PEOPLE**

- P: at his dispensary
- Q: went to him
- R: of all professions
- S: for medicine and treatment

**THE PROPER SEQUENCE SHOULD BE:**

- A. QPRS
- B. RPQS
- C. RQSP
- D. QRPS

**229. IT IS EASIER**

- P: to venture into space
- Q: for men
- R: beneath their feet
- S: than to explore

**THE PROPER SEQUENCE SHOULD BE:**

- A. QRPS
- B. QPSR
- C. PSRQ
- D. PQSR

**230. IT WAS TO BE**

- P: before their school examination
- Q: which was due to start
- R: the last expedition

S: in a month's

**THE PROPER SEQUENCE SHOULD BE:**

- A. SRQP
- B. RQSP
- C. RPQS
- D. SPRQ

**DIRECTION 231 TO 240: SELECT THE PAIR WHICH HAS THE SAME RELATIONSHIP**

**231. DIVA : OPERA**

- A. Producer : Theatre
- B. Director : Drama
- C. Conductor : Bus
- D. Thespian : Play

**232. GRAIN : SALT**

- A. Shard: Pottery
- B. Shred : Wood
- C. Blades : Grass
- D. Chip : Glass

**233. PAIN : SEDATIVE**

- A. Comfort: Stimulant
- B. Grief : Consolation
- C. Trance : Narcotic
- D. Ache : Extraction

**234. LIGHT : BLIND**

- A. Speech : Dumb
- B. Language : Deaf
- C. Tongue : Sound
- D. Voice : Vibration

**235. PORK : PIG**

- A. Rooster : Chicken
- B. Mutton : Sheep
- C. Steer : Beef
- D. Lobster : Crustacean

**236. AFTER : BEFORE**

- A. First : Second
- B. Present : Past
- C. Contemporary : Historic
- D. Successor : Predecessor

**237. DISTANCE : MILE**

- A. Liquid : Litre
- B. Bushel : Corn
- C. Weight : Scale
- D. fame : Television

**238. TEN : DECIMAL**

- A. Seven : Septet
- B. Four : Quartet
- C. Two : Binary
- D. Five : Quince

**239. HOPE : ASPIRES**

- A. love : Elevates
- B. film : Flam
- C. fib : Lie
- D. fake : Ordinary

**240. INDIGENT : WEALTHY**

- A. Angry : Rich
- B. native : Affluent
- C. Gauche : Graceful
- D. Scholarly : Erudite

**DIRECTION 241 TO 250: GRAMMAR**

**241. THREE IDIOTS ..... REALLY A WATCHABLE MOVIE.**

- A. Is
- B. Are
- C. Also
- D. Have

**242. I DON'T KNOW THE CITY ..... HE LIVES.**

- A. What
- B. Where
- C. When
- D. Which

**243. OUR SIR TEACHES MATHEMATICS ..... ENGLISH.**

- A. Across
- B. Besides
- C. Beside
- D. Both

**244. PLEASE, COME ..... THE BATHROOM.**

- A. Out of
- B. Over
- C. On
- D. In

**245. PLEASE, DON'T LAUGH .... .... THOSE BEGGARS.**

- A. For
- B. Against
- C. At
- D. From

**246. SHE ..... HER HUSBAND FOR 15 MINUTES**

- A. Is beating
- B. Has been beating
- C. Has been beaten
- D. Beats

**247. THE ENGLISH..... ENGLISH.**

- A. Speak
- B. Spoke
- C. Spoken
- D. Is spoken

248. **THE RAINS COMES .....THE CLOUDS.**  
A. In  
B. Near  
C. Under  
D. From
249. **THE STARS ..... COUNTED.**  
A. Can  
B. Can be  
C. Can't be  
D. Must
250. **AMERICA ..... THE POWERFUL PRESIDENT.**  
A. Have  
B. Has  
C. Is  
D. Does

**DIRECTION: COMPREHENSION**

**PASSAGE 01**

**"I HAVE A DREAM" IS A PUBLIC SPEECH DELIVERED BY AMERICAN CIVIL RIGHTS ACTIVIST MARTIN LUTHER KING JR. DURING THE MARCH ON WASHINGTON FOR JOBS AND FREEDOM ON AUGUST 28, 1963, IN WHICH HE CALLS FOR AN END TO RACISM IN THE UNITED STATES AND CALLED FOR CIVIL AND ECONOMIC RIGHTS. DELIVERED TO OVER 250,000 CIVIL RIGHTS SUPPORTERS FROM THE STEPS OF THE LINCOLN MEMORIAL IN WASHINGTON, D.C., THE SPEECH WAS A DEFINING MOMENT OF THE CIVIL RIGHTS MOVEMENT.**

**BEGINNING WITH A REFERENCE TO THE EMANCIPATION PROCLAMATION, WHICH FREED MILLIONS OF SLAVES IN 1863, KING OBSERVES THAT: "ONE HUNDRED YEARS LATER, THE NEGRO STILL IS NOT FREE". TOWARD THE END OF THE SPEECH, KING DEPARTED FROM HIS PREPARED TEXT FOR A PARTLY IMPROVISED PERORATION ON THE THEME "I HAVE A DREAM", PROMPTED BY MAHALIA JACKSON'S CRY: "TELL THEM ABOUT THE DREAM, MARTIN!" IN THIS PART OF THE SPEECH, WHICH MOST EXCITED THE LISTENERS AND HAS NOW BECOME ITS MOST FAMOUS, KING DESCRIBED HIS DREAMS OF FREEDOM AND EQUALITY ARISING FROM A LAND OF SLAVERY AND HATRED. JON MEACHAM WRITES THAT, "WITH A SINGLE PHRASE, MARTIN LUTHER KING JR. JOINED JEFFERSON AND LINCOLN IN THE RANKS OF MEN WHO'VE SHAPED MODERN AMERICA". THE SPEECH WAS RANKED THE TOP AMERICAN SPEECH OF THE 20TH CENTURY IN A 1999 POLL OF SCHOLARS OF PUBLIC ADDRESS.**

251. **WHAT ISSUES DOES MARTIN LUTHER KING'S SPEECH ADDRESS?**  
A. Continuation of racism  
B. End to racism and civil and economic rights  
C. Civil rights  
D. Civil War
252. **WHAT PUSHES KING TO SPEAK: "I HAVE A DREAM"?**  
A. He reads out the Emancipation Proclamation  
B. He is prompted by Mahalia Jackson  
C. He is overwhelmed by the crowd  
D. Lincoln had asked him to give the speech
253. **FROM THE LAST PARAGRAPH, GIVE ONE WORD FOR "TO LEAVE"**  
A. Departed

- B. Proclamation
- C. Improvised
- D. Address

**254. WHAT IS THE NAME OF MARTIN LUTHER KING'S FAMED SPEECH?**

- A. The Emancipation Proclamation
- B. An Improvisation
- C. A Peroration
- D. I Have a Dream

**255. IN FRONT OF WHOM DOES KING SPEAK?**

- A. The civil rights supporters
- B. His friends
- C. Lincoln
- D. The Negroes

**PASSAGE 2**

NOT A ... (1)... PASSES WITHOUT A CONTROVERSY ... (2)... OVER THE NATIONAL SPORTS AWARDS. THE ... (3)... THAT ARISES EVERY YEAR FOLLOWING THE ANNOUNCEMENT OF THE KHEL RATNA, ARJUNA AND DRONACHARYA AWARDS OFTEN ... (4)... TO ACCUSATIONS OF BIAS, REGIONALISM AND ... (5)... REPRESENTATIONS TO THE SPORTS MINISTER, INTERVENTIONS ... (6)... CHIEF MINISTERS, UNION MINISTERS AND POLITICIANS HAVE ALL ... (7)... PART OF THE GAME, THOUGH THE RULES STIPULATE THAT ANY FORM OF "CANVASSING" COULD LEAD TO DISQUALIFICATION OF AN ... (8)... IN PRACTICE, NO SUCH DISQUALIFICATION TAKES ...(69)... AND ASPIRING CANDIDATES READILY PLEAD THEIR CASES WITH THE SPORTS MINISTER EVEN AFTER THE RECOMMENDATIONS OF THE AWARDS PANEL BECOME PUBLIC ...(10).

**256. ----- (1)?**

- A. Distance
- B. Year
- C. Right
- D. Second

**257. ----- (2) ?**

- A. Harming
- B. Developing
- C. Surrounding
- D. Erupting

**258. ----- (3)?**

- A. Debate
- B. Understanding
- C. Struggle
- D. Discussion

**259. ----- (4)?**

- A. Permits
- B. Allows
- C. Leads
- D. Results

**260. ----- (5)?**

- A. Honesty
- B. Complexity
- C. Encourage
- D. Manipulation

261. ----- (6)?  
A. For  
B. By  
C. From  
D. With
262. ----- (7)?  
A. Become  
B. Crossed  
C. Affected  
D. Lasted
263. ----- (8)?  
A. award  
B. game  
C. entry  
D. Theory
264. ----- (9)?  
A. Part  
B. Toll  
C. Role  
D. Place
265. ----- (10)?  
A. Choice  
B. Fury  
C. Property  
D. Knowledge

### **PASSAGE 3**

**THE INDIAN PREMIER LEAGUE (IPL) IS A PROFESSIONAL TWENTY20 CRICKET LEAGUE IN INDIA CONTESTED DURING APRIL AND MAY OF EVERY YEAR BY 8 TEAMS REPRESENTING 8 CITIES OF INDIA. THE LEAGUE WAS FOUNDED BY THE BOARD OF CONTROL FOR CRICKET IN INDIA (BCCI) IN 2008, AND IS REGARDED AS THE BRAINCHILD OF LALIT MODI, THE FOUNDER AND FORMER COMMISSIONER OF THE LEAGUE. IPL HAS AN EXCLUSIVE WINDOW IN ICC FUTURE TOURS PROGRAMME.**

**THE IPL IS THE MOST-ATTENDED CRICKET LEAGUE IN THE WORLD AND IN 2014 RANKED SIXTH BY AVERAGE ATTENDANCE AMONG ALL SPORTS LEAGUES. IN 2010, THE IPL BECAME THE FIRST SPORTING EVENT IN THE WORLD TO BE BROADCAST LIVE ON YOUTUBE. THE BRAND VALUE OF IPL IN 2018 WAS US\$6.3 BILLION, ACCORDING TO DUFF & PHELPS. ACCORDING TO BCCI, THE 2015 IPL SEASON CONTRIBUTED ₹11.5 BILLION (US\$182 MILLION) TO THE GDP OF THE INDIAN ECONOMY.**

**THERE HAVE BEEN ELEVEN SEASONS OF THE IPL TOURNAMENT. THE CURRENT IPL TITLE HOLDERS ARE THE CHENNAI SUPER KINGS, WHO WON THE 2018 SEASON.**

266. **INDIAN PREMIER LEAGUE IS CONSIDERED WHOSE BRAINCHILD?**  
A. Lalit Modi  
B. Nirav Modi  
C. Vineet Jain  
D. Mukesh Ambani
267. **HOW MANY SEASONS HAVE BEEN PLAYED OF IPL TILL 2018?**  
A. 10

- B. 12
- C. 11
- D. 9

- 268. WHAT IS THE ANTONYM OF THE WORD “PROFESSIONAL” W.R.T IT’S USAGE IN THE PASSAGE?**
- A. Competent
  - B. Amateur
  - C. Master
  - D. Polished
- 269. IN WHICH YEAR IPL BECAME THE FIRST SPORTING EVENT TO BE BROADCAST LIVE ON AN ONLINE PLATFORM?**
- A. 2011
  - B. 2010
  - C. 2008
  - D. 2012
- 270. ACCORDING TO DUFF & PHELPS, THE BRAND VALUE OF IPL IN 2018 WAS**
- A. ₹11.5 billion
  - B. US \$182 million
  - C. ₹ 6.3 billion
  - D. US \$6.3 billion

**PASSAGE 4**

A WELL-DRESSED YOUNG MAN ENTERED A BIG TEXTILE SHOP ONE EVENING. HE WAS ABLE TO DRAW THE ATTENTION OF THE SALESMEN WHO THOUGHT HIM RICH AND LIKELY TO MAKE HEAVY PURCHASES. HE WAS SHOWN THE SUPERIOR VARIETIES OF SUIT LENGTHS AND SAREES. BUT AFTER CASUALLY EXAMINING THEM, HE KEPT MOVING TO THE NEXT SECTION, WHERE READYMADE GOODS WERE BEING SOLD AND FURTHER ON TO THE HOSIERY SECTION. BY THEM, THE SALESMEN HAD BEGUN TO DOUBT HIS INTENTIONS AND DREW THE ATTENTION OF THE MANAGER. THE MANAGER ASKED HIM WHAT EXACTLY HE WANTED AND HE REPLIED THAT HE WANTED COURTEOUS TREATMENT. HE EXPLAINED THAT HE HAD COME TO THE SAME SHOP IN CASUAL DRESS THAT MORNING AND DRAWN LITTLE ATTENTION. HIS PRIDE WAS HURT AND HE WANTED TO ASSERT HIMSELF. HE HAD COME IN GOOD DRESS ONLY TO GET DECENT TREATMENT, NOT FOR GETTING ANY TEXTILES. HE LEFT WITHOUT MAKING ANY PURCHASE.8

- 271. THE YOUNG MAN WAS WELL-DRESSED BECAUSE**
- A. It was his habit to dress well
  - B. It was his wedding day
  - C. He wanted to meet the manager of the shop
  - D. He wanted to impress the salesman
- 272. THE SALESMEN IN THE SHOP ARE DESCRIBED AS PEOPLE WHO PAY ATTENTION TO**
- A. Only young men and women
  - B. Pretty women
  - C. Only rich customers
  - D. Regular customers
- 273. THE YOUNG MAN MOVED AWAY TO THE HOSIERY SECTION BECAUSE HE**
- A. Was not interested in purchasing anything now
  - B. Did not like the readymade clothes



- C. Wanted better clothes
- D. Was restless

**274. THE MANAGER ASKED THE YOUNG MAN WHAT HE WANTED BECAUSE**

- A. He would give him exactly what he was looking for
- B. The salesman had drawn his attention to the indifferent attitude of the young man
- C. He thought they could do more business with him that way
- D. He thought the visitor was dissatisfied

**275. THE YOUNG MAN LEFT WITHOUT MAKING PURCHASES BECAUSE HE**

- A. Did not have money
- B. Could not find any item of his choice
- C. Had come only to make a point about the indifferent attitude of the salesmen towards casually dressed customers
- D. Decided to come to make the purchases later on

**PASSAGE 5**

**DURING THE REIGN OF KING VEER, THERE LIVED A WISE MAGISTRATE. HARIPANT'S VERDICTS WERE ALWAYS JUST AND PEOPLE FROM ALL OVER VAST KINGDOM CAME TO HIM IN ORDERED TO SETTLE THEIR DISPUTES. IN THE CITY WHERE HARIPANT LIVED, THERE WAS A GREEDY GHEE MERCHANT NAMED NIRANJAN. HE ALWAYS KEPT TWENTY BARRELS OF GHEE. OF THESE, FIFTEEN WOULD CONTAIN GOOD QUALITY GHEE AND THE REMAINING COULD BE ADULTERATED. HE WOULD MIX THE TWO AND SELL IT. THIS WENT ON FOR A LONG TIME, TILL FINALLY THE PEOPLE FED UP OF BEING CHEATED, COMPLAINED TO HARIPANT.**

**HARIPANT HAD THE GHEE EXAMINED AND FOUND TO IT BE ADULTERATED. HE GAVE NIRANJAN A CHOICE OF PUNISHMENT-DRINK THE FIVE BARRELS OF ADULTERATED GHEE FROM HIS SHOP, OR RECEIVE A HUNDRED LASHINGS, OR PAY A THOUSAND GOLD COINS TO THE TREASURY. NIRANJAN THOUGHT FOR A WHILE. LOSING A THOUSAND GOLD COINS WAS TOO MUCH AND A HUNDRED LASHINGS TOO PAINFUL. SO HE DECIDED TO DRINK THE FIVE BARRELS OF GHEE. THOUGH NIRANJAN SOLD ADULTERATED GOODS IN HIS SHOP, HE MADE SURE HIS OWN FOOD WAS OF THE BEST QUALITY. SO AFTER DRINKING ONE BARREL OF GHEE HE BEGAN TO FEEL SICK. BY THE SECOND BARREL, HE WAS VOMITING. AT THIS POINT HE DECIDED TO OPT FOR THE LASHINGS INSTEAD. BUT HE WAS PAMPERED AND HIS BODY WAS UNUSED TO ANY HARSH TREATMENT. AFTER TEN LASHES, HE STARTED TREMBLING AND BY TWENTY HE WAS GIDDY. 'STOP!' HE SCREAMED. 'I WILL PAY THE THOUSAND GOLD COINS!' AND HE HANDED THEM OVER.**

**SO HE ENDED UP SUFFERING ALL THREE PUNISHMENTS, SOMETHING HE DID NOT FORGET IN A HURRY AND THE PEOPLE OF THE CITY GOT TO USE ONLY THE BEST QUALITY IN THEIR FOOD FROM THEN ON.**

**276. WHY WAS SEAN RELUCTANT TO TAKE LUKE ALONG?**

- A. Because he was a selfish man
- B. He feared that Luke's reaction may alert the Emperor's men
- C. Because Luke could harm him
- D. He wanted to bring fruits for Luke himself

**277. HOW DID OLD SEAN MANAGE TO MEET HIS FOOD REQUIREMENTS?**

- A. By buying food form the market
- B. His nephew luke took care of his requirements
- C. He picked up fruits from the emperor's orchard
- D. The emperor provided him with ample supply of fruits

- 278. WHICH OF THE FOLLOWING CAN BE INFERRED FROM THE PASSAGE?**
- A. Luke did not take good care of his uncle
  - B. Luke of self-control had put Luke into trouble
  - C. The Emperor was a wicked man
  - D. Luke had a habit of speaking loudly
- 279. WHICH OF THE FOLLOWING IS NOT TRUE IN THE CONTEXT OF THE PASSAGE?**
- A. Sean was a poor and suffering man
  - B. Luke came to know about the orchard from his uncle
  - C. Luke was finally set free
  - D. Both Sean and Luke collected fruits from Emperor's orchard
- 280. HOW OFTEN DID SEAN VISIT THE EMPEROR'S ORCHARD?**
- A. Daily
  - B. Once a month
  - C. In a period of two weeks
  - D. Never; his nephew Luke brought fruits for him
- 281. WHICH IS MOST SAME IN MEANING, 'RELUCTANT'?**
- A. Against
  - B. Disinclined
  - C. Opposed
  - D. Go with
- 282. WHY DID NIRANJAN KEEP FIVE BARRELS OF ADULTERATED GHEE?**
- A. To sell to customers who could not afford high quality ghee.
  - B. To make a profit by cheating people.
  - C. Being a miser he kept the low quality ghee for his family.
  - D. Demand for this ghee was low so he kept only a small quantity.
- 283. WHY DID THE PEOPLE DECIDE TO GO TO HARIPANT WITH THEIR COMPLAINT?**
- A. He was close to the king and would get justice for them.
  - B. They knew Niranjana was afraid of Haripant who punished people severely.
  - C. They were confident that he would listen to their complaint and give a fair judgement.
  - D. He was the only magistrate in the entire kingdom.
- 284. WHY DID HARIPANT ALLOW NIRANJAN TO CHOOSE HIS OWN PUNISHMENT?**
- A. He felt sorry for Niranjana.
  - B. Niranjana's offence was minor.
  - C. He did not want to give the wrong punishment.
  - D. None of these
- 285. WHAT EFFECT DID NIRANJAN'S PUNISHMENT HAVE?**
- A. People began to fear Haripant because of his severe punishments.
  - B. Niranjana lost all his customers and had to close down his shop.
  - C. Niranjana gave into all his customers' demands even if it meant making a loss.
  - D. Niranjana never adulterated the ghee thereafter.
- 286. WHY DID THE NIRANJAN SUFFER THREE PUNISHMENTS?**
- A. He had cheated so many people that his punishment had to be severe.
  - B. Haripant wanted to make an example of him so that other merchants would not cheat their customers.
  - C. Niranjana could not bear any punishment completely and so had to undergo all three punishments.
  - D. None of these

**287. CHOOSE THE MOST SIMILAR WORD IN MEANING:**

**SETTLE**

- A. Resolve
- B. Compromise
- C. Arrange
- D. Occupy

**288. CHOOSE THE MOST SIMILAR WORD IN MEANING:**

**CHEATED**

- A. Unfaithful
- B. Exploited
- C. Prevented
- D. Dodged

**289. CHOOSE THE MOST SIMILAR WORD IN MEANING:**

**SUFFERING**

- A. Experiencing
- B. Hurting
- C. Distressing
- D. Trouble

**290. CHOOSE THE MOST OPPOSITE WORD IN MEANING:**

**BEST**

- A. Damaged
- B. Inferior
- C. Defective
- D. Cheap

**PASSAGE 06**

THE SUN, WHILE GOING ON HIS DAILY ROUNDS SAW A PRINCESS AND FELL IN LOVE WITH HER. WHENEVER HE COULD SLIP AWAY FROM THE HEAVENS HE WOULD TAKE HUMAN FORM AND GO DOWN TO THE PRINCESS TO SPEND SOME TIME WITH HER. THE PRINCESS TOO BECAME QUITE FOND OF HIM AND WOULD WAIT FOR HIM TO COME. ONE DAY THE SUN DECIDED TO SEND HER A BLOOD-RED RUBY AS A TOKEN OF HIS LOVE FOR HER. HE PUT THE GEM IN A SILK BEG, AND CALLING A CROW THAT WAS FLYING PAST, ASKED THE BIRD TO DELIVER THE GEM TO HIS BELOVED. CROWS HAD MILKY WHITE FEATHERS IN THOSE DAYS AND IT WAS CONSIDERED AUSPICIOUS IF A CROW CAME ANYWHERE NEAR YOU. SO THE SUN WAS PLEASED THAT HE HAD FOUND A CROW TO DELIVER THE GEM. AS THE CROW SPED THROUGH THE SKY WITH THE SILKEN BAG, THE AROMA OF FOOD LURED HIM. LOOKING DOWN, THE CROW SAW THAT A WEDDING FEAST WAS IN PROGRESS, AND IMMEDIATELY IT WAS DISTRACTED FROM ITS MISSION. FOOD WAS ONE THING IT COULD NEVER RESIST.

ALIGHTING ON A TREE NEARBY, IT HUNG THE BAG ON A TWIG AND WENT OFF TO FIND SOME FOOD. WHILE THE CROW WAS FEASTING, A MERCHANT PASSING BY SAW THE BAG ON THE TREE, AND KNOCKED IT DOWN WITH A POLE. WHEN HE OPENED THE BAG AND SAW ITS CONTENTS HE ALMOST SWOONED IN JOY. QUICKLY POCKETING THE RUBY, HE FILLED THE BAG WITH DRY COW DUNG THAT WAS LYING THERE, AND THEN DEFTLY RETURNED THE BAG TO THE BRANCH. IT WAS ALL DONE SO QUICKLY THAT THE CROW MISSED ALL THE ACTION. AFTER HAVING ITS FILL, IT FLEW UP TO THE TREE, AND PICKING UP THE BAG AND TOOK IT TO THE PERSON IT WAS INTENDED FOR. THE PRINCESS WAS IN THE GARDEN. WHEN THE CROW GAVE HER BAG, SHE TOOK IT EAGERLY, KNOWING THAT IT WAS FROM THE SUN. BUT WHEN SHE SAW ITS CONTENTS SHE REELED BACK IN SHOCK AND ANGER. BELIEVING THAT IT WAS THE SUN'S WAY TO

**TELLING HER THAT HE DID NOT CARE FOR HER, SHE FLUNG THE BAG AWAY, RUSHED TO HER PALACE, AND NEVER CAME OUT AGAIN. WHEN THE SUN LEARNT OF WHAT HAD HAPPENED HE WAS FURIOUS. SO GREAT WAS HIS ANGER THAT WHEN HE TURNED HIS SCORCHING GAZE ON THE CROW, ITS FEATHERS WERE BURNED BLACK. ITS FEATHERS HAVE BEEN BLACK EVER SINCE. THE RUBY DID NOT STAY WITH THE MAN WHO STOLE IT. IT FELL OUT OF HIS POCKET AND ROLLED INTO A DEEP PIT. MEN HAVE BEEN TRYING TO DIG IT OUT EVER SINCE. MANY PRECIOUS STONES HAVE BEEN FOUND IN THE PROCESS, MAKING MYANMAR ONE OF THE RICHEST SOURCES OF RUBBIES AND SAPPHIRES, BUT THE RUBY THAT THE SUN SENT TO THE PRINCESS IS YET TO BE FOUND.**

- 291. WHAT DID THE SUN SEND FOR THE PRINCESS AS A TOKEN OF HIS LOVE?**
- A. He sent her the crow
  - B. He sent her a red ruby
  - C. He gifted her the city of Myamar
  - D. None of these
- 292. WHY DID THE PRINCESS FLING THE GIFT AWAY?**
- A. She had found cow dung in the bag
  - B. The crow was known to bring bad luck
  - C. She did not like rubies
  - D. She had wanted the Sun to personally deliver it
- 293. WHAT LED TO THE DISCOVERY OF PRECIOUS STONES IN MYANMAR?**
- A. Humans discovered the stones in their search for the lost ruby
  - B. The crow spread the news of the lost ruby
  - C. The princess went in search of the lost ruby and discovered other precious stones
  - D. The merchant's clumsiness led to the discovery of precious stones
- 294. WHILE ON ITS WAY TO THE PRINCESS, THE CROW WAS DISTRACTED BY:**
- A. The merchant calling out to him
  - B. The ruby that the Sun sent for the princess
  - C. The temptation of the smell of the food
  - D. The huge crowd at the wedding
- 295. WHY DID THE SUN SEND HIS GIFT FOR THE PRINCESS ALONG WITH THE CROW?**
- A. The princess loved crows
  - B. The crow was the only bird available at the time
  - C. The crow knew where the princess lived
  - D. The crow was considered to be an auspicious bird
- 296. THE JOY OF THE MERCHANT ON FINDING THE RUBY WAS SHORT LIVED BECAUSE-**
- A. He did not succeed in stealing the ruby
  - B. The ruby fell out of his pocket
  - C. The crow returned just in time and caught him red handed
  - D. None of these
- 297. HOW DID THE CROW GET ITS BLACK COLOUR?**
- A. The crow was punished by the Sun for its clumsiness
  - B. The crow was burned black by the scorching gaze of the angry Sun
  - C. The crow was cursed by the merchant
  - D. None of these
- 298. WHAT COULD BE AN APPROPRIATE TITLE FOR THE STORY?**
- A. The careless black Crow

- B. Myanmar and its rich minerals
- C. The Sun and the Princess
- D. The Sun and the lost Ruby

**299. WHAT WAS THE CROW'S MISSION?**

- A. To deliver the gift to the princess
- B. To attend the wedding
- C. To make the Sun angry
- D. To keep the princess in her palace

**300. WHAT MESSAGE DID THE PRINCESS GET AFTER OPENING THE BAG?**

- A. That the Sun truly loved her
- B. That the crow was an evil bird
- C. That the crow was playing a joke on her
- D. That the Sun did not love her anymore

**DIRECTION 301 TO 310: ONE WORD SUBSTITUTE FOR GROUP**

**301. ANTHOLOGY**

- A. A published collection of poem
- B. An unpublished article.
- C. A secret message
- D. A file meant for official work

**302. BALE**

- A. A group of fishes
- B. A bundle of paper, cotton etc tightly wrapped
- C. A container
- D. None of the above

**303. BOUQUET**

- A. A collection of goods
- B. An arranged bunch of flowers
- C. A bunch of corn
- D. A bunch of birds

**304. BRACE**

- A. A pair of pigeons
- B. Collection of makeup
- C. Sort of feeling
- D. None of the above

**305. CORTEGE**

- A. A funeral procession
- B. A winning procession
- C. Uncontrolled crowd
- D. A systematically managed crowd

**306. HAMLET**

- A. A Group of tree in a village
- B. A group of fishes in a river
- C. A group of house in a village
- D. A group of animal near a river

**307. BEVY**

- A. Collection of stamps
- B. Collection of coin
- C. Envoy of tanks
- D. A large group of people or things of a particular kind

**308. CONGREGATION**

- A. A group of dacoits
- B. A group of thieves
- C. A group of worshippers
- D. A group of fishes

**309. GROVE**

- A. A small group of people
- B. A small group of animal
- C. A small group of birds
- D. A small group of tree

**310. HERD**

- A. A large group of animals attacking someone.
- B. A large group of animals that live together
- C. A large group of animals that use to fight between them.
- D. A large group of animals died at same time.

# **APTITUDE**

1.  $18.5(17+18-3) - 12.5^2 = ?$   
A. 465.75  
B. 435.75  
C. 435.25  
D. -425.75
2. **175% OF 480 - 87.5% OF 288 = ?**  
A. 544  
B. 588  
C. 584  
D. 455
3. **225% OF 660 - 175% OF 224 = ?% OF 800**  
A. 136.625  
B. 136.25  
C. 132.625  
D. 132.25
4. **196 X 948 / ? = 1176**  
A. 148  
B. 158  
C. 128  
D. 160
5. **42% OF 445 - 25% OF 354 = ?**  
A. 95.8  
B. 98.4  
C. 102.4  
D. 89.4
6.  **$(3^?)^? = 19683$**   
A. 3  
B. 6  
C. 9  
D. 27
7.  **$(4 \times 4)^3 / (512/8)^4 \times (32 \times 8)^4 = (2 \times 2)^{?+4}$**   
A. 6  
B. 8  
C. 10  
D. 2
8. **65% OF 8800 + 18% OF 720 = ? - 345.25**  
A. 6468.50  
B. 6074.25  
C. 6284.85  
D. 6194.85
9.  **$33^2 + 44^2 = ?^2$**   
A. 35  
B. 45  
C. 55  
D. 6
10.  **$1010 / 36 + 187 \times 20.05 = ?$**   
A. 3770



- B. 3800
- C. 3740
- D. 3700

**11.  $12473 - 1016 - 10137 + 21477 = ? + 8573$**

- A. 15124
- B. 14224
- C. 14624
- D. 14424

**12.  $185\% \text{ OF } 500 - 46\% \text{ OF } 1650 = 4 \times ?$**

- A. 42.5
- B. 35.5
- C. 53.5
- D. 41.5

**13.  $5004 \div 139 - 6 = ?$**

- A. 24
- B. 30
- C. 36
- D. 42

**14.  $2 - [2 - \{2 - 2(2 + 2)\}] = ?$**

- A. -4
- B. 4
- C. 6
- D. -6

**15.  $3640 \div 14 \times 16 + 340 = ?$**

- A. 0.70
- B. 3525
- C. 4480
- D. None of these

**16.  $100 \times 10 - 100 + 2000 \div 100 = ?$**

- A. 29
- B. 780
- C. 920
- D. 979

**17.  $5^2 + 13^2 - 11^2 = (?)^3 - 52$**

- A. 6
- B. 3
- C. 4
- D. 5

**18.  $98643 - 21748 = 51212 + ?$**

- A. 24383
- B. 24713
- C. 25683
- D. 25973

**19.  $(764 \times ?) \div 250 = 382$**

- A. 115
- B. 145

- C. 135
- D. 125

**20.  $9643 - 7750 + ? = 4990$**

- A. 3079
- B. 3097
- C. 3090
- D. 4010

**21.  $(38)^2 + (63)^2 + (?)^2 = 6089$**

- A. 26
- B. 24
- C. 28
- D. 32

**22.  $-224 + (-314) \times (-9) = ?$**

- A. -547
- B. 2602
- C. +547
- D. -2602

**23.  $8.7 + 6.2 \times 7.5 = ?$**

- A. 55.04
- B. 55.20
- C. 66.48
- D. 104.02

**24.  $64344 + 5239 + 4423 + 123 = ?$**

- A. 74126
- B. 74223
- C. 74129
- D. 75624

**25.  $12.25 \times 7.2 + 84.33 = ?$**

- A. 182.51
- B. 177.44
- C. 174.33
- D. 172.53

**Q 26. – 45. WHAT SHOULD COME IN THE PLACE OF QUESTION MARK (?) IN THE FOLLOWING NUMBER SERIES?**

**26. 5    25    7    ?    9    19**

- A. 23
- B. 22
- C. 25
- D. 32

**27. 7    18    40    84    172    ?**

- A. 326
- B. 328
- C. 330
- D. 348

**28. 100    50    52    26    28    ?**

- A. 30

- B. 32
- C. 14
- D. 16

**29.980 392 156.8 ? 25.088 10.0352**

- A. 62.72
- B. 63.85
- C. 65.04
- D. 60.28

**30.113 225 449 ? 1793**

- A. 789
- B. 786
- C. 897
- D. 987

**31.5 12 39 160 805 ?**

- A. 4163
- B. 4153
- C. 4181
- D. 4836

**32.2 10 30 68 ?**

- A. 126
- B. 130
- C. 140
- D. 150

**33.45 46 70 141 ? 1061.5**

- A. 353
- B. 353.5
- C. 352.5
- D. 352

**34.33 321 465 537 573 ?**

- A. 600
- B. 591
- C. 585
- D. 498

**35.2 9 ? 105 436 2195**

- A. 25
- B. 27
- C. 30
- D. 33

**36.4 6 14 44 ? 892**

- A. 176
- B. 172
- C. 178
- D. 1821

**37.126 64 34 20 14 ?**

- A. 12
- B. 14

- C. 16
- D. 18

**38.16** 8 12 30 ? 472.5

- A. 100
- B. 105
- C. 205
- D. 300

**39.25** 34 30 39 35 ?

- A. 45
- B. 44
- C. 46
- D. 47

**40.10** 11 13 21 69 ?

- A. 384
- B. 490
- C. 453
- D. 390

**41.8** 4 4 6 12 30 ?

- A. 80
- B. 85
- C. 90
- D. 95

**42.32** ? 92 134 184

- A. 55
- B. 38
- C. 45
- D. 58

**43.11** 16 26 ? 86

- A. 46
- B. 56
- C. 76
- D. 86

**44.198** 194 185 169 ?

- A. 154
- B. 165
- C. 144
- D. 134

**45.9050** 5675 3478 2147 ?

- A. 3478
- B. 1418
- C. 2428
- D. 3678

**Q 46 – 50. IN THE FOLLOWING NUMBER SERIES ONE NUMBER IS WRONG FIND THE WRONG NUMBER**

**46.6072** 1000 200 48 14 5

- A. 6072
- B. 1000

- C. 5
- D. 48

**47.198 165 148 117 104 77**

- A. 165
- B. 148
- C. 198
- D. 104

**48.445 221 109 53 23 11**

- A. 445
- B. 221
- C. 23
- D. 53

**49.3 9 39 113 265 577**

- A. 3
- B. 113
- C. 39
- D. 577

**50.7 15 42 126 231**

- A. 42
- B. 231
- C. 126
- D. 15

**51. THE MONTHLY SALARY OF A TYPIST IS RS 15625. IF HE GETS AN INCREASE OF 12%, FIND HIS NEW SALARY.**

- A. 20000
- B. 17500
- C. 16500
- D. 18350

**52. 96% OF THE COST OF A TV IS RS 10464. WHAT IS ITS TOTAL COST?**

- A. 12000
- B. 11000
- C. 10900
- D. 11250

**53. 36% OF THE MAXIMUM MARKS ARE REQUIRED TO PASS A TEST. A STUDENT GETS 123 MARKS AND IS DECLARED FAILED BY 39 MARKS. FIND THE MAXIMUM MARKS.**

- A. 450
- B. 500
- C. 1100
- D. 1000

**54. A FRUIT-SELLER HAD SOME APPLES. HE SELLS 40% OF THEM AND STILL HAS 420 APPLES. FIND THE NUMBER OF APPLES HE HAD ORIGINALLY.**

- A. 500
- B. 650
- C. 750
- D. 700

**55. SONAL WENT TO SCHOOL FOR 219 DAYS IN A FULL YEAR. IF HER ATTENDANCE IS 75%, FIND THE NUMBER OF DAYS ON WHICH THE SCHOOL WAS OPEN.**

- A. 300
- B. 292
- C. 350
- D. 250

**56. NIKHIL'S INCOME IS 20% LESS THAN THAT OF AKHIL. HOW MUCH PER CENT IS AKHIL'S INCOME MORE THAN THAT OF NIKHIL'S?**

- A. 25%
- B. 50%
- C. 55%
- D. 15%

**57. WHAT PER CENT OF 1 DAY IS 36 MINUTES?**

- A. 25%
- B. 2.5%
- C. 3.6%
- D. 0.25%

**58. AN ORE CONTAINS 5% COPPER. HOW MUCH ORE IS REQUIRED TO OBTAIN 400 G OF COPPER?**

- A. 2 kg
- B. 4 kg
- C. 6 kg
- D. 8 kg

**59. IN AN EXAMINATION IT IS REQUIRED TO GET 36% TO PASS. A STUDENT GETS 145 MARKS AND FAILS BY 35 MARKS. THE MAXIMUM MARKS ARE-**

- A. 400
- B. 450
- C. 500
- D. 600

**60. IN AN EXAMINATION, 95% OF THE TOTAL EXAMINEES PASSED. IF THE NUMBER OF FAILURES IS 28, HOW MANY EXAMINEES WERE THERE?**

- A. 600
- B. 480
- C. 560
- D. 840

**61. FINE THE AVERAGE OF FIRST 100 NATURAL NUMBERS?**

- A. 50.5
- B. 36.6
- C. 50.8
- D. 51

**62. FINE THE AVERAGE OF FIRST 20 MULTIPLES OF 3?**

- A. 32.0
- B. 30.2
- C. 30
- D. 31

**63. TEN YEARS AGO, P WAS HALF OF Q'S AGE. IF THE RATIO OF THEIR PRESENT AGES IS 3:43:4, WHAT WILL BE THE TOTAL OF THEIR PRESENT AGES?**

- A. 45
- B. 40

- C. 30
- D. 35

64. FATHER IS AGED THREE TIMES MORE THAN HIS SON SUNIL. AFTER 88 YEARS, HE WOULD BE TWO AND A HALF TIMES OF SUNIL'S AGE. AFTER FURTHER 88 YEARS, HOW MANY TIMES WOULD HE BE OF SUNIL'S AGE?

- A. 4 times
- B. 5 times
- C. 3 times
- D. 2 times

65. A MAN'S AGE IS 125% OF WHAT IT WAS 10 YEARS AGO, BUT 83 1/3% OF WHAT IT WILL BE AFTER 10 YEARS. WHAT IS HIS PRESENT AGE?

- A. 70
- B. 60
- C. 50
- D. 40

66. A MAN IS 24 YEARS OLDER THAN HIS SON. IN TWO YEARS, HIS AGE WILL BE TWICE THE AGE OF HIS SON. WHAT IS THE PRESENT AGE OF HIS SON?

- A. 23 years
- B. 22 years
- C. 21 years
- D. 20 years

67. PRESENT AGES OF KIRAN AND SYAM ARE IN THE RATIO OF 5:45:4 RESPECTIVELY. THREE YEARS HENCE, THE RATIO OF THEIR AGES WILL BECOME 11:911:9 RESPECTIVELY. WHAT IS SYAM'S PRESENT AGE IN YEARS?

- A. 28
- B. 27
- C. 26
- D. 24

68. IN THE FIRST 10 OVERS OF A CRICKET GAME, THE RUN RATE WAS ONLY 3.2. WHAT SHOULD BE THE RUN RATE IN THE REMAINING 40 OVERS TO REACH THE TARGET OF 282 RUNS?

- A. 6.25
- B. 5.5
- C. 7.4
- D. 5

69. A GROCER HAS A SALE OF RS. 6435, RS. 6927, RS. 6855, RS. 7230 AND RS. 6562 FOR 5 CONSECUTIVE MONTHS. HOW MUCH SALE MUST HE HAVE IN THE SIXTH MONTH SO THAT HE GETS AN AVERAGE SALE OF RS. 6500?

- A. 4800
- B. 4991
- C. 5004
- D. 5000

70. THE AVERAGE OF 20 NUMBERS IS ZERO. OF THEM, HOW MANY OF THEM MAY BE GREATER THAN ZERO, AT THE MOST?

- A. 1
- B. 20
- C. 0
- D. 19

71. THE CAPTAIN OF A CRICKET TEAM OF 11 MEMBERS IS 26 YEARS OLD AND THE WICKET KEEPER IS 3 YEARS OLDER. IF THE AGES OF THESE TWO ARE EXCLUDED, THE AVERAGE AGE OF THE REMAINING PLAYERS IS ONE YEAR LESS THAN THE AVERAGE AGE OF THE WHOLE TEAM. FIND OUT THE AVERAGE AGE OF THE TEAM.
- A. 23 years
  - B. 20ears
  - C. 24 years
  - D. 21 years
72. THE AVERAGE MONTHLY INCOME OF A AND B IS RS. 5050. THE AVERAGE MONTHLY INCOME OF B AND C IS RS. 6250 AND THE AVERAGE MONTHLY INCOME OF A AND C IS RS. 5200. WHAT IS THE MONTHLY INCOME OF A?
- A. 2000
  - B. 3000
  - C. 4000
  - D. 5000
73. A CAR OWNER BUYS DIESEL AT RS.7.50, RS. 8 AND RS. 8.50 PER LITRE FOR THREE SUCCESSIVE YEARS. WHAT APPROXIMATELY IS THE AVERAGE COST PER LITRE OF DIESEL IF HE SPENDS RS. 4000 EACH YEAR?
- A. RS8
  - B. RS7.98
  - C. RS 6.2c
  - D. RS8.1
74. IN KIRAN'S OPINION, HIS WEIGHT IS GREATER THAN 65 KG BUT LESS THAN 72 KG. HIS BROTHER DOES NOT AGREE WITH KIRAN AND HE THINKS THAT KIRAN'S WEIGHT IS GREATER THAN 60 KG BUT LESS THAN 70 KG. HIS MOTHER'S VIEW IS THAT HIS WEIGHT CANNOT BE GREATER THAN 68 KG. IF ALL ARE THEM ARE CORRECT IN THEIR ESTIMATION, WHAT IS THE AVERAGE OF DIFFERENT PROBABLE WEIGHTS OF KIRAN?
- A. 70KG
  - B. 69KG
  - C. 61 KG
  - D. 67KG
75. THE AVERAGE WEIGHT OF 16 BOYS IN A CLASS IS 50.25 KG AND THAT OF THE REMAINING 8 BOYS IS 45.15 KG. FIND THE AVERAGE WEIGHTS OF ALL THE BOYS IN THE CLASS.
- A. 48.55
  - B. 42.25
  - C. 50
  - D. 51.2
76. A LIBRARY HAS AN AVERAGE OF 510 VISITORS ON SUNDAYS AND 240 ON OTHER DAYS. WHAT IS THE AVERAGE NUMBER OF VISITORS PER DAY IN A MONTH OF 30 DAYS BEGINNING WITH A SUNDAY?
- A. 290
  - B. 304
  - C. 285
  - D. 270



77. A STUDENT'S MARK WAS WRONGLY ENTERED AS 83 INSTEAD OF 63. DUE TO THAT THE AVERAGE MARKS FOR THE CLASS GOT INCREASED BY 12.12. WHAT IS THE NUMBER OF STUDENTS IN THE CLASS?
- A. 45
  - B. 40
  - C. 35
  - D. 30
78. A FAMILY CONSISTS OF TWO GRANDPARENTS, TWO PARENTS AND THREE GRANDCHILDREN. THE AVERAGE AGE OF THE GRANDPARENTS IS 67 YEARS, THAT OF THE PARENTS IS 35 YEARS AND THAT OF THE GRANDCHILDREN IS 6 YEARS. THE AVERAGE AGE OF THE FAMILY IS
- A. 32.27 YEARS
  - B. 31.57 YEARS
  - C. 28.17 YEARS
  - D. 30.57 YEARS
79. IF THE AVERAGE MARKS OF THREE BATCHES OF 55, 60 AND 45 STUDENTS RESPECTIVELY IS 50, 55, 60, WHAT IS THE AVERAGE MARKS OF ALL THE STUDENTS?
- A. 53.23
  - B. 54.68
  - C. 51.33
  - D. 50
80. THE AVERAGE AGE OF HUSBAND, WIFE AND THEIR CHILD 3 YEARS AGO WAS 27 YEARS AND THAT OF WIFE AND THE CHILD 5 YEARS AGO WAS 20 YEARS. WHAT IS THE PRESENT AGE OF THE HUSBAND?
- A. 40
  - B. 32
  - C. 28
  - D. 30
81. THE AVERAGE WEIGHT OF 8 PERSON'S INCREASES BY 2.5 KG WHEN A NEW PERSON COMES IN PLACE OF ONE OF THEM WEIGHING 65 KG. WHAT IS THE WEIGHT OF THE NEW PERSON?
- A. 75 KG
  - B. 50 KG
  - C. 85 KG
  - D. 80 KG
82. A STUDENT NEEDED TO FIND THE ARITHMETIC MEAN OF THE NUMBERS 3, 11, 7, 9, 15, 13, 8, 19, 17, 21, 14 AND X. HE FOUND THE MEAN TO BE 12. WHAT IS THE VALUE OF X?
- A. 12
  - B. 5
  - C. 7
  - D. 9
83. ARUN OBTAINED 76, 65, 82, 67 AND 85 MARKS (OUT IN 100) IN ENGLISH, MATHEMATICS, CHEMISTRY, BIOLOGY AND PHYSICS. WHAT IS HIS AVERAGE MARK?
- A. 53
  - B. 54

- C. 72
- D. 75

**84. IN AN EXAMINATION, A STUDENT'S AVERAGE MARKS WERE 63. IF HE HAD OBTAINED 20 MORE MARKS FOR HIS GEOGRAPHY AND 2 MORE MARKS FOR HIS HISTORY, HIS AVERAGE WOULD HAVE BEEN 65. HOW MANY SUBJECTS WERE THERE IN THE EXAMINATION?**

- A. 12
- B. 11
- C. 13
- D. 14

**85. THE AVERAGE SALARY OF ALL THE WORKERS IN A WORKSHOP IS RS.8000. THE AVERAGE SALARY OF 7 TECHNICIANS IS RS.12000 AND THE AVERAGE SALARY OF THE REST IS RS.6000. HOW MANY WORKERS ARE THERE IN THE WORKSHOP?**

- A. 21
- B. 22
- C. 23
- D. 24

**86. P, Q AND R CAN DO A WORK IN 20, 30 AND 60 DAYS RESPECTIVELY. HOW MANY DAYS DOES IT NEED TO COMPLETE THE WORK IF P DOES THE WORK AND HE IS ASSISTED BY Q AND R ON EVERY THIRD DAY?**

- A. 10 days
- B. 14 days
- C. 15 days
- D. 9 days

**87. A CAN DO A PARTICULAR WORK IN 6 DAYS . B CAN DO THE SAME WORK IN 8 DAYS. A AND B SIGNED TO DO IT FOR RS. 3200. THEY COMPLETED THE WORK IN 3 DAYS WITH THE HELP OF C. HOW MUCH IS TO BE PAID TO C?**

- A. RS.380
- B. RS.600
- C. RS.420
- D. RS.400

**88. P CAN FINISH A WORK IN 18 DAYS. Q CAN FINISH THE SAME WORK IN 15 DAYS. Q WORKED FOR 10 DAYS AND LEFT THE JOB. HOW MANY DAYS DOES P ALONE NEED TO FINISH THE REMAINING WORK?**

- A. 8
- B. 5
- C. 4
- D. 6

**89. 3 MEN AND 7 WOMEN CAN COMPLETE A WORK IN 10 DAYS . BUT 4 MEN AND 6 WOMEN NEED 8 DAYS TO COMPLETE THE SAME WORK . IN HOW MANY DAYS WILL 10 WOMEN COMPLETE THE SAME WORK?**

- A. 50
- B. 40
- C. 30
- D. 20

90. P IS 30% MORE EFFICIENT THAN Q. P CAN COMPLETE A WORK IN 23 DAYS. IF P AND Q WORK TOGETHER, HOW MUCH TIME WILL IT TAKE TO COMPLETE THE SAME WORK?
- A. 9
  - B. 11
  - C. 13
  - D. 15
91. 10 MEN CAN COMPLETE A WORK IN 7 DAYS. BUT 10 WOMEN NEED 14 DAYS TO COMPLETE THE SAME WORK. HOW MANY DAYS WILL 5 MEN AND 10 WOMEN NEED TO COMPLETE THE WORK?
- A. 5
  - B. 6
  - C. 7
  - D. 8
92. P TAKES TWICE AS MUCH TIME AS Q OR THRICE AS MUCH TIME AS R TO FINISH A PIECE OF WORK. THEY CAN FINISH THE WORK IN 2 DAYS IF WORK TOGETHER. HOW MUCH TIME WILL Q TAKE TO DO THE WORK ALONE?
- A. 4
  - B. 5
  - C. 6
  - D. 7
93. P AND Q CAN DO A WORK IN 30 DAYS. Q AND R CAN DO THE SAME WORK IN 24 DAYS AND R AND P IN 20 DAYS. THEY STARTED THE WORK TOGETHER, BUT Q AND R LEFT AFTER 10 DAYS. HOW MANY DAYS MORE WILL P TAKE TO FINISH THE WORK?
- A. 10
  - B. 15
  - C. 18
  - D. 22
94. P WORKS TWICE AS FAST AS Q. IF Q ALONE CAN COMPLETE A WORK IN 12 DAYS, P AND Q CAN FINISH THE WORK IN --- DAYS.
- A. 1
  - B. 2
  - C. 3
  - D. 4
95. THERE ARE TWO BUILDINGS P AND Q. IF 1515 PERSONS ARE SENT FROM P TO Q, THEN THE NUMBER OF PERSONS IN EACH BUILDING IS THE SAME. IF 2020 PERSONS ARE SENT FROM Q TO P, THEN THE NUMBER OF PERSONS IN P IS DOUBLE THE NUMBER OF PERSONS IN Q. HOW MANY PERSONS ARE THERE IN BUILDING P?
- A. 80
  - B. 140
  - C. 120
  - D. 90
96. A MAN HAS SOME HENS AND COWS. IF THE NUMBER OF HEADS BE 4848 AND THE NUMBER OF FEET EQUALS 140,140, THEN THE NUMBER OF HENS WILL BE-
- A. 22
  - B. 24
  - C. 26
  - D. 20

97. THE COST PRICE OF 2020 ARTICLES IS THE SAME AS THE SELLING PRICE OF XX ARTICLES. IF THE PROFIT IS 25%,FIND THE VALUE OF XX.
- A. 15
  - B. 25
  - C. 18
  - D. 16
98. A MAN BUYS A SCOOTER FOR RS. 1400RS. 1400 AND SELLS IT AT A LOSS OF 15%. WHAT IS THE SELLING PRICE OF THE SCOOTER?
- A. Rs.1240
  - B. Rs.1190
  - C. Rs.1090
  - D. Rs.1130
99. ON SELLING 1717 BALLS AT RS. 720RS. 720, THERE IS A LOSS EQUAL TO THE COST PRICE OF 55 BALLS. WHAT IS THE COST PRICE OF A BALL?
- A. Rs.43
  - B. Rs.60
  - C. Rs.55
  - D. Rs.34
100. IF SELLING PRICE OF AN ARTICLE IS RS. 250,RS. 250, PROFIT PERCENTAGE IS25% FIND THE RATIO OF THE COST PRICE AND THE SELLING PRICE.
- A. 5:3
  - B. 3:5
  - C. 4:5
  - D. 5:4
101. WHAT DAY OF THE WEEK DOES MAY 28 2006 FALL ON-
- A.. Saturday
  - B. Monday
  - C. Sunday
  - D. Thursday
102. WHAT WILL BE THE DAY OF THE WEEK 15TH AUGUST, 2010?
- A. Thursday
  - B. Sunday
  - C. Monday
  - D. Saturday
103. TODAY IS MONDAY. AFTER 61 DAYS, IT WILL BE-
- A. Thursday
  - B. Sunday
  - C. Monday
  - D. Saturday
104. HOW MANY DAYS ARE THERE IN X WEEKS X DAYS.
- A. 14x
  - B. 8x
  - C.  $7x^2$
  - D. 7
105. HOW MANY DAYS ARE THERE IN X WEEKS X DAYS.
- A. 14x
  - B. 8x

- C.  $7x^2$
- D. 7

- 106. CALENDAR FOR THE YEAR 2007 WILL BE SAME FOR THE YEAR.**  
A. 2017  
B. 2018  
C. 2014  
D. 2016
- 107. WHICH OF THE FOLLOWING IS NOT A LEAP YEAR?**  
A. 1200  
B. 800  
C. 700  
D. 2000
- 108. 01-JAN-2007 WAS MONDAY. WHAT DAY OF THE WEEK LIES ON 01-JAN-2008?**  
A. Wednesday  
B. Sunday  
C. Friday  
D. Tuesday
- 109. 8TH DEC 2007 WAS SATURDAY, WHAT DAY OF THE WEEK WAS IT ON 8TH DEC, 2006?**  
A. Sunday  
B. Tuesday  
C. Friday  
D. Tuesday
- 110. ON 8TH FEB, 2005 IT WAS TUESDAY. WHAT WAS THE DAY OF THE WEEK ON 8TH FEB, 2004?**  
A. Sunday  
B. Friday  
C. Saturday  
D. Monday
- 111. THE LAST DAY OF A CENTURY CANNOT BE?**  
A. Monday  
B. Wednesday  
C. Tuesday  
D. Friday
- 112. JANUARY 1, 2008 IS TUESDAY. WHAT DAY OF THE WEEK LIES ON JAN 1, 2009?**  
A. Saturday  
B. Wednesday  
C. Thursday  
D. Saturday
- 113. IF JAN 1, 2006 WAS A SUNDAY, WHAT WAS THE DAY OF THE WEEK JAN 1, 2010?**  
A. Friday  
B. Thursday  
C. Tuesday  
D. Saturday
- 114. WHAT WAS THE DAY OF THE WEEK ON 17TH JUNE 1998?**  
A. Monday  
B. Sunday

- C. Wednesday
- D. Friday

- 115. 6TH MARCH, 2005 IS MONDAY, WHAT WAS THE DAY OF THE WEEK ON 6TH MARCH, 2004?**
- A. Friday
  - B. Saturday
  - C. Wednesday
  - D. Sunday
- 116. WHAT DAY OF THE WEEK WAS 1 JANUARY 1901**
- A. Monday
  - B. Tuesday
  - C. Saturday
  - D. Friday
- 117. WHAT DAY OF THE WEEK WILL 22 APR 2222 BE?**
- A. Monday
  - B. Tuesday
  - C. Sunday
  - D. Thursday
- 118. TODAY IS THURSDAY. THE DAY AFTER 5 DAYS WILL BE?**
- A. Monday
  - B. Tuesday
  - C. Saturday
  - D. Sunday
- 119. WHAT IS THE YEAR NEXT TO 1990 WHICH WILL HAVE THE SAME CALENDAR AS OF THE YEAR 1990?**
- A. 1992
  - B. 2001
  - C. 1995
  - D. 1996
- 120. JANUARY 1, 2004 WAS A THURSDAY, WHAT DAY OF THE WEEK LIES ON JANUARY 1 2005.**
- A. Saturday
  - B. Monday
  - C. Saturday
  - D. Tuesday
- 121. IF THE FIRST DAY OF A YEAR (OTHER THAN LEAP YEAR) WAS FRIDAY, THN WHICH WAS THE LAST DAY OF THAT YEAR?**
- A. Saturday
  - B. Friday
  - C. Tuesday
  - D. Monday
- 122. IF 1<sup>ST</sup> OCTOBER IS SUNDAY, THEN 1<sup>ST</sup> NOVEMBER WILL BE.**
- A. Saturday
  - B. Thursday
  - C. Wednesday
  - D. Tuesday
- 123. ARUN WENT FOR A MOVIE NINE DAYS AGO. HE GOES TO WATCH MOVIES ONLY ON**

**THURSDAYS. WHAT DAY OF THE WEEK IS TODAY?**

- A. Wednesday
- B. Saturday
- C. Friday
- D. Sunday

**124. 1.12.91 IS THE FIRST SUNDAY. WHICH IS THE FOURTH TUESDAY OF DECEMBER 91?**

- A. 20.12.91
- B. 22.12.91
- C. 24.12.91
- D. 25.12.91

**125. IF THE DAY BEFORE YESTERDAY WAS THURSDAY, WHEN WILL SUNAY BE?**

- A. Day after tomorrow
- B. Tomorrow
- C. Two days after today
- D. Today

**126. THE SECOND DAY OF A MONTH I FRIDAY, WHAT WILL BE THE LAST DAY OF THE NEXT MONTH WHICH HAS 31 DAYS?**

- A. Friday
- B. Saturday
- C. Wednesday
- D. Data inadequate

**127. HOW MANY DAYS WILL THERE BE FROM 26<sup>TH</sup> JANUARY,1996 TO 15<sup>TH</sup> MAY,199(BOTH DAYS INCLUDED)?**

- A. 102
- B. 103
- C. 111
- D. 120

**128. IF 25<sup>TH</sup> OF AUGUST IN A YEAR IS THURSDAY, THE NUMBER OF MONDAYS IN THAT MONTH IS**

- A. 4
- B. 5
- C. 2
- D. 3

**129. IF THE SEVENTH DAY OF A MONTH IS THREE DAYS EARLIER THAN FRIDAY, WHAT DAY WILL IT BE ON THE NINETEENTH DAY OF THE MONTH?**

- A. Saturday
- B. Monday
- C. Sunday
- D. Wednesday

**130. SECOND SATURDAY AND EVERY SUNDAY IS A HOLIDAY. HOW MANY WORKING DAYS WILL BE THERE IN A MONTH OF 30 DAYS BEGINNING ON A SATURDAY?**

- A. 24
- B. 23
- C. 18
- D. 21

**131. A IS 2  $\frac{1}{3}$  TIMES AS FAST AS B. IF A GIVES B A START OF 80 M, HOW LONG SHOULD**

**THE RACE COURSE BE SO THAT BOTH OF THEM REACH AT THE SAME TIME?**

- A. 170 metre
- B. 150 metre
- C. 140 metre
- D. 150 metre

**132. A CAN RUN 224 METRE IN 28 SECONDS AND B IN 32 SECONDS. BY WHAT DISTANCE A BEAT B?**

- A. 36 metre
- B. 24 metre
- C. 32 metre
- D. 28 metre

**133. IN A 100 M RACE, A CAN GIVE B 10 M AND C 28 M. IN THE SAME RACE B CAN GIVE C**

- A. 20 m
- B. 15 m
- C. 10 m
- D. 25 m

**134. AT A GAME OF BILLIARDS, A CAN GIVE B 15 POINTS IN 60 AN A CAN GIVE C TO 20 POINTS IN 60. HOW MANY POINTS CAN B GIVE C IN A GAME OF 90?**

- A. 22 points
- B. 20 points
- C. 12 points
- D. 10 points

**135. IN A 500 M RACE, THE RATIO OF THE SPEEDS OF TWO CONTESTANTS A AND B IS 3 : 4. A HAS A START OF 140 M. THEN, A WINS BY:**

- A. 60 m
- B. 20 m
- C. 40 m
- D. 10 m

**136. IN A RACE OF 200 M, A CAN BEAT B BY 31 M AND C BY 18 M. IN A RACE OF 350 M, C WILL BEAT B BY:**

- A. 20.25 m
- B. 21.5 m
- C. 22.75 m
- D. 25 m

**137. A CAN RUN 22.5 M WHILE B RUNS 25 M. IN A KILOMETRE RACE B BEAT A BY:**

- A. 102 m
- B. 100 m
- C. 75 m
- D. 112.5 m

**138. IN A 100 M RACE, A CAN BEAT B BY 25 M AND B CAN BEAT C BY 4 M. IN THE SAME RACE, A CAN BEAT C BY:**

- A. 21 m
- B. 28 m
- C. 26 m
- D. 29 m

**139. IN A 300 M RACE A BEATS B BY 22.5 M OR 6 SECONDS. B'S TIME OVR THE COURSE IS:**

- A. None of these



- B. 80 sec
- C. 76 sec
- D. 86 sec

140. **A AND B TAKE PART IN 100 M RACE. A RUNS AT 5 KMPH. A GIVES B A START OF 8M AND STILL BEATS HIM BY 8 SECONDS. THE SPEED OF B IS:**
- A. 4.4 kmph
  - B. 4.25 kmph
  - C. 4.14 kmph
  - D. 5.15 kmph
141. **A RUNS  $1\frac{2}{3}$  TIMES AS FAST AS B. IF A GIVES B A START OF 80 M, HOW FAR MUST THE WINNING POST BE SO THAT A AND B MIGHT REACH IT AT THE SAME TIME?**
- A. 200 m
  - B. 270 m
  - C. 300 m
  - D. 160 m
142. **IN 100 M RACE, A COVERS THE DISTANCE IN 36 SECONDS AND B IN 45 SECONDS. IN THIS RACE A BEATS B BY:**
- A. 9 m
  - B. 25 m
  - C. 22.5 m
  - D. 20 m
143. **IN A 100 M RACE, A BEATS B BY 10 M AND C BY 13 M. IN A RACE OF 180 M, B WILL BEAT C BY:**
- A. 5.4 m
  - B. 5 m
  - C. 4.5 m
  - D. 6 m
144. **IN A 200METRES RACE A BEATS B BY 35 M OR 7 SECONDS. A'S TIME OVER THE COURSE IS:**
- A. 33 sec
  - B. 40 sec
  - C. 47 sec
  - D. None
145. **A, B AND C ARE THE THREE CONTESTANTS IN ONE KM RCE. IF A CAN GIVE B A START OF 40 METRES AND A CAN GIVE C A START OF 64 METRES. HOW MANY METRES START CAN B GIVE C?**
- A. None of these
  - B. 20 m
  - C. 25 m
  - D. 35 m
146. **IN A GAME OF 90 POINTS A CAN GIVE B 15 POINTS AND C 30 POINTS. HOW MANY POINTS CAN B GIVE C IN A GAME OF 100 POINTS?**
- A. 140
  - B. 20
  - C. 300
  - D. 50
147. **IN A 100 METRES RACE. A RUNS AT A SPEED OF 2 METRES PER SECONDS. IF A GIVES B A START OF 4 METRES AND STILL BEATS HIM BY 10 SECONDS, FIND THE**

**SPEED OF B.**

- A. 1.6 m/sec.
- B. 4m/sec
- C. 2.6m/sec
- D. 1m/sec

148. **P RUNS 1 KM IN 3 MINUTES AND Q IN 4 MINUTES 10 SECS. HOW MANY METRES START CAN P GIVE Q IN 1 KILOMETRE RACE, SO THAT THE RACE MAY END IN A DEAD HEAT?**
- A. 210 metre
  - B. 180 metre
  - C. 220 metre
  - D. 280 metre
149. **A RUNS  $1\frac{3}{8}$  TIMES AS FAST AS B. IF A GIVES B A START OF 90 M AND THEY REACH THE GOAL AT THE SAME TIME. THE GOAL IS AT A DISTANCE OF?**
- A. 330 m
  - B. 440 m
  - C. 120 m
  - D. 280 m
150. **TWO BOYS A AND B RUN AT  $4\frac{1}{5}$  AND 8 KM AN HOUR RESPECTIVELY. A HAVING 150 M START AND THE COURSE BEING 1 KM, B WINS BY A DISTANCE OF?**
- A. 325 m
  - B. 60 m
  - C. 120 m
  - D. 275 m
151. **IN A 100 METRES RACE, A CAN BEAT B BY 10 METRES AND B CAN BEAT C BY 5 METRES. IN THE SAME RACE, A CAN BEAT C BY 15?**
- A. 14.5 metre
  - B. 14 metre
  - C. 15.5 metre
  - D. 15 metre
152. **X, Y AND Z ARE THE THREE CONTESTANTS IN ONE KM RACE. IF X CAN GIVE Y A START OF 52 METRES AND X CAN ALSO GIVE Z A START OF 83 METRES, HOW MANY METRES START Y CAN GIVE Z?**
- A. 33.3 m
  - B. 33 m
  - C. 32 m
  - D. 32.7 m
153. **IN A RACE OF 600 M. A CAN BEAT B BY 60 M AND IN A RACE OF 500 M. B CAN BEAT C BY 50 M. BY HOW MANY METRES WILL A BEAT C IN A RACE OF 400 M?**
- A. 76 metre
  - B. 74 metre
  - C. 72 metre
  - D. 78 metre
154. **A CAN RUN 220 METRES IN 41 SECONDS AND B IN 44 SECONDS. BY HOW MANY SECOND WILL B WIN IF HE HAS 30 METRES START?**
- A. 8 sec
  - B. 4 sec
  - C. 2.5 sec
  - D. 3 sec

- 155. IN ONE KM RACE A BEATS B BY 4 SECONDS OR 40 METRES. HOW LONG DOES B TAKE TO RUN THE KILOMETER?**
- A. 112 sec  
 B. 110 sec  
 C. 101 sec  
 D. 100 sec
- 156. IN A GAME, A CAN GIVE B 20 POINTS, A CAN GIVE C 32 POINTS AND B CAN GIVE C 15 POINTS. HOW MANY POINTS MAKE THE GAME?**
- A. 120 points  
 B. 90 points  
 C. 80 points  
 D. 100 points
- 157. IN A GAME, A CAN GIVE B 20 POINTS, A CAN GIVE C 32 POINTS AND CAN GIVE C 15 POINTS. HOW MANY POINTS MAKE THE GAME?**
- A. 120 points  
 B. 90 points  
 C. 80 points  
 D. 100 Points
- 158. IN A GAME, A CAN GIVE B 20 POINTS, A CAN GIVE C 32 POINTS AND CAN GIVE C 15 POINTS. HOW MANY POINTS MAKE THE GAME?**
- A. 120 points  
 B. 90 points  
 C. 80 points  
 D. 100 Points
- 159. IN A GAME A CAN GIVE B 20 POINTS IN 60 AND C 18 POINTS IN 90. HOW MANY POINTS CAN C GIVE B IN A GAME OF 120?**
- A. 20 points  
 B. 22 points  
 C. 18 points  
 D. 40 points
- 160. IN A KM RACE A CAN BEAT B BY 100 M AND B CAN BEAT C BY 60 M. IN THE SAME RACE A CAN BEAT C BY-**
- A. 144 m  
 B. 164 m  
 C. 144 m  
 D. 154 m
- 161. IN A FLAT RACE, A BEATS B BY 15 METRES AND C BY 29 METRES. WHEN B AND C RUN OVER THE COURSE TOGETHER, B WINS BY 15 METRES. FIND THE LENGTH OF THE COURSE?**
- A. 225 m  
 B. 125 m  
 C. 220 m  
 D. 256 m
- 162. AN ACCURATE CLOCK SHOWS 8 O'CLOCK IN THE MORNING. THROUGH HOW MANY DEGREES WILL THE HOUR HAND ROTATE WHEN THE CLOCK SHOWS 2 O'CLOCK IN THE AFTERNOON?**
- A.  $154^\circ$   
 B.  $180^\circ$

- C.  $170^\circ$
- D.  $160^\circ$

- 163. A CLOCK IS STARTED AT NOON. BY 10 MINUTES PAST 5, THE HOUR HAND HAS TURNED THROUGH**
- A.  $155^\circ$
  - B.  $145^\circ$
  - C.  $152^\circ$
  - D.  $140^\circ$
- 164. A WHAT TIME BETWEEN 7 AND 8 O'CLOCK WILL THE HANDS OF A CLOCK BE IN THE SAME STRAIGHT LINE BUT NOT TOGETHER.**
- A. 5 minutes past 7
  - B. 5311minutes past 7
  - C. 5111 minutes past 7
  - D. 5511 minutes past 7
- 165. AT WHAT TIME BETWEEN 5.30 AND 6 WILL THE HANDS OF A CLOCK BE AT RIGHT ANGLES?**
- A. 44 minutes past 5
  - B. 4471144711 minutes past 5
  - C. 4371143711 minutes past 5
  - D. 43 minutes past 5
- 166. AT WHAT ANGLE THE HANDS OF A CLOCK ARE INCLINED AT 15 MINUTES PAST 5?**
- A.  $6712^\circ$
  - B.  $6212^\circ$
  - C.  $70^\circ$
  - D.  $6334^\circ$
- 167. THE ANGLE BETWEEN THE MINUTE HAND AND THE HOUR HAND OF A CLOCK WHEN THE TIME IS 8.30, IS-**
- A.  $75^\circ$
  - B.  $85^\circ$
  - C.  $80^\circ$
  - D.  $70^\circ$
- 168. HOW MANY TIMES IN A DAY, ARE THE HANDS OF A CLOCK IN STRAIGHT LINE BUT OPPOSIE IN DIRECTION?**
- A. 48
  - B. 22
  - C. 24
  - D. 12
- 169. AT WHAT TIM BETWEEN 3 O'CLOCK AND 4 O'CLOCK, BOTH THE NEEDLES OF A CLOCK WILL COINCIDE EACH OTHER?**
- A. 1621116211 minutes past 3
  - B. 1641116411 minutes past 3
  - C. 1541115411 minutes past 3
  - D. 1521115211 minutes past 3
- 170. HOW MANY TIMES WILL THE HANDS OF A CLOCK COINCIDE IN A DAY?**
- A. 24
  - B. 22
  - C. 20
  - D. 21

- 171. HOW MANY TIMES IN A DAY, THE HANDS OF A CLOCK ARE STRAIGHT?**  
 A. 22  
 B. 44  
 C. 48  
 D. 24
- 172. HOW MUC DOES A WATCH LOSE PER DAY, IF ITS HANDS COINCIDE EVERY 64 MINUTES?**  
 A. 3411134111 minute  
 B. 3281132811 minute  
 C. 3131 minute  
 D. 3321133211 minute
- 173. AT WHAT TIME BETWEEN 9 AND 10 O' CLOCK WILL THE HANDS OF A CLOCK BE TOGETHER?**  
 A. 45294529 min past 9  
 B. 4911149111 min past 9  
 C. 4811248112 min past 9  
 D. 4721547215 min past 9
- 174. AT WHAT TME BETWEEN 4 AND 5 O'CLOCK WILL THE HANDS OF A WATCH POINT IN OPPOSITE DIRECTIONS?**  
 A. 5361153611 minutes past 4  
 B. 5371153711 minutes past 4  
 C. 5461154611 minutes past 4  
 D. 5471154711 minutes past 4
- 175. A WATCH WHICH GAINS 5 SECONDS IN 3 MINUTES WAS SET RIGHT AT 7 A.M. IN THE AFTERNOON OF THE SAME DAY, WHEN THE WATCH INDICATED QUARTER PAST 4 O'CLOCK, THE TRUE TIME IS-**  
 A. 3 pm  
 B. 3.45 pm  
 C. 3.30 pm  
 D. 4 pm
- 176. HOW MANY TIMES ARE THE HANDS OF A CLOCK AT RIGHT ANGLE IN A DAY?**  
 A. 48  
 B. 44  
 C. 24  
 D. 22
- 177. A WATCH WHICH GAINS UNIFORMLY IS 2 MINUTES LOW AT NOON ON MONDAY AND IS 4 MIN 48 SEC FAST AT 2 PM ON THE FOLLOWING MONDAY. WHEN WAS IT CORRECT?**  
 A. 2 pm on Tuesday  
 B. 3 pm on Wednesday  
 C. 2 pm on Wednesday  
 D. 3 pm on Tuesday
- 178. WHAT IS THE REFLEX ANGLE BETWEEN THE HANDS OF A CLOCK AT 10.25?**  
 A.  $195^\circ$   
 B.  $19712^\circ$   
 C.  $180^\circ$   
 D.  $19312^\circ$

- 179. THE ANGE BETWEEN THE MINUTE HAND AND THE HOUR HAND OF A CLOCK WHEN THE TIME IS 4.20 IS-**
- A.  $10^\circ$
  - B.  $5^\circ$
  - C.  $0^\circ$
  - D.  $1^\circ$
- 180. A CLOCK IS SET AT 5 AM. IF THE CLOCK LOSES 16 MINUTES IN 24 HOURS, WHAT WILL BE THE TRUE TIME WHEN THE CLOCK INDICATES 10 PM ON 4TH DAY?**
- A. 9.30 pm
  - B. 10 pm
  - C. 10.30 pm
  - D. 11 pm
- 181. WHAT IS THE AGLE BETWEEN THE HOUR AND THE MINUTE HAND OF A CLOCK WHEN THE TIME IS 3.25?**
- A. 4747
  - B. 46124612
  - C. 4646
  - D. 4712
- 182. AT WHAT TIME BETWEEN 8 AND 9 O'CLOCK WILL THE HANDS OF A CLOCK ARE IN THE SAME STRAIGHT LINE BUT NOT TOGETHER?**
- A. 1181111811 minutes past 8
  - B. 1081110811 minutes past 8
  - C. 111011111011 minutes past 8
  - D. 101011101011 minutes past 8
- 183. AT WHAT TIME BETWEEN 2 AND 3 O'CLOCK WILL THE HANDS OF A CLOCK BE TOGETHER?**
- A. 91119111 minutes past 2
  - B. 9101191011 minutes past 2
  - C. 1011110111 minutes past 2
  - D. 101011101011 minutes past 2
- 184. AT WHAT TIME BETWEEN 5 AND 6 'O CLOCK, WILL THE HANDS OF A CLOCK BE AT RIGHT ANGLE?**
- A. 101011101011 minutes past 5 and 4371143711 minutes past 5
  - B. 101011101011 minutes past 5 and 4271142711 minutes past 5
  - C. 1091110911 minutes past 5 and 4371143711 minutes past 5
  - D. 1091110911 minutes past 5 and 4271142711 minutes past 5
- 185. THE MINUTE HAND OF A CLOCK OVERTAKES THE HOUR HAND AT INTERVALS OF 65 MINUTES. HOW MUCH A DAY DOES THE CLOCK GAIN OR LOSS?**
- A. 109143109143 minutes
  - B. 119143119143 minutes
  - C. 11101431110143 minutes
  - D. 10101431010143 minutes
- 186. FIND THE TIME BETWEEN 4 AND 5'O CLOCK, WHEN THE TWO HANDS OF A CLOCKS ARE 4 MINUTES APART?**
- A. 2621126211 minutes past 4 and 1751117511 minutes past 4
  - B. 2611126111 minutes past 4 and 1751117511 minutes past 4
  - C. 2621126211 minutes past 4 and 1741117411 minutes past 4
  - D. 2611126111 minutes past 4 and 1741117411 minutes past 4

- 187. AT WHAT TIME BETWEEN 5 AND 6 WILL THE HANDS OF THE CLOCK COINCIDE?**  
 A. 2621126211 minutes past 5  
 B. 2631126311 minutes past 5  
 C. 2831128311 minutes past 5  
 D. 2731127311 minutes past 5
- 188. AT WHAT TIME BETWEEN 6 AND 7 WILL THE HANDS BE PERPENDICULAR?**  
 A. 4811148111 minutes past 6 and 1641116411 minutes past 6  
 B. 4848 minutes past 6 and 1631116311 minutes past 6  
 C. 4911149111 minutes past 6 and 1641116411 minutes past 6  
 D. 4821148211 minutes past 6 and 1631116311 minutes past 6
- 189. WHAT IS THE ANGLE BETWEEN THE HANDS AT 4.40?**  
 A.  $95^\circ$   
 B.  $100^\circ$   
 C.  $120^\circ$   
 D.  $110^\circ$
- 190. A CLOCK STRIKES 4 TAKING 9 SECONDS. IN ORDER TO STRIKE 12 AT THE SAME RATE, THE TIME TAKEN IS-**  
 A. 33 seconds  
 B. 30 seconds  
 C. 36 seconds  
 D. 27 seconds
- 191. P IS ABLE TO DO A PIECE OF WORK IN 15 DAYS AND Q CAN DO THE SAME WORK IN 20 DAYS. IF THEY CAN WORK TOGETHER FOR 4 DAYS, WHAT IS THE FRACTION OF WORK LEFT?**  
 A.  $\frac{8}{15}$   
 B.  $\frac{7}{15}$   
 C.  $\frac{11}{15}$   
 D.  $\frac{2}{11}$
- 192. P CAN LAY RAILWAY TRACK BETWEEN TWO STATIONS IN 16 DAYS. Q CAN DO THE SAME JOB IN 12 DAYS. WITH THE HELP OF R, THEY COMPLETE THE JOB IN 4 DAYS. HOW MUCH DAYS DOES IT TAKE FOR R ALONE TO COMPLETE THE WORK?**  
 A.  $9\frac{3}{5}$  days  
 B.  $9\frac{1}{5}$  days  
 C.  $9\frac{2}{5}$  days  
 D. 10 days
- 193. P, Q AND R CAN DO A WORK IN 20, 30 AND 60 DAYS RESPECTIVELY. HOW MANY DAYS DOES IT NEED TO COMPLETE THE WORK IF P DOES THE WORK AND HE IS ASSISTED BY Q AND R ON EVERY THIRD DAY?**  
 A. 10 days  
 B. 14 days  
 C. 15 days  
 D. 9 days
- 194. A IS THRICE AS GOOD AS B IN WORK. A IS ABLE TO FINISH A JOB IN 60 DAYS LESS THAN B. THEY CAN FINISH THE WORK IN - DAYS IF THEY WORK TOGETHER.**  
 A. 18 days  
 B.  $22\frac{1}{2}$  days

- C. 24 days
- D. 26 days

- 195. A CAN DO A PARTICULAR WORK IN 6 DAYS. B CAN DO THE SAME WORK IN 8 DAYS. A AND B SIGNED TO DO IT FOR RS. 3200. THEY COMPLETED THE WORK IN 3 DAYS WITH THE HELP OF C. HOW MUCH IS TO BE PAID TO C?**
- A. Rs. 380
  - B. Rs. 600
  - C. Rs. 420
  - D. Rs. 400
- 196. A MAN BUYS RS. 20 SHARES PAYING % DIVIDEND. THE MAN WANTS TO HAVE AN INTEREST OF 12% ON HIS MONEY. WHAT IS THE MARKET VALUE OF EACH SHARE?**
- A. Rs.12
  - B. Rs.18
  - C. Rs.15
  - D. Rs.21
- 197. A MAN INVESTED RS.1552 IN A STOCK AT 97 TO OBTAIN AN INCOME OF RS.128. WHAT IS THE DIVIDEND FROM THE STOCK?**
- A. None of these
  - B. 9.7%
  - C. 7.5%
  - D. 8%
- 198. HE COST PRICE OF A RS. 100 STOCK AT 4 DISCOUNT, WHEN BROKERAGE IS 1515% IS**
- A. Rs. 96.25
  - B. Rs. 96.2
  - C. Rs. 97.25
  - D. Rs. 97.5
- 199. IN ORDER TO OTAIN AN INCOME OF RS. 650 FROM 10% STOCK AT RS. 96, ONE MUST MAKE AN INVESTMENT OF?**
- A. Rs. 3100
  - B. Rs. 6500
  - C. Rs. 6240
  - D. Rs. 9600
- 200. BY INVESTING IN 1623% STOCK AT 64, ONE ARNS RS. 1500. THE INVESTMENT MADE IS**
- A. Rs. 9600
  - B. Rs. 7500
  - C. Rs. 5640
  - D. Rs. 5760